



Solve each problem.

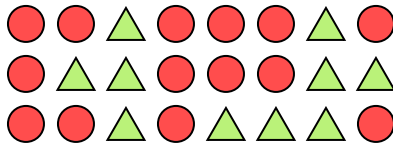
Ex) Express the hearts as a fraction of the entire set.



1) Express the moons as a fraction of the entire set.




2) Express the circles as a fraction of the entire set.



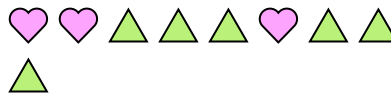
3) Express the moons as a fraction of the entire set.



4) Express the moons as a fraction of the entire set.




5) Express the triangles as a fraction of the entire set.




6) Express the stars as a fraction of the entire set.



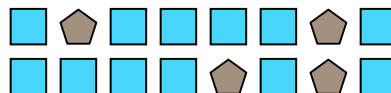
7) Express the squares as a fraction of the entire set.



8) Express the circles as a fraction of the entire set.



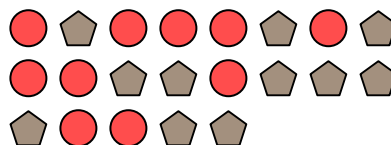
9) Express the squares as a fraction of the entire set.



10) Express the circles as a fraction of the entire set.



11) Express the pentagons as a fraction of the entire set.

**Answers**

Ex.	$\frac{9}{12}$
1.	$\frac{15}{24}$
2.	$\frac{14}{24}$
3.	$\frac{3}{5}$
4.	$\frac{11}{26}$
5.	$\frac{6}{9}$
6.	$\frac{3}{16}$
7.	$\frac{13}{24}$
8.	$\frac{7}{21}$
9.	$\frac{12}{16}$
10.	$\frac{2}{15}$
11.	$\frac{11}{21}$