

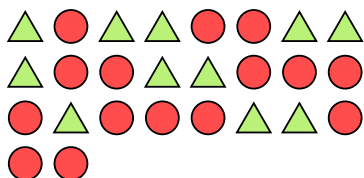


Solve each problem.

- Ex) Express the triangles as a fraction of the entire set.



- 1) Express the circles as a fraction of the entire set.



- 2) Express the pentagons as a fraction of the entire set.



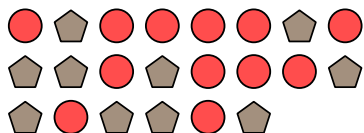
- 3) Express the squares as a fraction of the entire set.



- 4) Express the moons as a fraction of the entire set.




- 5) Express the circles as a fraction of the entire set.




- 6) Express the triangles as a fraction of the entire set.




- 7) Express the hearts as a fraction of the entire set.




- 8) Express the hearts as a fraction of the entire set.



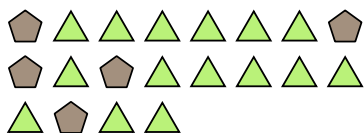
- 9) Express the hearts as a fraction of the entire set.



- 10) Express the squares as a fraction of the entire set.



- 11) Express the triangles as a fraction of the entire set.

**Answers**Ex. $\frac{3}{12}$

1. _____

2. _____

3. _____

4. _____

5. _____

6. _____

7. _____

8. _____

9. _____

10. _____

11. _____

