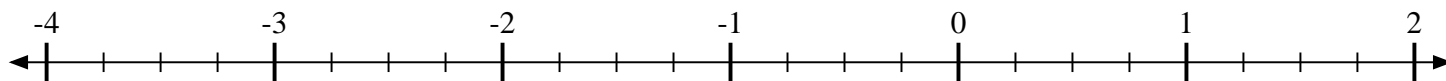
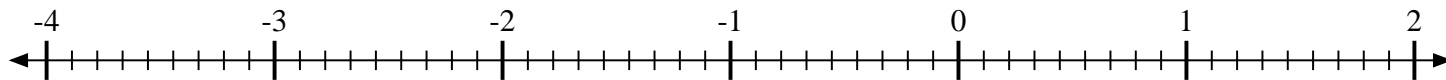


**Mark each location described.**

- 1) Mark the location of $-1\frac{2}{4}$



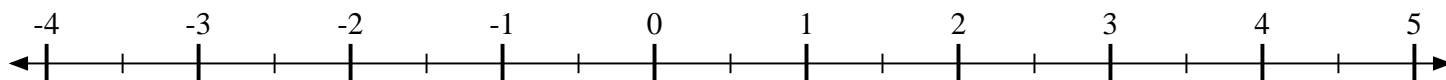
- 2) Mark the location of $\frac{2}{9}$



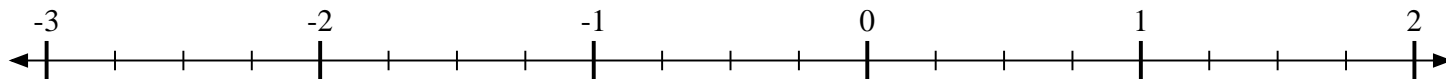
- 3) Mark the location of $\frac{1}{2}$



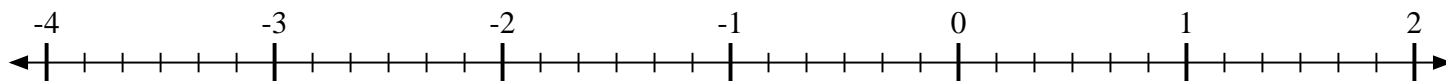
- 4) Mark the location of $3\frac{1}{2}$



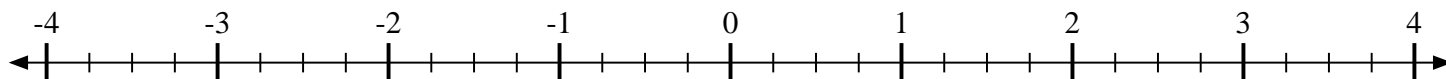
- 5) Mark the location of $-1\frac{2}{4}$



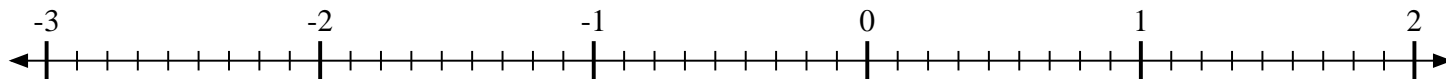
- 6) Mark the location of $-3\frac{2}{6}$



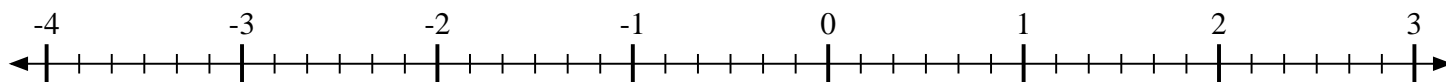
- 7) Mark the location of $-2\frac{2}{4}$



- 8) Mark the location of $\frac{8}{9}$



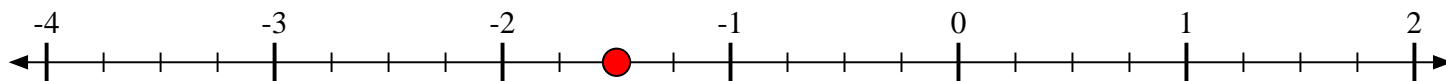
- 9) Mark the location of $-2\frac{3}{6}$



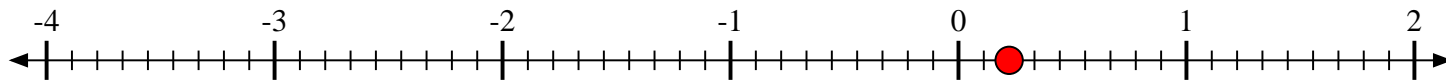


Mark each location described.

- 1) Mark the location of
- $-1\frac{2}{4}$



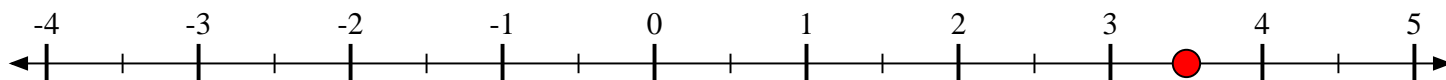
- 2) Mark the location of
- $\frac{2}{9}$



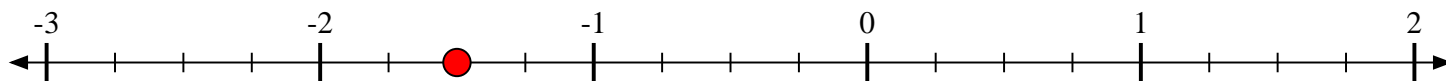
- 3) Mark the location of
- $\frac{1}{2}$



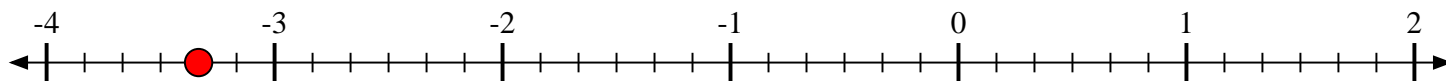
- 4) Mark the location of
- $3\frac{1}{2}$



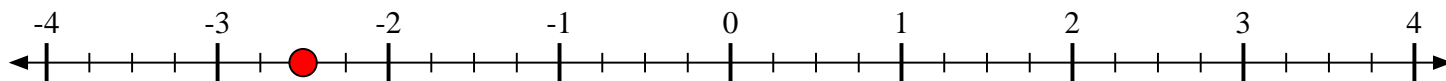
- 5) Mark the location of
- $-1\frac{2}{4}$



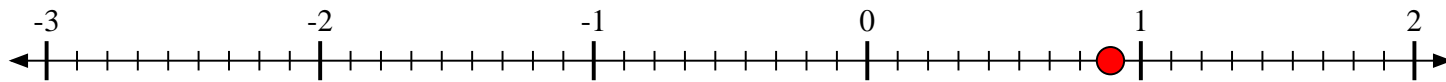
- 6) Mark the location of
- $-3\frac{2}{6}$



- 7) Mark the location of
- $-2\frac{2}{4}$



- 8) Mark the location of
- $\frac{8}{9}$



- 9) Mark the location of
- $-2\frac{3}{6}$

