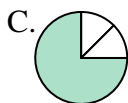




Determine which letter best represents each fraction.

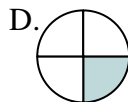
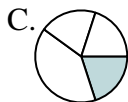
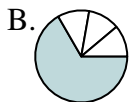
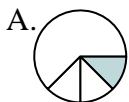
Answers

- 1) Which choice best represents $\frac{1}{3}$?



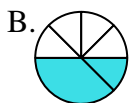
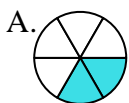
1. _____

- 2) Which choice best represents $\frac{1}{4}$?



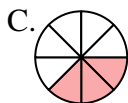
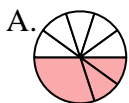
2. _____

- 3) Which choice best represents $\frac{2}{6}$?



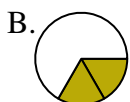
4. _____

- 4) Which choice best represents $\frac{3}{8}$?



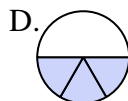
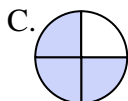
6. _____

- 5) Which choice best represents $\frac{2}{3}$?



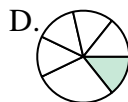
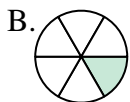
7. _____

- 6) Which choice best represents $\frac{3}{4}$?



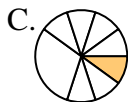
9. _____

- 7) Which choice best represents $\frac{1}{6}$?



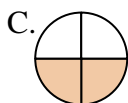
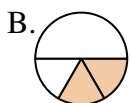
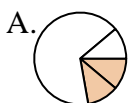
10. _____

- 8) Which choice best represents $\frac{1}{8}$?



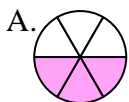
11. _____

- 9) Which choice best represents $\frac{2}{4}$?

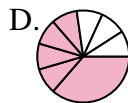
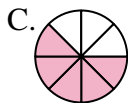
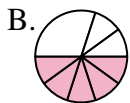
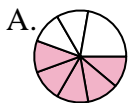


12. _____

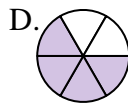
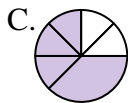
- 10) Which choice best represents $\frac{3}{6}$?



- 11) Which choice best represents $\frac{5}{8}$?



















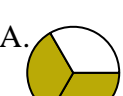




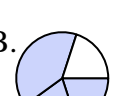
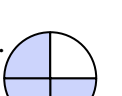


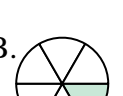








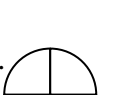









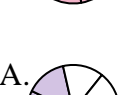
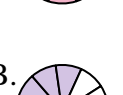
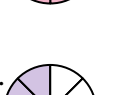

- 12) Which choice best represents $\frac{4}{6}$?





Determine which letter best represents each fraction.

Answers

- 1) Which choice best represents $\frac{1}{3}$? A.  B.  C.  D. 
- 2) Which choice best represents $\frac{1}{4}$? A.  B.  C.  D. 
- 3) Which choice best represents $\frac{2}{6}$? A.  B.  C.  D. 
- 4) Which choice best represents $\frac{3}{8}$? A.  B.  C.  D. 
- 5) Which choice best represents $\frac{2}{3}$? A.  B.  C.  D. 
- 6) Which choice best represents $\frac{3}{4}$? A.  B.  C.  D. 
- 7) Which choice best represents $\frac{1}{6}$? A.  B.  C.  D. 
- 8) Which choice best represents $\frac{1}{8}$? A.  B.  C.  D. 
- 9) Which choice best represents $\frac{2}{4}$? A.  B.  C.  D. 
- 10) Which choice best represents $\frac{3}{6}$? A.  B.  C.  D. 
- 11) Which choice best represents $\frac{5}{8}$? A.  B.  C.  D. 
- 12) Which choice best represents $\frac{4}{6}$? A.  B.  C.  D. 

1. **D**
2. **D**
3. **A**
4. **C**
5. **A**
6. **C**
7. **B**
8. **A**
9. **C**
10. **A**
11. **C**
12. **D**