

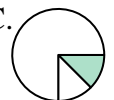





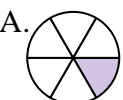





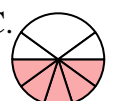


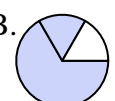
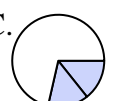



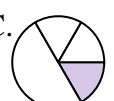



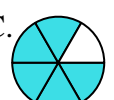



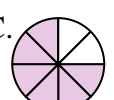






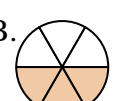




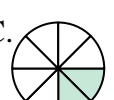



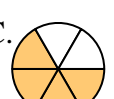





Determine which letter best represents each fraction.

Answers


















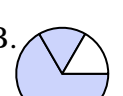
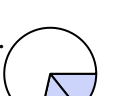



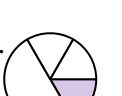







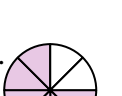















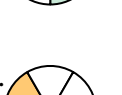

- 1) Which choice best represents $\frac{1}{3}$? A.  B.  C.  D. 
- 2) Which choice best represents $\frac{3}{4}$? A.  B.  C.  D. 
- 3) Which choice best represents $\frac{1}{6}$? A.  B.  C.  D. 
- 4) Which choice best represents $\frac{5}{8}$? A.  B.  C.  D. 
- 5) Which choice best represents $\frac{2}{3}$? A.  B.  C.  D. 
- 6) Which choice best represents $\frac{1}{4}$? A.  B.  C.  D. 
- 7) Which choice best represents $\frac{5}{6}$? A.  B.  C.  D. 
- 8) Which choice best represents $\frac{6}{8}$? A.  B.  C.  D. 
- 9) Which choice best represents $\frac{2}{4}$? A.  B.  C.  D. 
- 10) Which choice best represents $\frac{3}{6}$? A.  B.  C.  D. 
- 11) Which choice best represents $\frac{2}{8}$? A.  B.  C.  D. 
- 12) Which choice best represents $\frac{4}{6}$? A.  B.  C.  D. 

1. _____
2. _____
3. _____
4. _____
5. _____
6. _____
7. _____
8. _____
9. _____
10. _____
11. _____
12. _____



Determine which letter best represents each fraction.

Answers

- 1) Which choice best represents $\frac{1}{3}$? A.  B.  C.  D. 
- 2) Which choice best represents $\frac{3}{4}$? A.  B.  C.  D. 
- 3) Which choice best represents $\frac{1}{6}$? A.  B.  C.  D. 
- 4) Which choice best represents $\frac{5}{8}$? A.  B.  C.  D. 
- 5) Which choice best represents $\frac{2}{3}$? A.  B.  C.  D. 
- 6) Which choice best represents $\frac{1}{4}$? A.  B.  C.  D. 
- 7) Which choice best represents $\frac{5}{6}$? A.  B.  C.  D. 
- 8) Which choice best represents $\frac{6}{8}$? A.  B.  C.  D. 
- 9) Which choice best represents $\frac{2}{4}$? A.  B.  C.  D. 
- 10) Which choice best represents $\frac{3}{6}$? A.  B.  C.  D. 
- 11) Which choice best represents $\frac{2}{8}$? A.  B.  C.  D. 
- 12) Which choice best represents $\frac{4}{6}$? A.  B.  C.  D. 

1. **D**
2. **D**
3. **A**
4. **A**
5. **D**
6. **A**
7. **C**
8. **C**
9. **D**
10. **B**
11. **C**
12. **C**