
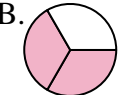

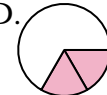












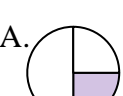

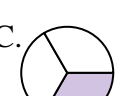















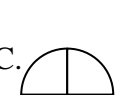











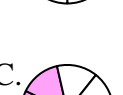





Determine which letter best represents each fraction.

Answers


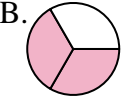

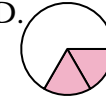


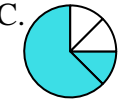
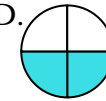
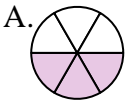
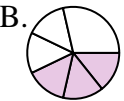




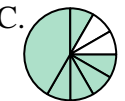

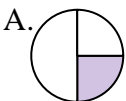
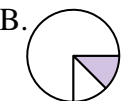
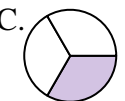











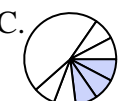



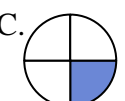


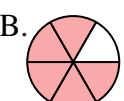










- 1) Which choice best represents $\frac{2}{3}$? A.  B.  C.  D. 
- 2) Which choice best represents $\frac{2}{4}$? A.  B.  C.  D. 
- 3) Which choice best represents $\frac{3}{6}$? A.  B.  C.  D. 
- 4) Which choice best represents $\frac{6}{8}$? A.  B.  C.  D. 
- 5) Which choice best represents $\frac{1}{3}$? A.  B.  C.  D. 
- 6) Which choice best represents $\frac{3}{4}$? A.  B.  C.  D. 
- 7) Which choice best represents $\frac{2}{6}$? A.  B.  C.  D. 
- 8) Which choice best represents $\frac{3}{8}$? A.  B.  C.  D. 
- 9) Which choice best represents $\frac{1}{4}$? A.  B.  C.  D. 
- 10) Which choice best represents $\frac{5}{6}$? A.  B.  C.  D. 
- 11) Which choice best represents $\frac{2}{8}$? A.  B.  C.  D. 
- 12) Which choice best represents $\frac{4}{6}$? A.  B.  C.  D. 

1. _____
2. _____
3. _____
4. _____
5. _____
6. _____
7. _____
8. _____
9. _____
10. _____
11. _____
12. _____



Determine which letter best represents each fraction.

Answers

- 1) Which choice best represents $\frac{2}{3}$? A.  B.  C.  D. 
- 2) Which choice best represents $\frac{2}{4}$? A.  B.  C.  D. 
- 3) Which choice best represents $\frac{3}{6}$? A.  B.  C.  D. 
- 4) Which choice best represents $\frac{6}{8}$? A.  B.  C.  D. 
- 5) Which choice best represents $\frac{1}{3}$? A.  B.  C.  D. 
- 6) Which choice best represents $\frac{3}{4}$? A.  B.  C.  D. 
- 7) Which choice best represents $\frac{2}{6}$? A.  B.  C.  D. 
- 8) Which choice best represents $\frac{3}{8}$? A.  B.  C.  D. 
- 9) Which choice best represents $\frac{1}{4}$? A.  B.  C.  D. 
- 10) Which choice best represents $\frac{5}{6}$? A.  B.  C.  D. 
- 11) Which choice best represents $\frac{2}{8}$? A.  B.  C.  D. 
- 12) Which choice best represents $\frac{4}{6}$? A.  B.  C.  D. 

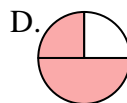
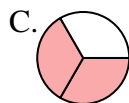
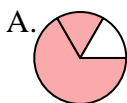
1. **B**
2. **D**
3. **A**
4. **A**
5. **C**
6. **B**
7. **D**
8. **B**
9. **C**
10. **B**
11. **B**
12. **D**



Determine which letter best represents each fraction.

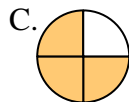
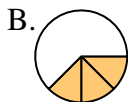
Answers

- 1) Which choice best represents $\frac{2}{3}$?



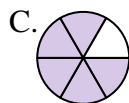
1. _____

- 2) Which choice best represents $\frac{3}{4}$?



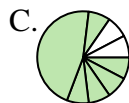
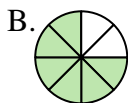
2. _____

- 3) Which choice best represents $\frac{5}{6}$?



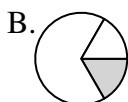
4. _____

- 4) Which choice best represents $\frac{6}{8}$?



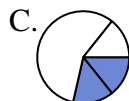
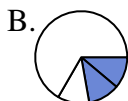
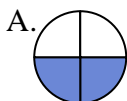
6. _____

- 5) Which choice best represents $\frac{1}{3}$?



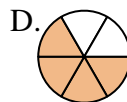
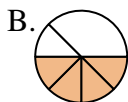
7. _____

- 6) Which choice best represents $\frac{2}{4}$?



9. _____

- 7) Which choice best represents $\frac{4}{6}$?



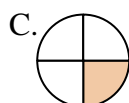
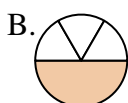
10. _____

- 8) Which choice best represents $\frac{5}{8}$?



11. _____

- 9) Which choice best represents $\frac{1}{4}$?



12. _____

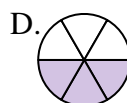
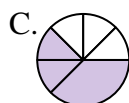
- 10) Which choice best represents $\frac{1}{6}$?



- 11) Which choice best represents $\frac{4}{8}$?





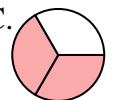



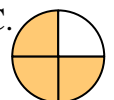


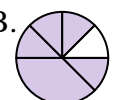
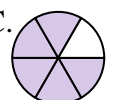


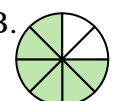



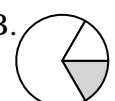
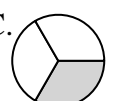






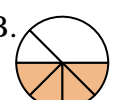




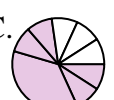


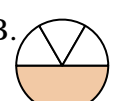
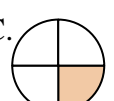


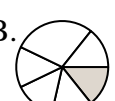
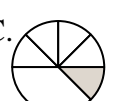







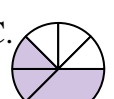

- 12) Which choice best represents $\frac{3}{6}$?





Determine which letter best represents each fraction.

Answers

















































- 1) Which choice best represents $\frac{2}{3}$? A.  B.  C.  D. 
- 2) Which choice best represents $\frac{3}{4}$? A.  B.  C.  D. 
- 3) Which choice best represents $\frac{5}{6}$? A.  B.  C.  D. 
- 4) Which choice best represents $\frac{6}{8}$? A.  B.  C.  D. 
- 5) Which choice best represents $\frac{1}{3}$? A.  B.  C.  D. 
- 6) Which choice best represents $\frac{2}{4}$? A.  B.  C.  D. 
- 7) Which choice best represents $\frac{4}{6}$? A.  B.  C.  D. 
- 8) Which choice best represents $\frac{5}{8}$? A.  B.  C.  D. 
- 9) Which choice best represents $\frac{1}{4}$? A.  B.  C.  D. 
- 10) Which choice best represents $\frac{1}{6}$? A.  B.  C.  D. 
- 11) Which choice best represents $\frac{4}{8}$? A.  B.  C.  D. 
- 12) Which choice best represents $\frac{3}{6}$? A.  B.  C.  D. 

1. **C**
2. **C**
3. **C**
4. **B**
5. **C**
6. **A**
7. **D**
8. **D**
9. **C**
10. **A**
11. **A**
12. **D**



Determine which letter best represents each fraction.

Answers

















































- 1) Which choice best represents $\frac{1}{3}$? A.  B.  C.  D. 
- 2) Which choice best represents $\frac{1}{4}$? A.  B.  C.  D. 
- 3) Which choice best represents $\frac{4}{6}$? A.  B.  C.  D. 
- 4) Which choice best represents $\frac{6}{8}$? A.  B.  C.  D. 
- 5) Which choice best represents $\frac{2}{3}$? A.  B.  C.  D. 
- 6) Which choice best represents $\frac{3}{4}$? A.  B.  C.  D. 
- 7) Which choice best represents $\frac{2}{6}$? A.  B.  C.  D. 
- 8) Which choice best represents $\frac{1}{8}$? A.  B.  C.  D. 
- 9) Which choice best represents $\frac{2}{4}$? A.  B.  C.  D. 
- 10) Which choice best represents $\frac{1}{6}$? A.  B.  C.  D. 
- 11) Which choice best represents $\frac{4}{8}$? A.  B.  C.  D. 
- 12) Which choice best represents $\frac{3}{6}$? A.  B.  C.  D. 

1. _____
2. _____
3. _____
4. _____
5. _____
6. _____
7. _____
8. _____
9. _____
10. _____
11. _____
12. _____



Determine which letter best represents each fraction.

Answers














































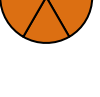


- 1) Which choice best represents $\frac{1}{3}$? A.  B.  C.  D. 
- 2) Which choice best represents $\frac{1}{4}$? A.  B.  C.  D. 
- 3) Which choice best represents $\frac{4}{6}$? A.  B.  C.  D. 
- 4) Which choice best represents $\frac{6}{8}$? A.  B.  C.  D. 
- 5) Which choice best represents $\frac{2}{3}$? A.  B.  C.  D. 
- 6) Which choice best represents $\frac{3}{4}$? A.  B.  C.  D. 
- 7) Which choice best represents $\frac{2}{6}$? A.  B.  C.  D. 
- 8) Which choice best represents $\frac{1}{8}$? A.  B.  C.  D. 
- 9) Which choice best represents $\frac{2}{4}$? A.  B.  C.  D. 
- 10) Which choice best represents $\frac{1}{6}$? A.  B.  C.  D. 
- 11) Which choice best represents $\frac{4}{8}$? A.  B.  C.  D. 
- 12) Which choice best represents $\frac{3}{6}$? A.  B.  C.  D. 

1. **D**
2. **B**
3. **B**
4. **B**
5. **A**
6. **A**
7. **D**
8. **A**
9. **D**
10. **D**
11. **C**
12. **C**



Determine which letter best represents each fraction.

Answers

















































- 1) Which choice best represents $\frac{2}{3}$? A.  B.  C.  D. 
- 2) Which choice best represents $\frac{1}{4}$? A.  B.  C.  D. 
- 3) Which choice best represents $\frac{1}{6}$? A.  B.  C.  D. 
- 4) Which choice best represents $\frac{5}{8}$? A.  B.  C.  D. 
- 5) Which choice best represents $\frac{1}{3}$? A.  B.  C.  D. 
- 6) Which choice best represents $\frac{2}{4}$? A.  B.  C.  D. 
- 7) Which choice best represents $\frac{3}{6}$? A.  B.  C.  D. 
- 8) Which choice best represents $\frac{7}{8}$? A.  B.  C.  D. 
- 9) Which choice best represents $\frac{3}{4}$? A.  B.  C.  D. 
- 10) Which choice best represents $\frac{5}{6}$? A.  B.  C.  D. 
- 11) Which choice best represents $\frac{6}{8}$? A.  B.  C.  D. 
- 12) Which choice best represents $\frac{4}{6}$? A.  B.  C.  D. 

1. _____
2. _____
3. _____
4. _____
5. _____
6. _____
7. _____
8. _____
9. _____
10. _____
11. _____
12. _____



Determine which letter best represents each fraction.

Answers






















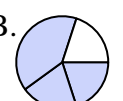
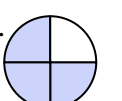


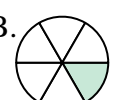







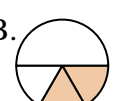
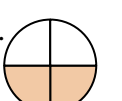











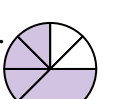

- 1) Which choice best represents $\frac{2}{3}$? A.  B.  C.  D. 
- 2) Which choice best represents $\frac{1}{4}$? A.  B.  C.  D. 
- 3) Which choice best represents $\frac{1}{6}$? A.  B.  C.  D. 
- 4) Which choice best represents $\frac{5}{8}$? A.  B.  C.  D. 
- 5) Which choice best represents $\frac{1}{3}$? A.  B.  C.  D. 
- 6) Which choice best represents $\frac{2}{4}$? A.  B.  C.  D. 
- 7) Which choice best represents $\frac{3}{6}$? A.  B.  C.  D. 
- 8) Which choice best represents $\frac{7}{8}$? A.  B.  C.  D. 
- 9) Which choice best represents $\frac{3}{4}$? A.  B.  C.  D. 
- 10) Which choice best represents $\frac{5}{6}$? A.  B.  C.  D. 
- 11) Which choice best represents $\frac{6}{8}$? A.  B.  C.  D. 
- 12) Which choice best represents $\frac{4}{6}$? A.  B.  C.  D. 

1. **A**
2. **D**
3. **D**
4. **D**
5. **C**
6. **A**
7. **C**
8. **D**
9. **B**
10. **A**
11. **B**
12. **B**



Determine which letter best represents each fraction.

Answers






















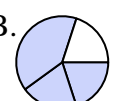
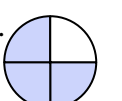


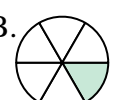







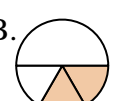
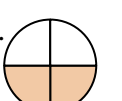











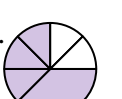

- 1) Which choice best represents $\frac{1}{3}$? A.  B.  C.  D. 
- 2) Which choice best represents $\frac{1}{4}$? A.  B.  C.  D. 
- 3) Which choice best represents $\frac{2}{6}$? A.  B.  C.  D. 
- 4) Which choice best represents $\frac{3}{8}$? A.  B.  C.  D. 
- 5) Which choice best represents $\frac{2}{3}$? A.  B.  C.  D. 
- 6) Which choice best represents $\frac{3}{4}$? A.  B.  C.  D. 
- 7) Which choice best represents $\frac{1}{6}$? A.  B.  C.  D. 
- 8) Which choice best represents $\frac{1}{8}$? A.  B.  C.  D. 
- 9) Which choice best represents $\frac{2}{4}$? A.  B.  C.  D. 
- 10) Which choice best represents $\frac{3}{6}$? A.  B.  C.  D. 
- 11) Which choice best represents $\frac{5}{8}$? A.  B.  C.  D. 
- 12) Which choice best represents $\frac{4}{6}$? A.  B.  C.  D. 

1. _____
2. _____
3. _____
4. _____
5. _____
6. _____
7. _____
8. _____
9. _____
10. _____
11. _____
12. _____



Determine which letter best represents each fraction.

Answers

















































- 1) Which choice best represents $\frac{1}{3}$? A.  B.  C.  D. 
- 2) Which choice best represents $\frac{1}{4}$? A.  B.  C.  D. 
- 3) Which choice best represents $\frac{2}{6}$? A.  B.  C.  D. 
- 4) Which choice best represents $\frac{3}{8}$? A.  B.  C.  D. 
- 5) Which choice best represents $\frac{2}{3}$? A.  B.  C.  D. 
- 6) Which choice best represents $\frac{3}{4}$? A.  B.  C.  D. 
- 7) Which choice best represents $\frac{1}{6}$? A.  B.  C.  D. 
- 8) Which choice best represents $\frac{1}{8}$? A.  B.  C.  D. 
- 9) Which choice best represents $\frac{2}{4}$? A.  B.  C.  D. 
- 10) Which choice best represents $\frac{3}{6}$? A.  B.  C.  D. 
- 11) Which choice best represents $\frac{5}{8}$? A.  B.  C.  D. 
- 12) Which choice best represents $\frac{4}{6}$? A.  B.  C.  D. 

1. **D**
2. **D**
3. **A**
4. **C**
5. **A**
6. **C**
7. **B**
8. **A**
9. **C**
10. **A**
11. **C**
12. **D**



Determine which letter best represents each fraction.

Answers














































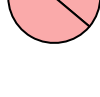


- 1) Which choice best represents $\frac{1}{3}$? A.  B.  C.  D. 
- 2) Which choice best represents $\frac{1}{4}$? A.  B.  C.  D. 
- 3) Which choice best represents $\frac{5}{6}$? A.  B.  C.  D. 
- 4) Which choice best represents $\frac{1}{8}$? A.  B.  C.  D. 
- 5) Which choice best represents $\frac{2}{3}$? A.  B.  C.  D. 
- 6) Which choice best represents $\frac{2}{4}$? A.  B.  C.  D. 
- 7) Which choice best represents $\frac{1}{6}$? A.  B.  C.  D. 
- 8) Which choice best represents $\frac{3}{8}$? A.  B.  C.  D. 
- 9) Which choice best represents $\frac{3}{4}$? A.  B.  C.  D. 
- 10) Which choice best represents $\frac{4}{6}$? A.  B.  C.  D. 
- 11) Which choice best represents $\frac{6}{8}$? A.  B.  C.  D. 
- 12) Which choice best represents $\frac{2}{6}$? A.  B.  C.  D. 

1. _____
2. _____
3. _____
4. _____
5. _____
6. _____
7. _____
8. _____
9. _____
10. _____
11. _____
12. _____



Determine which letter best represents each fraction.

Answers














































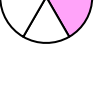

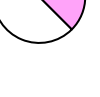
- 1) Which choice best represents $\frac{1}{3}$? A.  B.  C.  D. 
- 2) Which choice best represents $\frac{1}{4}$? A.  B.  C.  D. 
- 3) Which choice best represents $\frac{5}{6}$? A.  B.  C.  D. 
- 4) Which choice best represents $\frac{1}{8}$? A.  B.  C.  D. 
- 5) Which choice best represents $\frac{2}{3}$? A.  B.  C.  D. 
- 6) Which choice best represents $\frac{2}{4}$? A.  B.  C.  D. 
- 7) Which choice best represents $\frac{1}{6}$? A.  B.  C.  D. 
- 8) Which choice best represents $\frac{3}{8}$? A.  B.  C.  D. 
- 9) Which choice best represents $\frac{3}{4}$? A.  B.  C.  D. 
- 10) Which choice best represents $\frac{4}{6}$? A.  B.  C.  D. 
- 11) Which choice best represents $\frac{6}{8}$? A.  B.  C.  D. 
- 12) Which choice best represents $\frac{2}{6}$? A.  B.  C.  D. 

1. **A**
2. **D**
3. **B**
4. **A**
5. **A**
6. **A**
7. **B**
8. **A**
9. **C**
10. **B**
11. **D**
12. **A**



Determine which letter best represents each fraction.

Answers














































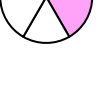

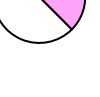
- 1) Which choice best represents $\frac{1}{3}$? A.  B.  C.  D. 
- 2) Which choice best represents $\frac{2}{4}$? A.  B.  C.  D. 
- 3) Which choice best represents $\frac{4}{6}$? A.  B.  C.  D. 
- 4) Which choice best represents $\frac{1}{8}$? A.  B.  C.  D. 
- 5) Which choice best represents $\frac{2}{3}$? A.  B.  C.  D. 
- 6) Which choice best represents $\frac{1}{4}$? A.  B.  C.  D. 
- 7) Which choice best represents $\frac{3}{6}$? A.  B.  C.  D. 
- 8) Which choice best represents $\frac{5}{8}$? A.  B.  C.  D. 
- 9) Which choice best represents $\frac{3}{4}$? A.  B.  C.  D. 
- 10) Which choice best represents $\frac{2}{6}$? A.  B.  C.  D. 
- 11) Which choice best represents $\frac{7}{8}$? A.  B.  C.  D. 
- 12) Which choice best represents $\frac{1}{6}$? A.  B.  C.  D. 

1. _____
2. _____
3. _____
4. _____
5. _____
6. _____
7. _____
8. _____
9. _____
10. _____
11. _____
12. _____



Determine which letter best represents each fraction.

Answers

- 1) Which choice best represents $\frac{1}{3}$? A.  B.  C.  D. 
- 2) Which choice best represents $\frac{2}{4}$? A.  B.  C.  D. 
- 3) Which choice best represents $\frac{4}{6}$? A.  B.  C.  D. 
- 4) Which choice best represents $\frac{1}{8}$? A.  B.  C.  D. 
- 5) Which choice best represents $\frac{2}{3}$? A.  B.  C.  D. 
- 6) Which choice best represents $\frac{1}{4}$? A.  B.  C.  D. 
- 7) Which choice best represents $\frac{3}{6}$? A.  B.  C.  D. 
- 8) Which choice best represents $\frac{5}{8}$? A.  B.  C.  D. 
- 9) Which choice best represents $\frac{3}{4}$? A.  B.  C.  D. 
- 10) Which choice best represents $\frac{2}{6}$? A.  B.  C.  D. 
- 11) Which choice best represents $\frac{7}{8}$? A.  B.  C.  D. 
- 12) Which choice best represents $\frac{1}{6}$? A.  B.  C.  D. 

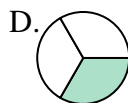
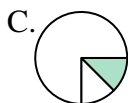
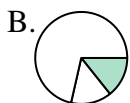
1. **C**
2. **B**
3. **B**
4. **C**
5. **C**
6. **B**
7. **A**
8. **B**
9. **B**
10. **A**
11. **B**
12. **B**



Determine which letter best represents each fraction.

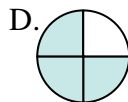
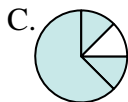
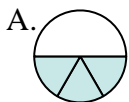
Answers

- 1) Which choice best represents $\frac{1}{3}$?



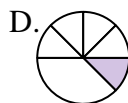
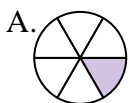
1. _____

- 2) Which choice best represents $\frac{3}{4}$?



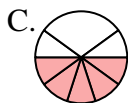
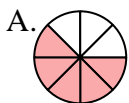
2. _____

- 3) Which choice best represents $\frac{1}{6}$?



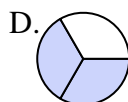
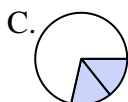
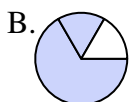
4. _____

- 4) Which choice best represents $\frac{5}{8}$?



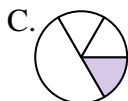
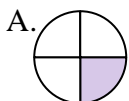
6. _____

- 5) Which choice best represents $\frac{2}{3}$?



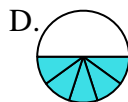
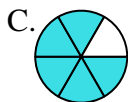
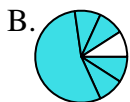
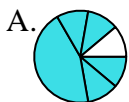
7. _____

- 6) Which choice best represents $\frac{1}{4}$?



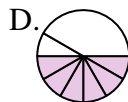
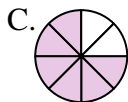
9. _____

- 7) Which choice best represents $\frac{5}{6}$?



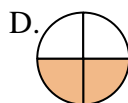
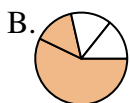
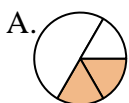
11. _____

- 8) Which choice best represents $\frac{6}{8}$?

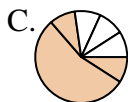
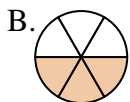


12. _____

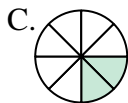
- 9) Which choice best represents $\frac{2}{4}$?



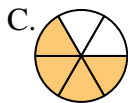
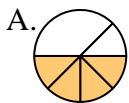
- 10) Which choice best represents $\frac{3}{6}$?



- 11) Which choice best represents $\frac{2}{8}$?




















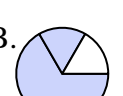
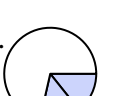



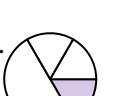







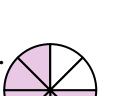















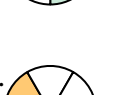

- 12) Which choice best represents $\frac{4}{6}$?





Determine which letter best represents each fraction.

Answers

















































- 1) Which choice best represents $\frac{1}{3}$? A.  B.  C.  D. 
- 2) Which choice best represents $\frac{3}{4}$? A.  B.  C.  D. 
- 3) Which choice best represents $\frac{1}{6}$? A.  B.  C.  D. 
- 4) Which choice best represents $\frac{5}{8}$? A.  B.  C.  D. 
- 5) Which choice best represents $\frac{2}{3}$? A.  B.  C.  D. 
- 6) Which choice best represents $\frac{1}{4}$? A.  B.  C.  D. 
- 7) Which choice best represents $\frac{5}{6}$? A.  B.  C.  D. 
- 8) Which choice best represents $\frac{6}{8}$? A.  B.  C.  D. 
- 9) Which choice best represents $\frac{2}{4}$? A.  B.  C.  D. 
- 10) Which choice best represents $\frac{3}{6}$? A.  B.  C.  D. 
- 11) Which choice best represents $\frac{2}{8}$? A.  B.  C.  D. 
- 12) Which choice best represents $\frac{4}{6}$? A.  B.  C.  D. 

1. **D**
2. **D**
3. **A**
4. **A**
5. **D**
6. **A**
7. **C**
8. **C**
9. **D**
10. **B**
11. **C**
12. **C**



Determine which letter best represents each fraction.

Answers

- 1) Which choice best represents $\frac{2}{3}$? A.  B.  C.  D. 
- 2) Which choice best represents $\frac{2}{4}$? A.  B.  C.  D. 
- 3) Which choice best represents $\frac{4}{6}$? A.  B.  C.  D. 
- 4) Which choice best represents $\frac{7}{8}$? A.  B.  C.  D. 
- 5) Which choice best represents $\frac{1}{3}$? A.  B.  C.  D. 
- 6) Which choice best represents $\frac{3}{4}$? A.  B.  C.  D. 
- 7) Which choice best represents $\frac{1}{6}$? A.  B.  C.  D. 
- 8) Which choice best represents $\frac{3}{8}$? A.  B.  C.  D. 
- 9) Which choice best represents $\frac{1}{4}$? A.  B.  C.  D. 
- 10) Which choice best represents $\frac{2}{6}$? A.  B.  C.  D. 
- 11) Which choice best represents $\frac{2}{8}$? A.  B.  C.  D. 
- 12) Which choice best represents $\frac{5}{6}$? A.  B.  C.  D. 

1. _____

2. _____

3. _____

4. _____

5. _____

6. _____

7. _____

8. _____

9. _____

10. _____

















































11. _____

12. _____



Determine which letter best represents each fraction.

Answers

















































- 1) Which choice best represents $\frac{2}{3}$? A.  B.  C.  D. 
- 2) Which choice best represents $\frac{2}{4}$? A.  B.  C.  D. 
- 3) Which choice best represents $\frac{4}{6}$? A.  B.  C.  D. 
- 4) Which choice best represents $\frac{7}{8}$? A.  B.  C.  D. 
- 5) Which choice best represents $\frac{1}{3}$? A.  B.  C.  D. 
- 6) Which choice best represents $\frac{3}{4}$? A.  B.  C.  D. 
- 7) Which choice best represents $\frac{1}{6}$? A.  B.  C.  D. 
- 8) Which choice best represents $\frac{3}{8}$? A.  B.  C.  D. 
- 9) Which choice best represents $\frac{1}{4}$? A.  B.  C.  D. 
- 10) Which choice best represents $\frac{2}{6}$? A.  B.  C.  D. 
- 11) Which choice best represents $\frac{2}{8}$? A.  B.  C.  D. 
- 12) Which choice best represents $\frac{5}{6}$? A.  B.  C.  D. 

1. **D**
2. **A**
3. **D**
4. **B**
5. **D**
6. **B**
7. **D**
8. **B**
9. **A**
10. **A**
11. **B**
12. **C**



Determine which letter best represents each fraction.

Answers

















































- 1) Which choice best represents $\frac{2}{3}$? A.  B.  C.  D. 
- 2) Which choice best represents $\frac{1}{4}$? A.  B.  C.  D. 
- 3) Which choice best represents $\frac{5}{6}$? A.  B.  C.  D. 
- 4) Which choice best represents $\frac{3}{8}$? A.  B.  C.  D. 
- 5) Which choice best represents $\frac{1}{3}$? A.  B.  C.  D. 
- 6) Which choice best represents $\frac{2}{4}$? A.  B.  C.  D. 
- 7) Which choice best represents $\frac{3}{6}$? A.  B.  C.  D. 
- 8) Which choice best represents $\frac{7}{8}$? A.  B.  C.  D. 
- 9) Which choice best represents $\frac{3}{4}$? A.  B.  C.  D. 
- 10) Which choice best represents $\frac{1}{6}$? A.  B.  C.  D. 
- 11) Which choice best represents $\frac{2}{8}$? A.  B.  C.  D. 
- 12) Which choice best represents $\frac{2}{6}$? A.  B.  C.  D. 

1. _____
2. _____
3. _____
4. _____
5. _____
6. _____
7. _____
8. _____
9. _____
10. _____
11. _____
12. _____



Determine which letter best represents each fraction.

Answers

- 1) Which choice best represents $\frac{2}{3}$? A.  B.  C.  D. 
- 2) Which choice best represents $\frac{1}{4}$? A.  B.  C.  D. 
- 3) Which choice best represents $\frac{5}{6}$? A.  B.  C.  D. 
- 4) Which choice best represents $\frac{3}{8}$? A.  B.  C.  D. 
- 5) Which choice best represents $\frac{1}{3}$? A.  B.  C.  D. 
- 6) Which choice best represents $\frac{2}{4}$? A.  B.  C.  D. 
- 7) Which choice best represents $\frac{3}{6}$? A.  B.  C.  D. 
- 8) Which choice best represents $\frac{7}{8}$? A.  B.  C.  D. 
- 9) Which choice best represents $\frac{3}{4}$? A.  B.  C.  D. 
- 10) Which choice best represents $\frac{1}{6}$? A.  B.  C.  D. 
- 11) Which choice best represents $\frac{2}{8}$? A.  B.  C.  D. 
- 12) Which choice best represents $\frac{2}{6}$? A.  B.  C.  D. 

1. **A**
2. **A**
3. **D**
4. **D**
5. **B**
6. **D**
7. **B**
8. **D**
9. **A**
10. **D**
11. **C**
12. **A**