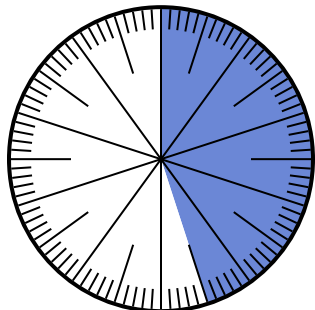




Solve each problem.

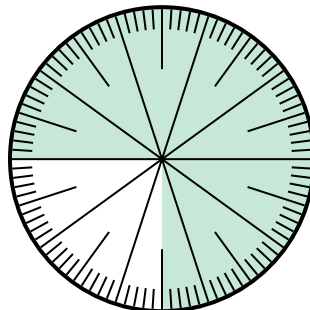
**Answers**

- 1) Which choice represents the shaded portion of the number wheel?



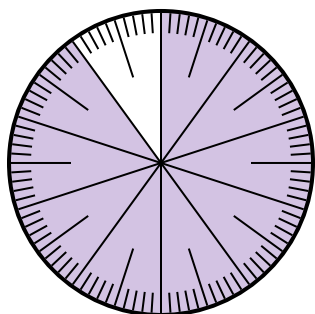
- A.  $\frac{45}{100}$       B.  $\frac{55}{45}$   
C.  $\frac{45}{55}$       D.  $\frac{4.5}{100}$

- 2) Which choice represents the shaded portion of the number wheel?



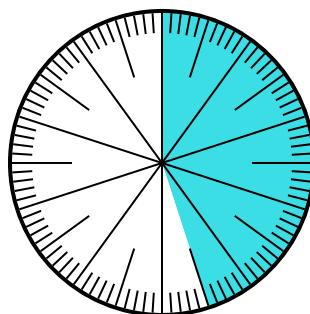
- A.  $\frac{0.75}{100}$       B. 0.75  
C.  $\frac{7.50}{100}$       D.  $\frac{7.5}{100}$

- 3) Which choice represents the shaded portion of the number wheel?



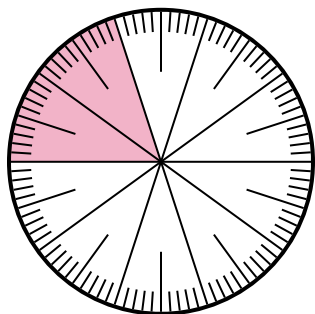
- A. 90      B. 0.090  
C.  $\frac{90}{100}$       D.  $\frac{9}{100}$

- 4) Which choice represents the un-shaded portion of the number wheel?



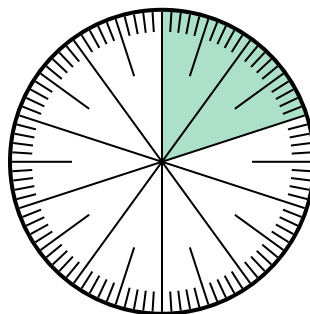
- A. 5.5      B. 55  
C.  $\frac{5.5}{100}$       D.  $\frac{55}{100}$

- 5) Which choice represents the un-shaded portion of the number wheel?



- A.  $\frac{20}{80}$       B. 0.80  
C.  $\frac{8}{100}$       D. 8

- 6) Which choice represents the un-shaded portion of the number wheel?



- A. 80      B. 8  
C.  $\frac{0.8}{100}$       D.  $\frac{80}{100}$

1. \_\_\_\_\_

2. \_\_\_\_\_

3. \_\_\_\_\_

4. \_\_\_\_\_

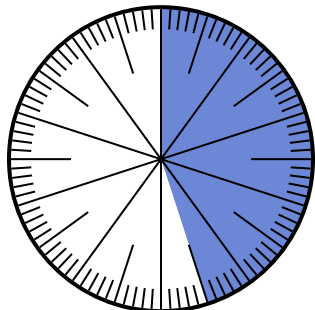
5. \_\_\_\_\_

6. \_\_\_\_\_



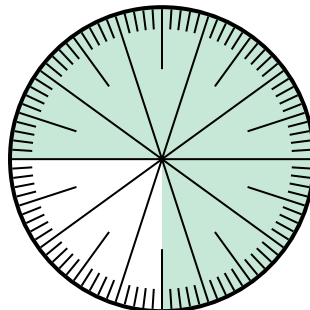
Solve each problem.

- 1) Which choice represents the shaded portion of the number wheel?



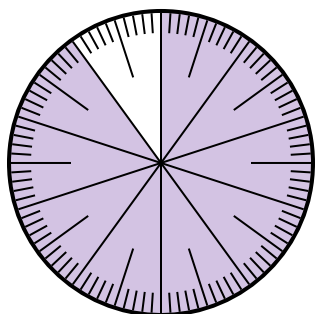
- A.  $\frac{45}{100}$       B.  $\frac{55}{45}$   
C.  $\frac{45}{55}$       D.  $\frac{4.5}{100}$

- 2) Which choice represents the shaded portion of the number wheel?



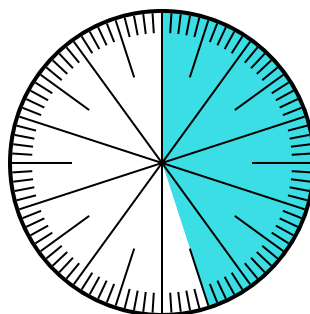
- A.  $\frac{0.75}{100}$       B. 0.75  
C.  $\frac{7.50}{100}$       D.  $\frac{7.5}{100}$

- 3) Which choice represents the shaded portion of the number wheel?



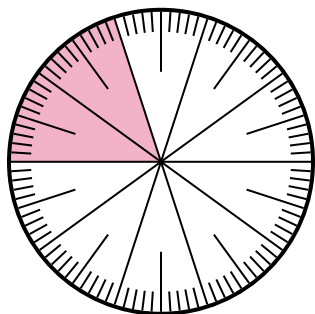
- A. 90      B. 0.090  
C.  $\frac{90}{100}$       D.  $\frac{9}{100}$

- 4) Which choice represents the un-shaded portion of the number wheel?



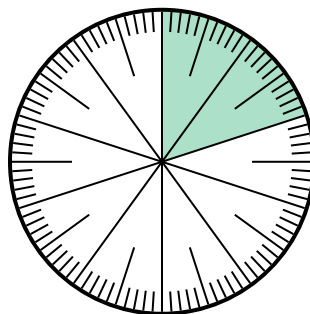
- A. 5.5      B. 55  
C.  $\frac{5.5}{100}$       D.  $\frac{55}{100}$

- 5) Which choice represents the un-shaded portion of the number wheel?



- A.  $\frac{20}{80}$       B. 0.80  
C.  $\frac{8}{100}$       D. 8

- 6) Which choice represents the un-shaded portion of the number wheel?



- A. 80      B. 8  
C.  $\frac{0.8}{100}$       D.  $\frac{80}{100}$

**Answers**

1. **A**  
2. **B**  
3. **C**  
4. **D**  
5. **B**  
6. **D**