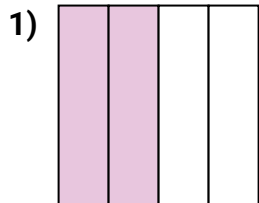





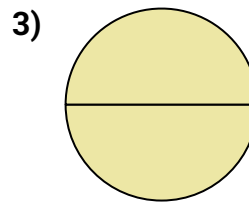
Determine which letter best describes the shaded portion.

Answers

- A. two-quarters
B. one-half
C. two-halves



- A. one-half
B. three-fourths
C. two-quarters



- A. one-fourth
B. four-fourths
C. two-halves

1. _____

2. _____

3. _____

4. _____

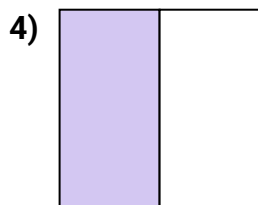
5. _____

6. _____

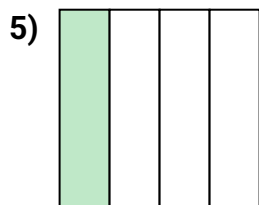
7. _____

8. _____

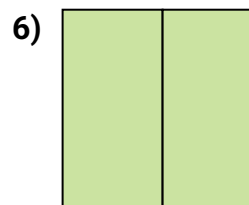
9. _____



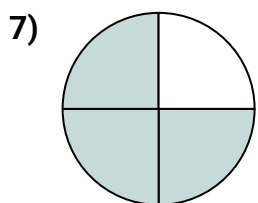
- A. one-half
B. two-halves
C. two-quarters



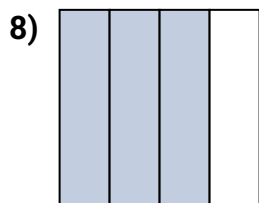
- A. one-fourth
B. two-fourths
C. one-half



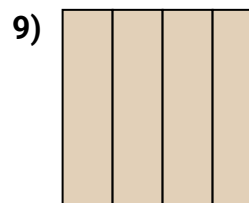
- A. one-half
B. two-halves
C. four-quarters



- A. two-halves
B. two-fourths
C. three-quarters



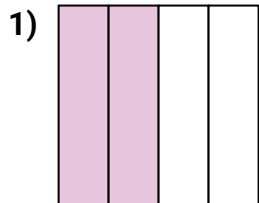
- A. three-quarters
B. one-fourth
C. two-halves




- A. one-quarter
B. two-quarters
C. four-quarters



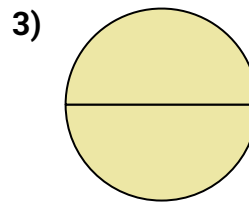
Determine which letter best describes the shaded portion.

Answers

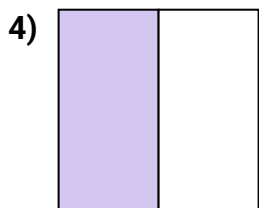
- A. two-quarters
B. one-half
C. two-halves




- A. one-half
B. three-fourths
C. two-quarters



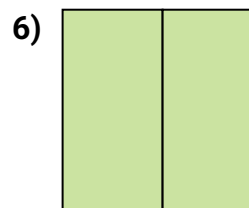
- A. one-fourth
B. four-fourths
C. two-halves



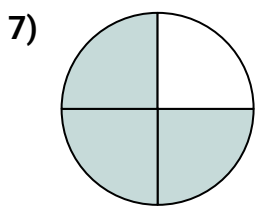
- A. one-half
B. two-halves
C. two-quarters



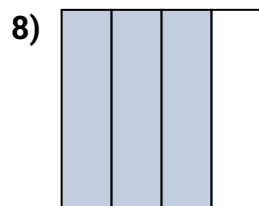
- A. one-fourth
B. two-fourths
C. one-half



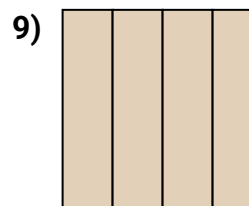
- A. one-half
B. two-halves
C. four-quarters



- A. two-halves
B. two-fourths
C. three-quarters



- A. three-quarters
B. one-fourth
C. two-halves



- A. one-quarter
B. two-quarters
C. four-quarters

1. **A**2. **A**3. **C**4. **A**5. **A**6. **B**7. **C**8. **A**9. **C**