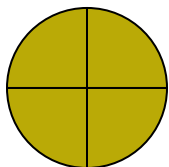


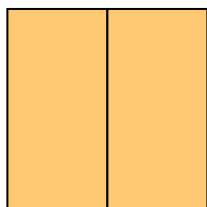
**Determine which letter best describes the shaded portion.****Answers**

1)




- A. two-halves
B. four-fourths
C. one-half

2)



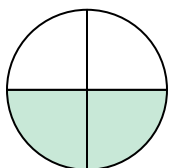
- A. one-quarter
B. two-fourths
C. two-halves

3)



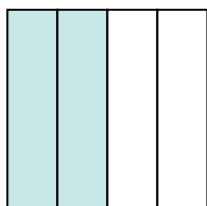
- A. two-halves
B. two-quarters
C. four-fourths

4)




- A. two-fourths
B. one-fourth
C. one-half

5)




- A. four-quarters
B. three-quarters
C. two-fourths

6)



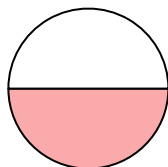
- A. one-half
B. two-halves
C. four-fourths

7)



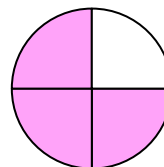
- A. one-half
B. one-quarter
C. two-halves

8)



- A. one-half
B. one-quarter
C. two-fourths

9)



- A. three-quarters
B. one-quarter
C. four-quarters

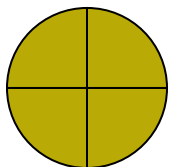
1. _____
2. _____
3. _____
4. _____
5. _____
6. _____
7. _____
8. _____
9. _____



Determine which letter best describes the shaded portion.


Answers

1)




- A. two-halves
B. four-fourths
C. one-half

2)



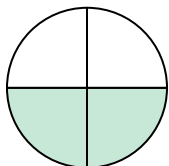
- A. one-quarter
B. two-fourths
C. two-halves

3)



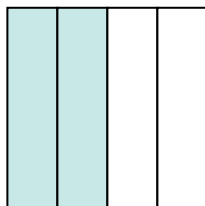
- A. two-halves
B. two-quarters
C. four-fourths

4)




- A. two-fourths
B. one-fourth
C. one-half

5)




- A. four-quarters
B. three-quarters
C. two-fourths

6)



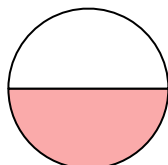
- A. one-half
B. two-halves
C. four-fourths

7)



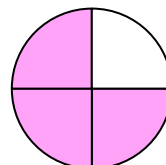
- A. one-half
B. one-quarter
C. two-halves

8)



- A. one-half
B. one-quarter
C. two-fourths

9)



- A. three-quarters
B. one-quarter
C. four-quarters

1. **B**2. **C**3. **C**4. **A**5. **C**6. **A**7. **C**8. **A**9. **A**