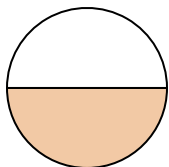



**Determine which letter best describes the shaded portion.****Answers**

1)



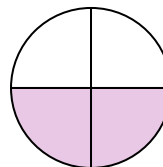
- A. three-fourths  
B. one-half  
C. two-fourths

2)



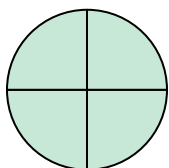
- A. one-quarter  
B. three-quarters  
C. two-halves

3)



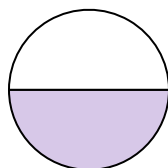
- A. one-fourth  
B. one-half  
C. two-quarters

4)




- A. two-halves  
B. four-fourths  
C. three-fourths

5)




- A. one-half  
B. two-quarters  
C. four-fourths

6)



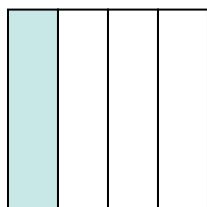
- A. two-halves  
B. one-fourth  
C. two-quarters

7)



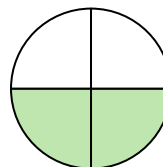
- A. one-half  
B. two-halves  
C. one-fourth

8)



- A. one-quarter  
B. three-quarters  
C. two-halves

9)



- A. two-fourths  
B. one-quarter  
C. one-half

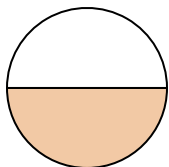
1. \_\_\_\_\_  
2. \_\_\_\_\_  
3. \_\_\_\_\_  
4. \_\_\_\_\_  
5. \_\_\_\_\_  
6. \_\_\_\_\_  
7. \_\_\_\_\_  
8. \_\_\_\_\_  
9. \_\_\_\_\_



Determine which letter best describes the shaded portion.


**Answers**

1)



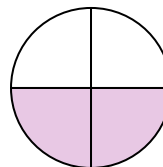
- A. three-fourths  
B. one-half  
C. two-fourths

2)



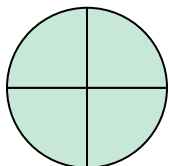
- A. one-quarter  
B. three-quarters  
C. two-halves

3)



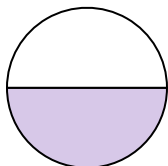
- A. one-fourth  
B. one-half  
C. two-quarters

4)




- A. two-halves  
B. four-fourths  
C. three-fourths

5)




- A. one-half  
B. two-quarters  
C. four-fourths

6)



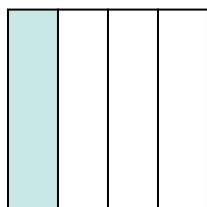
- A. two-halves  
B. one-fourth  
C. two-quarters

7)



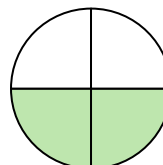
- A. one-half  
B. two-halves  
C. one-fourth

8)



- A. one-quarter  
B. three-quarters  
C. two-halves

9)



- A. two-fourths  
B. one-quarter  
C. one-half

1. **B**2. **A**3. **C**4. **B**5. **A**6. **A**7. **B**8. **A**9. **A**