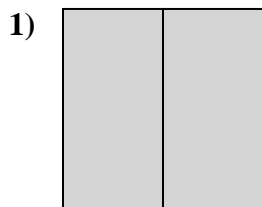
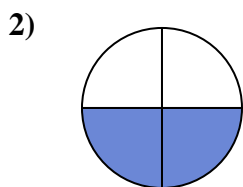
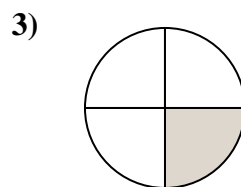


**Determine which letter best describes the shaded portion.****Answers**

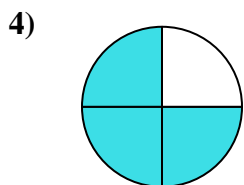
- A. two-quarters
B. two-halves
C. three-fourths



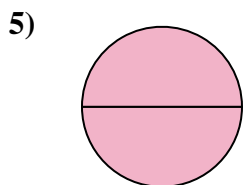
- A. four-fourths
B. three-fourths
C. two-fourths



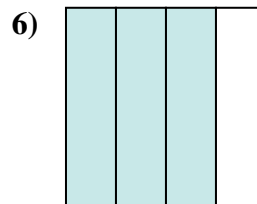
- A. two-quarters
B. one-fourth
C. two-halves



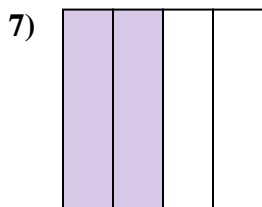
- A. two-fourths
B. three-fourths
C. two-halves



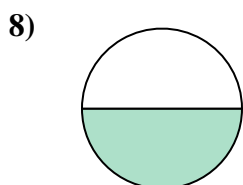
- A. one-fourth
B. three-fourths
C. two-halves



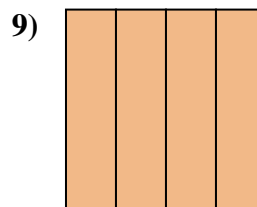
- A. one-fourth
B. three-fourths
C. two-halves



- A. one-quarter
B. three-fourths
C. two-quarters



- A. two-halves
B. one-half
C. two-fourths



- A. four-quarters
B. three-quarters
C. one-half

1. _____

2. _____

3. _____

4. _____

5. _____

6. _____

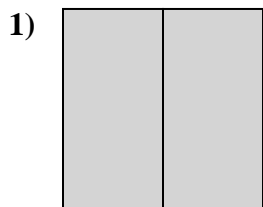
7. _____

8. _____

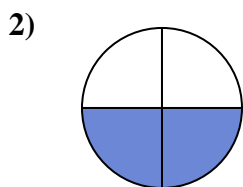
9. _____



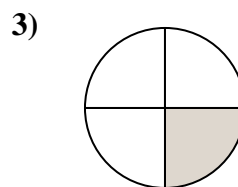
Determine which letter best describes the shaded portion.

Answers

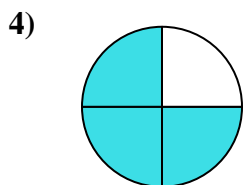
- A. two-quarters
B. two-halves
C. three-fourths



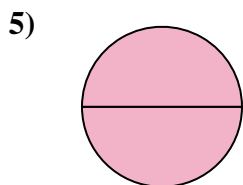
- A. four-fourths
B. three-fourths
C. two-fourths



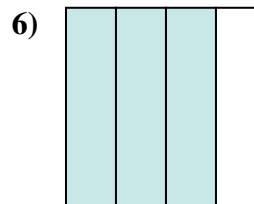
- A. two-quarters
B. one-fourth
C. two-halves



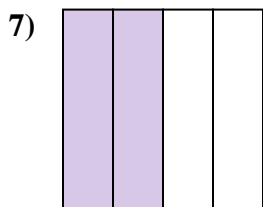
- A. two-fourths
B. three-fourths
C. two-halves



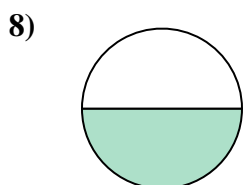
- A. one-fourth
B. three-fourths
C. two-halves



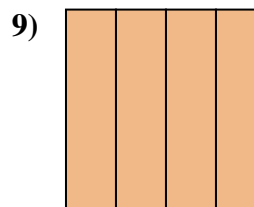
- A. one-fourth
B. three-fourths
C. two-halves



- A. one-quarter
B. three-fourths
C. two-quarters



- A. two-halves
B. one-half
C. two-fourths



- A. four-quarters
B. three-quarters
C. one-half

1. **B**2. **C**3. **B**4. **B**5. **C**6. **B**7. **C**8. **B**9. **A**