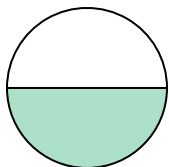



**Determine which letter best describes the shaded portion.****Answers**

1)



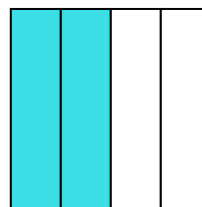
- A. one-half
B. two-halves
C. four-quarters

2)



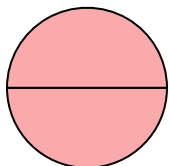
- A. two-halves
B. one-half
C. one-fourth

3)



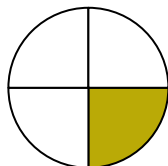
- A. three-quarters
B. one-quarter
C. two-quarters

4)



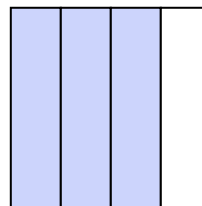
- A. two-halves
B. three-fourths
C. one-quarter

5)



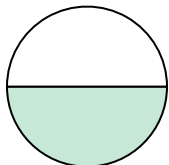
- A. four-fourths
B. one-fourth
C. two-quarters

6)



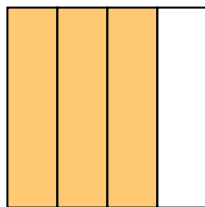
- A. three-fourths
B. four-fourths
C. one-half

7)



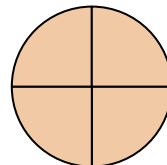
- A. two-quarters
B. two-halves
C. one-half

8)



- A. three-fourths
B. one-quarter
C. two-halves

9)



- A. two-halves
B. three-fourths
C. four-fourths

1. _____

2. _____

3. _____

4. _____

5. _____

6. _____

7. _____

8. _____

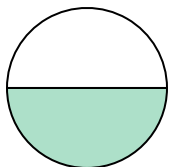
9. _____



Determine which letter best describes the shaded portion.


Answers

1)



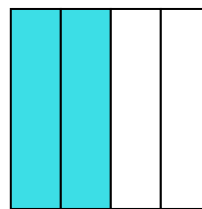
- A. one-half
B. two-halves
C. four-quarters

2)



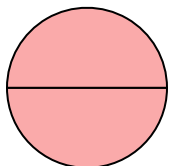
- A. two-halves
B. one-half
C. one-fourth

3)



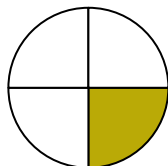
- A. three-quarters
B. one-quarter
C. two-quarters

4)



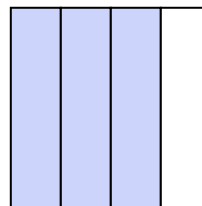
- A. two-halves
B. three-fourths
C. one-quarter

5)



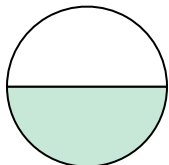
- A. four-fourths
B. one-fourth
C. two-quarters

6)



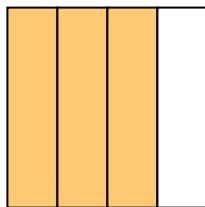
- A. three-fourths
B. four-fourths
C. one-half

7)



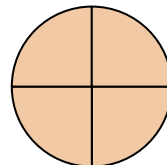
- A. two-quarters
B. two-halves
C. one-half

8)



- A. three-fourths
B. one-quarter
C. two-halves

9)



- A. two-halves
B. three-fourths
C. four-fourths

1. **A**2. **A**3. **C**4. **A**5. **B**6. **A**7. **C**8. **A**9. **C**