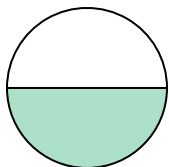


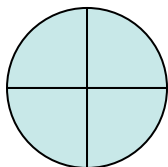
**Determine which letter best describes the shaded portion.****Answers**

1)



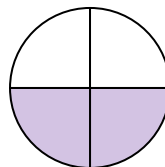
- A. two-fourths  
B. one-half  
C. one-fourth

2)



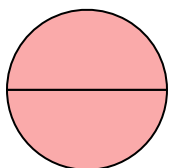
- A. two-halves  
B. four-fourths  
C. one-half

3)



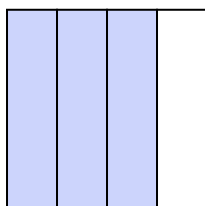
- A. two-fourths  
B. three-fourths  
C. one-quarter

4)




- A. four-quarters  
B. two-quarters  
C. two-halves

5)




- A. three-fourths  
B. two-fourths  
C. four-fourths

6)



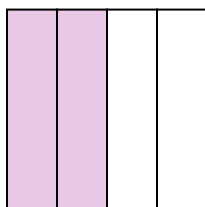
- A. one-fourth  
B. two-halves  
C. one-half

7)



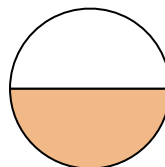
- A. two-fourths  
B. four-quarters  
C. three-quarters

8)



- A. one-half  
B. two-fourths  
C. three-quarters

9)



- A. two-halves  
B. two-fourths  
C. one-half

1. \_\_\_\_\_

2. \_\_\_\_\_

3. \_\_\_\_\_

4. \_\_\_\_\_

5. \_\_\_\_\_

6. \_\_\_\_\_

7. \_\_\_\_\_

8. \_\_\_\_\_

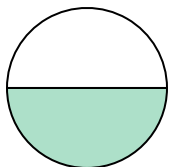
9. \_\_\_\_\_



Determine which letter best describes the shaded portion.

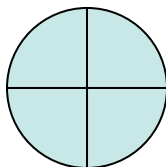
**Answers**

1)



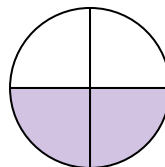
- A. two-fourths  
B. one-half  
C. one-fourth

2)



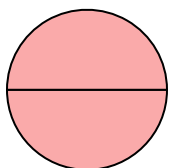
- A. two-halves  
B. four-fourths  
C. one-half

3)



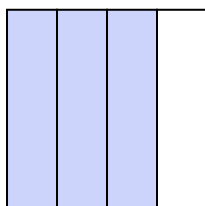
- A. two-fourths  
B. three-fourths  
C. one-quarter

4)




- A. four-quarters  
B. two-quarters  
C. two-halves

5)




- A. three-fourths  
B. two-fourths  
C. four-fourths

6)



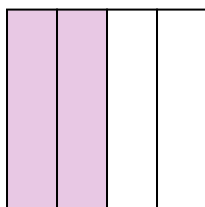
- A. one-fourth  
B. two-halves  
C. one-half

7)



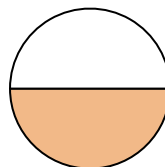
- A. two-fourths  
B. four-quarters  
C. three-quarters

8)



- A. one-half  
B. two-fourths  
C. three-quarters

9)



- A. two-halves  
B. two-fourths  
C. one-half

1. **B**2. **B**3. **A**4. **C**5. **A**6. **B**7. **B**8. **B**9. **C**