
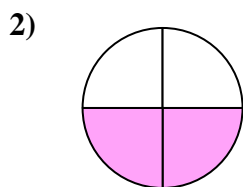
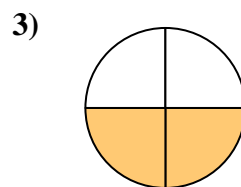


**Determine which letter best describes the shaded portion.****Answers**


- A. two-halves
B. one-fourth
C. one-half



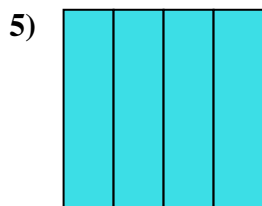
- A. two-fourths
B. two-halves
C. one-half



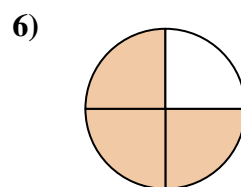
- A. two-quarters
B. two-halves
C. one-quarter



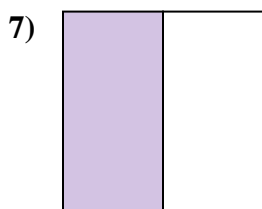
- A. three-quarters
B. one-half
C. four-fourths



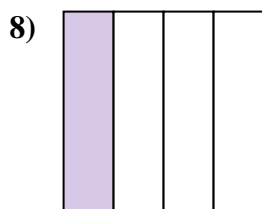
- A. two-quarters
B. four-quarters
C. two-halves



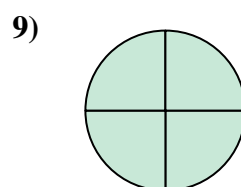
- A. three-quarters
B. four-quarters
C. one-quarter



- A. three-quarters
B. four-fourths
C. one-half




- A. two-fourths
B. three-quarters
C. one-fourth

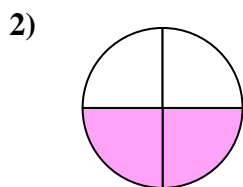


- A. three-fourths
B. two-halves
C. four-fourths

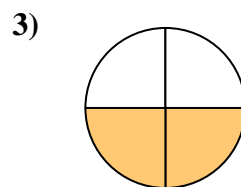
1. _____
2. _____
3. _____
4. _____
5. _____
6. _____
7. _____
8. _____
9. _____

**Determine which letter best describes the shaded portion.****Answers**


- A. two-halves
B. one-fourth
C. one-half



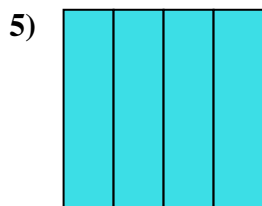
- A. two-fourths
B. two-halves
C. one-half



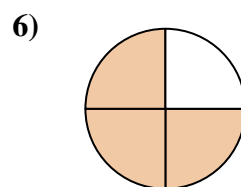
- A. two-quarters
B. two-halves
C. one-quarter



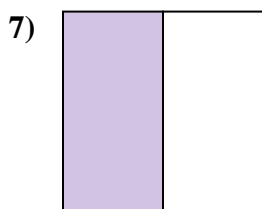
- A. three-quarters
B. one-half
C. four-fourths



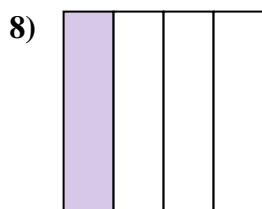
- A. two-quarters
B. four-quarters
C. two-halves



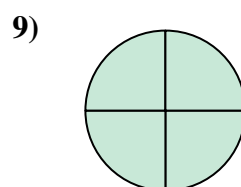
- A. three-quarters
B. four-quarters
C. one-quarter



- A. three-quarters
B. four-fourths
C. one-half



- A. two-fourths
B. three-quarters
C. one-fourth



- A. three-fourths
B. two-halves
C. four-fourths

1. **A**2. **A**3. **A**4. **B**5. **B**6. **A**7. **C**8. **C**9. **C**