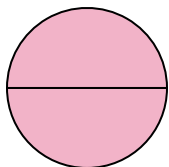



**Determine which letter best describes the shaded portion.****Answers**

1)



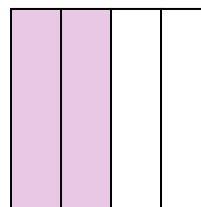
- A. two-halves
B. one-quarter
C. two-quarters

2)



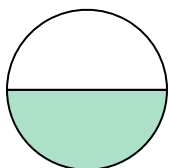
- A. one-half
B. three-fourths
C. two-halves

3)



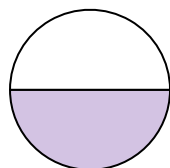
- A. two-fourths
B. one-fourth
C. three-fourths

4)



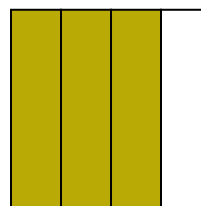
- A. two-fourths
B. four-fourths
C. one-half

5)



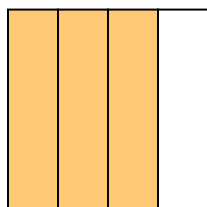
- A. four-fourths
B. one-half
C. two-quarters

6)



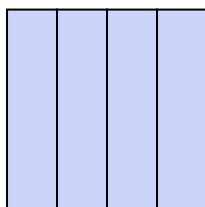
- A. one-fourth
B. two-fourths
C. three-fourths

7)



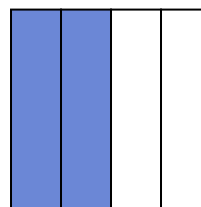
- A. two-fourths
B. four-quarters
C. three-quarters

8)



- A. two-quarters
B. one-half
C. four-quarters

9)



- A. two-halves
B. two-fourths
C. one-fourth

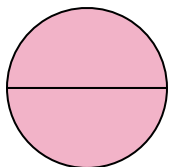
1. _____
2. _____
3. _____
4. _____
5. _____
6. _____
7. _____
8. _____
9. _____



Determine which letter best describes the shaded portion.


Answers

1)



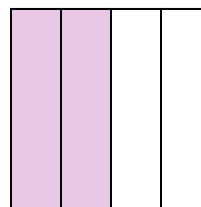
- A. two-halves
B. one-quarter
C. two-quarters

2)



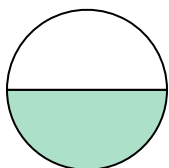
- A. one-half
B. three-fourths
C. two-halves

3)



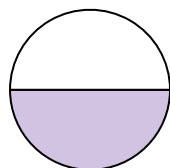
- A. two-fourths
B. one-fourth
C. three-fourths

4)



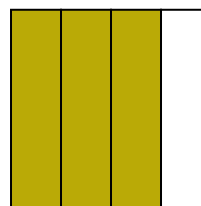
- A. two-fourths
B. four-fourths
C. one-half

5)



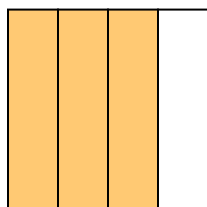
- A. four-fourths
B. one-half
C. two-quarters

6)



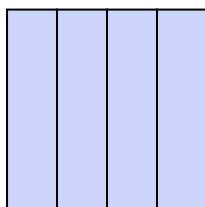
- A. one-fourth
B. two-fourths
C. three-fourths

7)



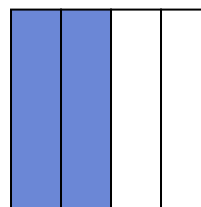
- A. two-fourths
B. four-quarters
C. three-quarters

8)



- A. two-quarters
B. one-half
C. four-quarters

9)

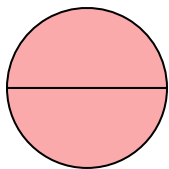


- A. two-halves
B. two-fourths
C. one-fourth

1. **A**2. **C**3. **A**4. **C**5. **B**6. **C**7. **C**8. **C**9. **B**

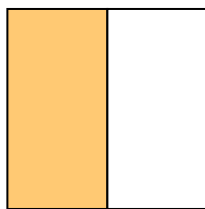
**Determine which letter best describes the shaded portion.****Answers**

1)



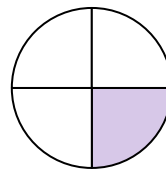
- A. one-half
B. two-quarters
C. two-halves

2)



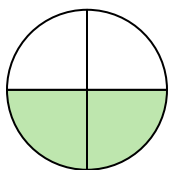
- A. two-quarters
B. four-fourths
C. one-half

3)




- A. two-quarters
B. one-quarter
C. one-half

4)



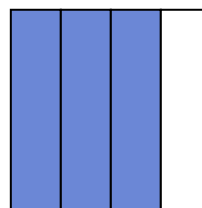
- A. four-fourths
B. two-fourths
C. one-half

5)



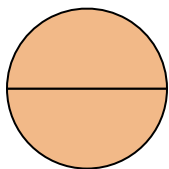
- A. one-half
B. three-quarters
C. one-fourth

6)



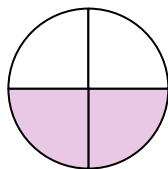
- A. one-half
B. three-fourths
C. four-quarters

7)



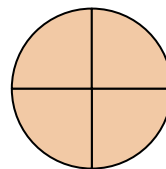
- A. two-quarters
B. two-halves
C. one-half

8)



- A. two-fourths
B. one-half
C. four-fourths

9)



- A. three-quarters
B. two-halves
C. four-fourths

1. _____

2. _____

3. _____

4. _____

5. _____

6. _____

7. _____

8. _____

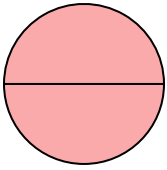
9. _____



Determine which letter best describes the shaded portion.


Answers

1)



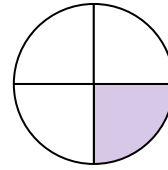
- A. one-half
B. two-quarters
C. two-halves

2)



- A. two-quarters
B. four-fourths
C. one-half

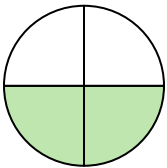
3)



- A. two-quarters
B. one-quarter
C. one-half


1. **C**2. **C**3. **B**4. **B**5. **A**6. **B**7. **B**8. **A**9. **C**

4)



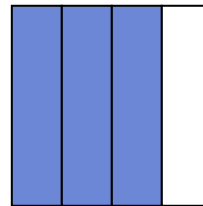
- A. four-fourths
B. two-fourths
C. one-half

5)



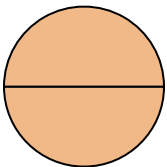
- A. one-half
B. three-quarters
C. one-fourth

6)



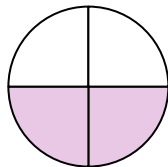
- A. one-half
B. three-fourths
C. four-quarters

7)



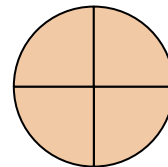
- A. two-quarters
B. two-halves
C. one-half

8)



- A. two-fourths
B. one-half
C. four-fourths

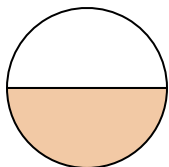
9)



- A. three-quarters
B. two-halves
C. four-fourths


**Determine which letter best describes the shaded portion.****Answers**

1)



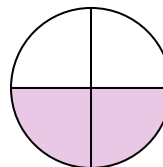
- A. three-fourths
B. one-half
C. two-fourths

2)



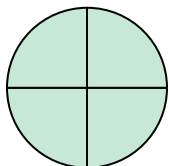
- A. one-quarter
B. three-quarters
C. two-halves

3)



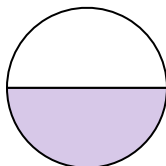
- A. one-fourth
B. one-half
C. two-quarters

4)




- A. two-halves
B. four-fourths
C. three-fourths

5)




- A. one-half
B. two-quarters
C. four-fourths

6)



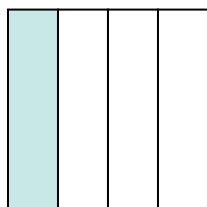
- A. two-halves
B. one-fourth
C. two-quarters

7)



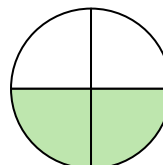
- A. one-half
B. two-halves
C. one-fourth

8)



- A. one-quarter
B. three-quarters
C. two-halves

9)



- A. two-fourths
B. one-quarter
C. one-half

1. _____

2. _____

3. _____

4. _____

5. _____

6. _____

7. _____

8. _____

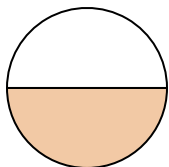
9. _____



Determine which letter best describes the shaded portion.


Answers

1)



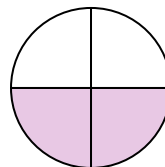
- A. three-fourths
B. one-half
C. two-fourths

2)



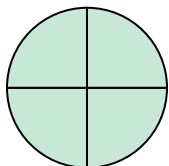
- A. one-quarter
B. three-quarters
C. two-halves

3)



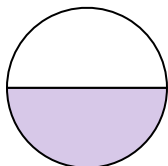
- A. one-fourth
B. one-half
C. two-quarters

4)




- A. two-halves
B. four-fourths
C. three-fourths

5)




- A. one-half
B. two-quarters
C. four-fourths

6)



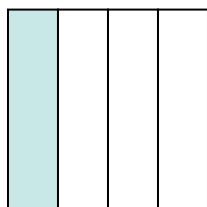
- A. two-halves
B. one-fourth
C. two-quarters

7)



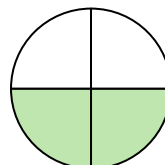
- A. one-half
B. two-halves
C. one-fourth

8)



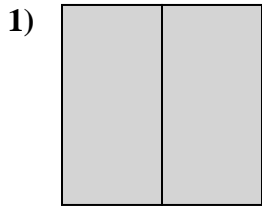
- A. one-quarter
B. three-quarters
C. two-halves

9)

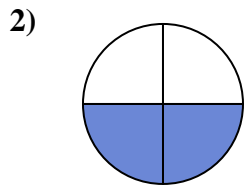


- A. two-fourths
B. one-quarter
C. one-half

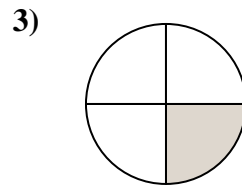
1. **B**2. **A**3. **C**4. **B**5. **A**6. **A**7. **B**8. **A**9. **A**

**Determine which letter best describes the shaded portion.****Answers**

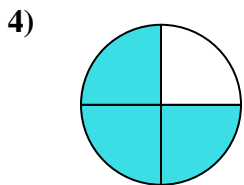
- A. two-quarters
B. two-halves
C. three-fourths



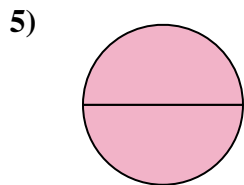
- A. four-fourths
B. three-fourths
C. two-fourths



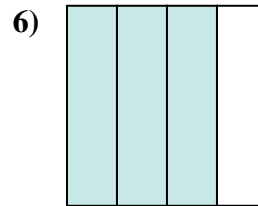
- A. two-quarters
B. one-fourth
C. two-halves



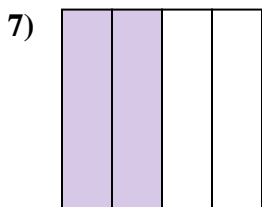
- A. two-fourths
B. three-fourths
C. two-halves



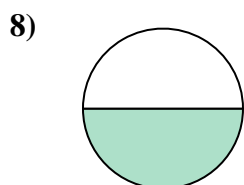
- A. one-fourth
B. three-fourths
C. two-halves



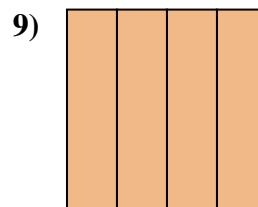
- A. one-fourth
B. three-fourths
C. two-halves



- A. one-quarter
B. three-fourths
C. two-quarters



- A. two-halves
B. one-half
C. two-fourths

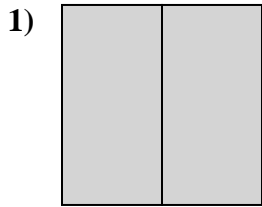


- A. four-quarters
B. three-quarters
C. one-half

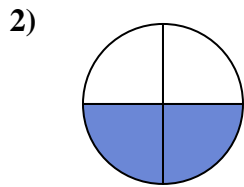
1. _____
2. _____
3. _____
4. _____
5. _____
6. _____
7. _____
8. _____
9. _____



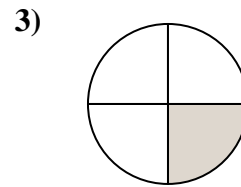
Determine which letter best describes the shaded portion.



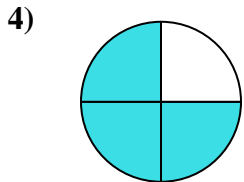
- A. two-quarters
B. two-halves
C. three-fourths



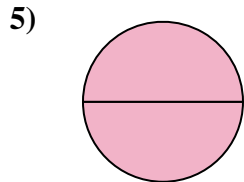
- A. four-fourths
B. three-fourths
C. two-fourths



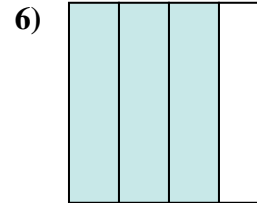
- A. two-quarters
B. one-fourth
C. two-halves



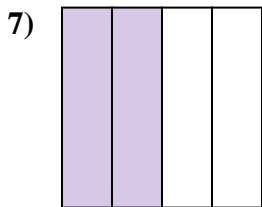
- A. two-fourths
B. three-fourths
C. two-halves



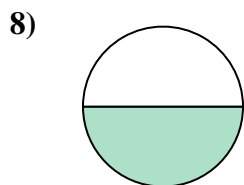
- A. one-fourth
B. three-fourths
C. two-halves



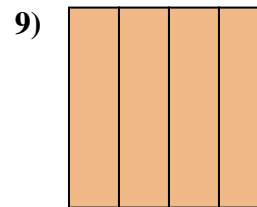
- A. one-fourth
B. three-fourths
C. two-halves



- A. one-quarter
B. three-fourths
C. two-quarters



- A. two-halves
B. one-half
C. two-fourths



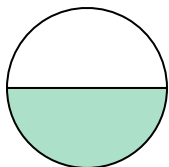
- A. four-quarters
B. three-quarters
C. one-half

Answers

1. **B**
2. **C**
3. **B**
4. **B**
5. **C**
6. **B**
7. **C**
8. **B**
9. **A**


**Determine which letter best describes the shaded portion.****Answers**

1)



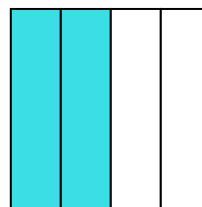
- A. one-half
B. two-halves
C. four-quarters

2)



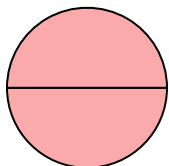
- A. two-halves
B. one-half
C. one-fourth

3)



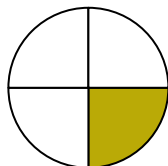
- A. three-quarters
B. one-quarter
C. two-quarters

4)



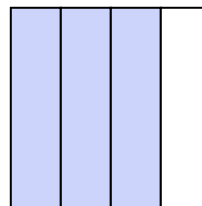
- A. two-halves
B. three-fourths
C. one-quarter

5)



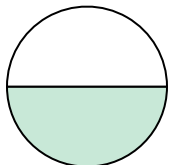
- A. four-fourths
B. one-fourth
C. two-quarters

6)



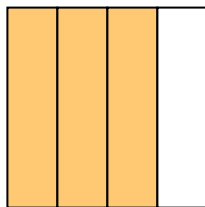
- A. three-fourths
B. four-fourths
C. one-half

7)



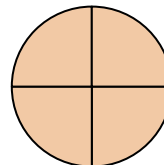
- A. two-quarters
B. two-halves
C. one-half

8)



- A. three-fourths
B. one-quarter
C. two-halves

9)



- A. two-halves
B. three-fourths
C. four-fourths

1. _____

2. _____

3. _____

4. _____

5. _____

6. _____

7. _____

8. _____

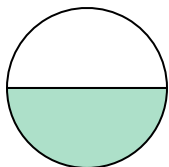
9. _____



Determine which letter best describes the shaded portion.


Answers

1)



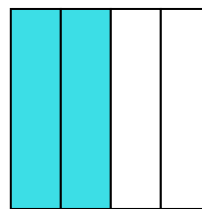
- A. one-half
B. two-halves
C. four-quarters

2)



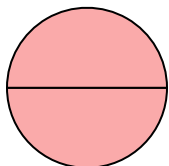
- A. two-halves
B. one-half
C. one-fourth

3)



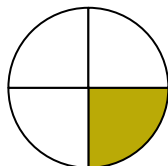
- A. three-quarters
B. one-quarter
C. two-quarters

4)



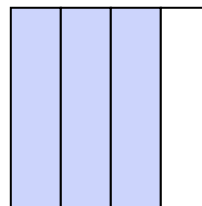
- A. two-halves
B. three-fourths
C. one-quarter

5)



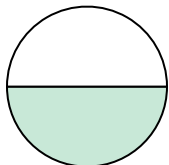
- A. four-fourths
B. one-fourth
C. two-quarters

6)



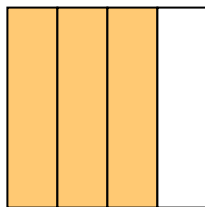
- A. three-fourths
B. four-fourths
C. one-half

7)



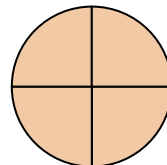
- A. two-quarters
B. two-halves
C. one-half

8)



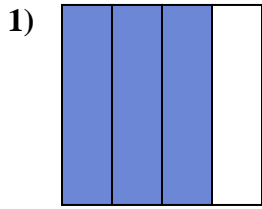
- A. three-fourths
B. one-quarter
C. two-halves

9)

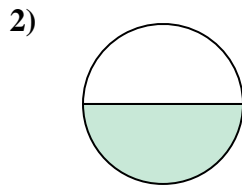


- A. two-halves
B. three-fourths
C. four-fourths

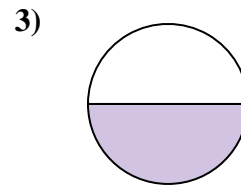
1. **A**2. **A**3. **C**4. **A**5. **B**6. **A**7. **C**8. **A**9. **C**

**Determine which letter best describes the shaded portion.****Answers**

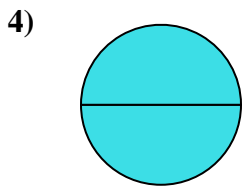
- A. four-fourths
B. three-quarters
C. one-quarter



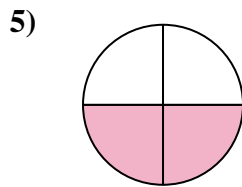
- A. one-half
B. two-fourths
C. one-fourth



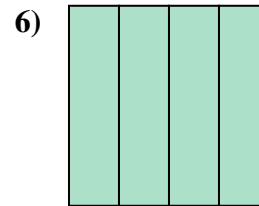
- A. four-fourths
B. one-half
C. two-halves



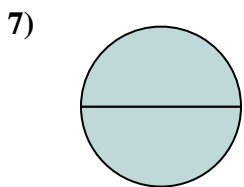
- A. one-quarter
B. four-quarters
C. two-halves



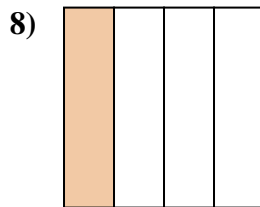
- A. two-quarters
B. one-half
C. four-quarters



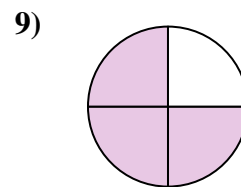
- A. four-quarters
B. one-quarter
C. one-half



- A. two-halves
B. one-half
C. three-quarters



- A. two-halves
B. one-fourth
C. two-quarters

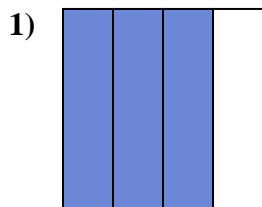


- A. four-fourths
B. three-quarters
C. two-halves

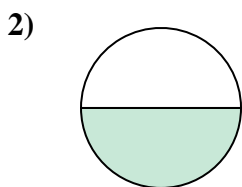
1. _____
2. _____
3. _____
4. _____
5. _____
6. _____
7. _____
8. _____
9. _____



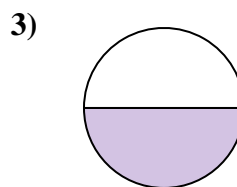
Determine which letter best describes the shaded portion.



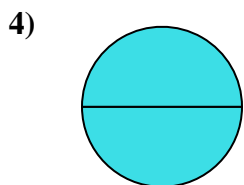
- A. four-fourths
B. three-quarters
C. one-quarter



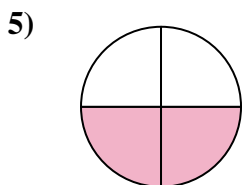
- A. one-half
B. two-fourths
C. one-fourth



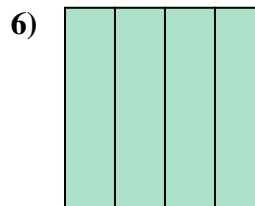
- A. four-fourths
B. one-half
C. two-halves



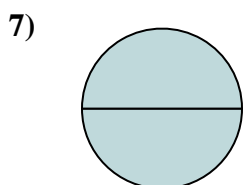
- A. one-quarter
B. four-quarters
C. two-halves



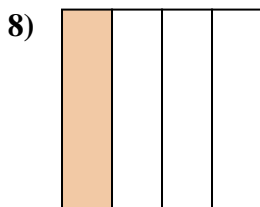
- A. two-quarters
B. one-half
C. four-quarters



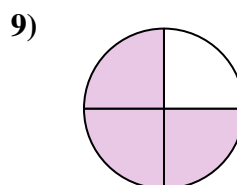
- A. four-quarters
B. one-quarter
C. one-half



- A. two-halves
B. one-half
C. three-quarters

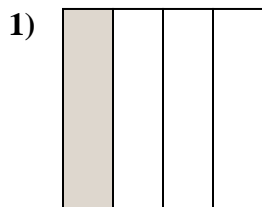


- A. two-halves
B. one-fourth
C. two-quarters

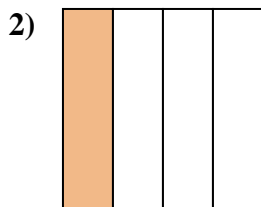


- A. four-fourths
B. three-quarters
C. two-halves

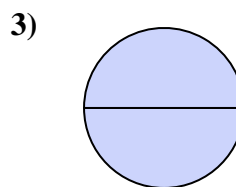
Answers1. **B**2. **A**3. **B**4. **C**5. **A**6. **A**7. **A**8. **B**9. **B**

**Determine which letter best describes the shaded portion.****Answers**

- A. one-fourth
B. three-fourths
C. one-half



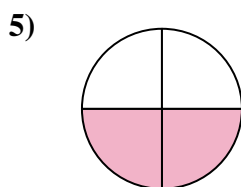
- A. one-half
B. one-fourth
C. two-halves



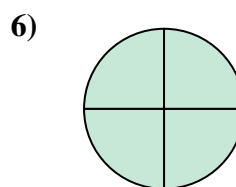
- A. one-half
B. one-fourth
C. two-halves



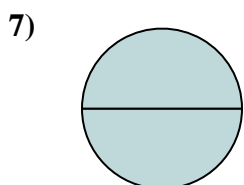
- A. two-halves
B. four-fourths
C. one-half



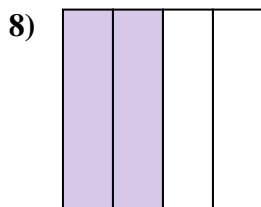
- A. two-quarters
B. three-fourths
C. two-halves



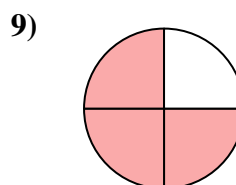
- A. two-quarters
B. four-fourths
C. one-half



- A. one-quarter
B. two-halves
C. three-fourths



- A. four-quarters
B. two-quarters
C. two-halves

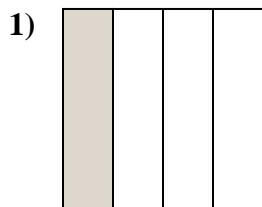


- A. two-halves
B. three-fourths
C. two-fourths

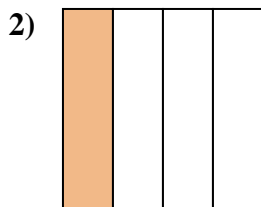
1. _____
2. _____
3. _____
4. _____
5. _____
6. _____
7. _____
8. _____
9. _____



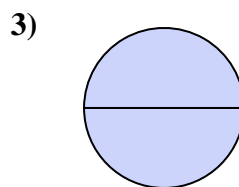
Determine which letter best describes the shaded portion.



- A. one-fourth
B. three-fourths
C. one-half



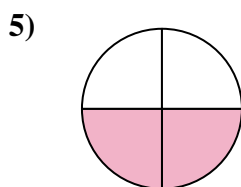
- A. one-half
B. one-fourth
C. two-halves



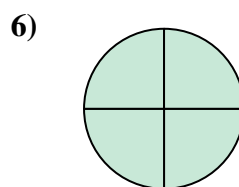
- A. one-half
B. one-fourth
C. two-halves



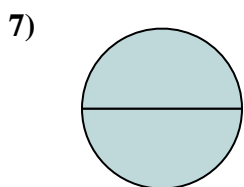
- A. two-halves
B. four-fourths
C. one-half



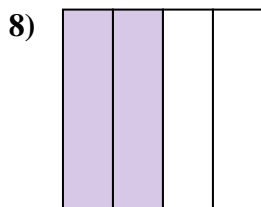
- A. two-quarters
B. three-fourths
C. two-halves



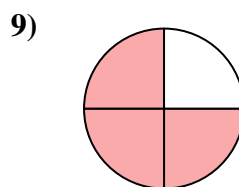
- A. two-quarters
B. four-fourths
C. one-half



- A. one-quarter
B. two-halves
C. three-fourths



- A. four-quarters
B. two-quarters
C. two-halves

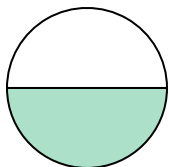


- A. two-halves
B. three-fourths
C. two-fourths

Answers1. **A**2. **B**3. **C**4. **C**5. **A**6. **B**7. **B**8. **B**9. **B**

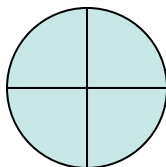
**Determine which letter best describes the shaded portion.****Answers**

1)



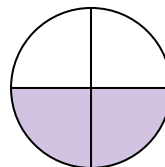
- A. two-fourths
B. one-half
C. one-fourth

2)



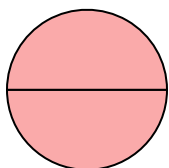
- A. two-halves
B. four-fourths
C. one-half

3)



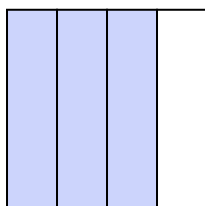
- A. two-fourths
B. three-fourths
C. one-quarter

4)




- A. four-quarters
B. two-quarters
C. two-halves

5)




- A. three-fourths
B. two-fourths
C. four-fourths

6)



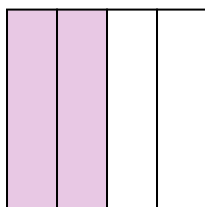
- A. one-fourth
B. two-halves
C. one-half

7)



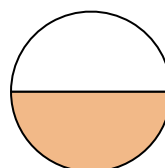
- A. two-fourths
B. four-quarters
C. three-quarters

8)



- A. one-half
B. two-fourths
C. three-quarters

9)



- A. two-halves
B. two-fourths
C. one-half

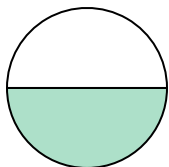
1. _____
2. _____
3. _____
4. _____
5. _____
6. _____
7. _____
8. _____
9. _____



Determine which letter best describes the shaded portion.

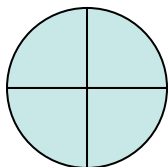
Answers

1)



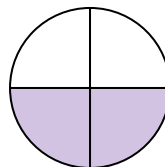
- A. two-fourths
B. one-half
C. one-fourth

2)



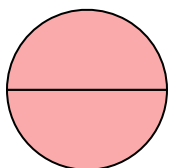
- A. two-halves
B. four-fourths
C. one-half

3)



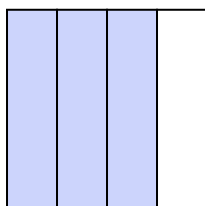
- A. two-fourths
B. three-fourths
C. one-quarter

4)




- A. four-quarters
B. two-quarters
C. two-halves

5)




- A. three-fourths
B. two-fourths
C. four-fourths

6)



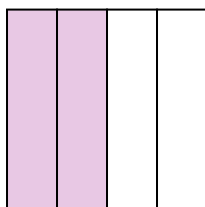
- A. one-fourth
B. two-halves
C. one-half

7)



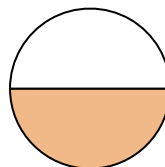
- A. two-fourths
B. four-quarters
C. three-quarters

8)




- A. one-half
B. two-fourths
C. three-quarters

9)

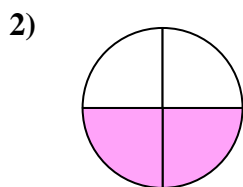


- A. two-halves
B. two-fourths
C. one-half

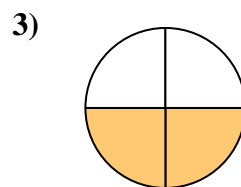
1. **B**2. **B**3. **A**4. **C**5. **A**6. **B**7. **B**8. **B**9. **C**

**Determine which letter best describes the shaded portion.****Answers**


- A. two-halves
B. one-fourth
C. one-half



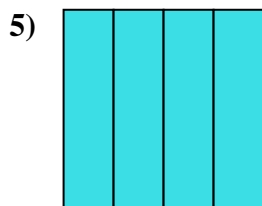
- A. two-fourths
B. two-halves
C. one-half



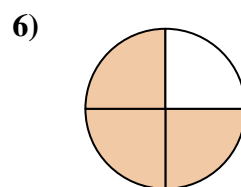
- A. two-quarters
B. two-halves
C. one-quarter



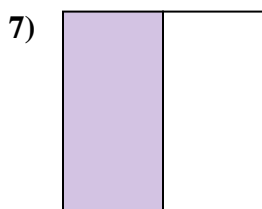
- A. three-quarters
B. one-half
C. four-fourths



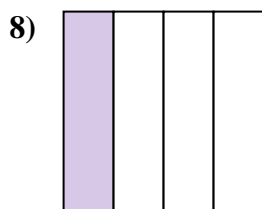
- A. two-quarters
B. four-quarters
C. two-halves



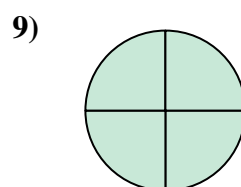
- A. three-quarters
B. four-quarters
C. one-quarter



- A. three-quarters
B. four-fourths
C. one-half



- A. two-fourths
B. three-quarters
C. one-fourth



- A. three-fourths
B. two-halves
C. four-fourths

1. _____

2. _____

3. _____

4. _____


5. _____

6. _____

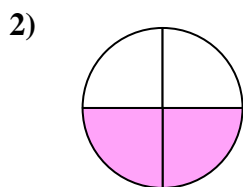
7. _____

8. _____

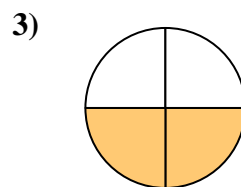
9. _____

**Determine which letter best describes the shaded portion.**


- A. two-halves
B. one-fourth
C. one-half



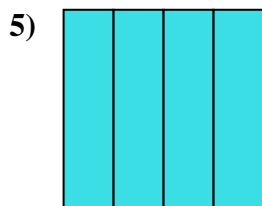
- A. two-fourths
B. two-halves
C. one-half



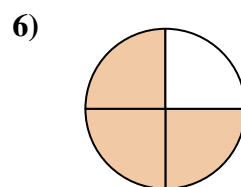
- A. two-quarters
B. two-halves
C. one-quarter



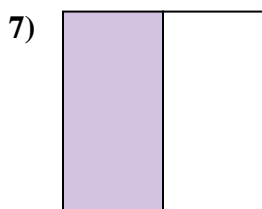
- A. three-quarters
B. one-half
C. four-fourths



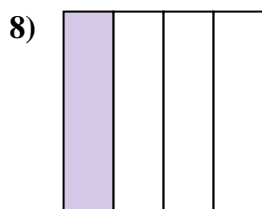
- A. two-quarters
B. four-quarters
C. two-halves



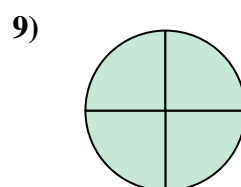
- A. three-quarters
B. four-quarters
C. one-quarter



- A. three-quarters
B. four-fourths
C. one-half



- A. two-fourths
B. three-quarters
C. one-fourth

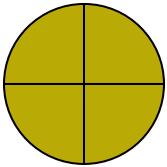


- A. three-fourths
B. two-halves
C. four-fourths

Answers1. **A**2. **A**3. **A**4. **B**5. **B**6. **A**7. **C**8. **C**9. **C**


**Determine which letter best describes the shaded portion.****Answers**

1)



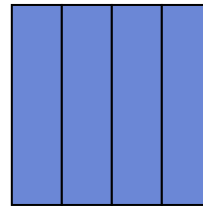
- A. two-halves
B. four-fourths
C. one-half

2)



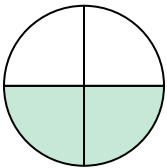
- A. one-quarter
B. two-fourths
C. two-halves

3)



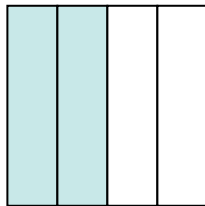
- A. two-halves
B. two-quarters
C. four-fourths

4)




- A. two-fourths
B. one-fourth
C. one-half

5)




- A. four-quarters
B. three-quarters
C. two-fourths

6)



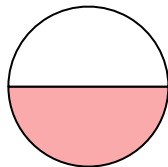
- A. one-half
B. two-halves
C. four-fourths

7)



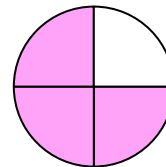
- A. one-half
B. one-quarter
C. two-halves

8)



- A. one-half
B. one-quarter
C. two-fourths

9)



- A. three-quarters
B. one-quarter
C. four-quarters

1. _____

2. _____

3. _____

4. _____

5. _____

6. _____

7. _____

8. _____

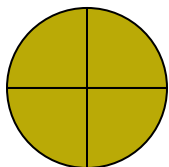
9. _____



Determine which letter best describes the shaded portion.

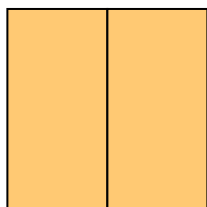
Answers

1)




- A. two-halves
B. four-fourths
C. one-half

2)



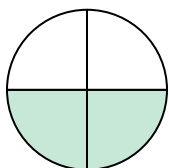
- A. one-quarter
B. two-fourths
C. two-halves

3)



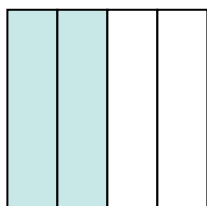
- A. two-halves
B. two-quarters
C. four-fourths

4)




- A. two-fourths
B. one-fourth
C. one-half

5)




- A. four-quarters
B. three-quarters
C. two-fourths

6)



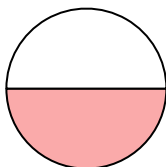
- A. one-half
B. two-halves
C. four-fourths

7)



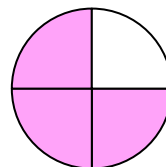
- A. one-half
B. one-quarter
C. two-halves

8)



- A. one-half
B. one-quarter
C. two-fourths

9)



- A. three-quarters
B. one-quarter
C. four-quarters

1. **B**2. **C**3. **C**4. **A**5. **C**6. **A**7. **C**8. **A**9. **A**