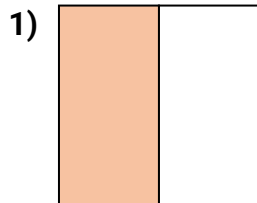
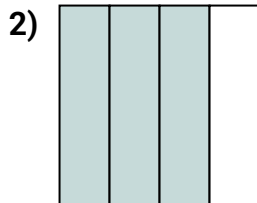




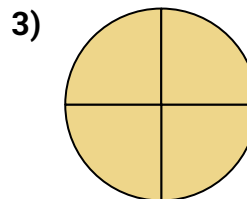
Determine which letter best describes the shaded portion.

Answers

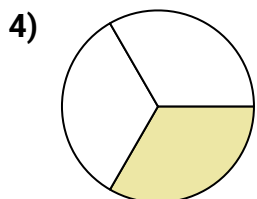
- A. one-fourth
B. two-halves
C. one-half



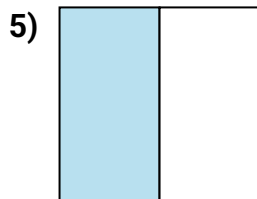
- A. three-fourths
B. two-quarters
C. two-halves



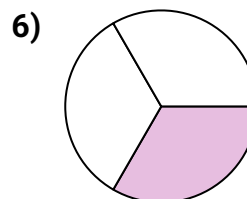
- A. four-fourths
B. one-fourth
C. one-half




- A. one-half
B. two-halves
C. one-third



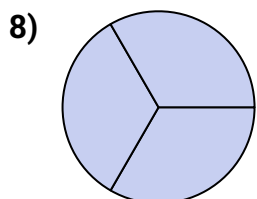
- A. three-quarters
B. one-quarter
C. one-half



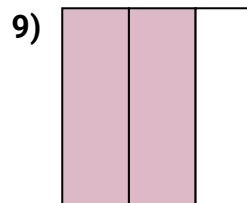
- A. three-quarters
B. one-half
C. one-third



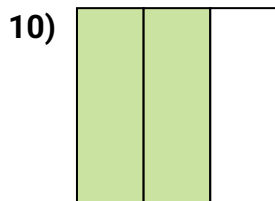
- A. two-quarters
B. two-halves
C. one-fourth



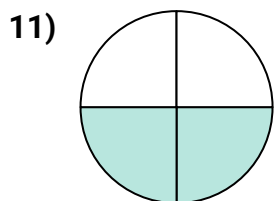
- A. two-halves
B. one-half
C. three-thirds



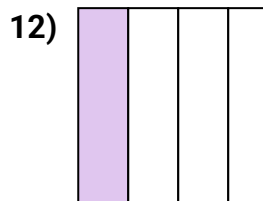
- A. two-thirds
B. two-halves
C. three-quarters



- A. two-halves
B. two-thirds
C. one-half



- A. two-fourths
B. three-fourths
C. one-quarter



- A. one-fourth
B. one-half
C. four-quarters

1. _____

2. _____

3. _____

4. _____

5. _____

6. _____

7. _____

8. _____

9. _____

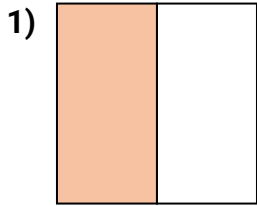
10. _____

11. _____

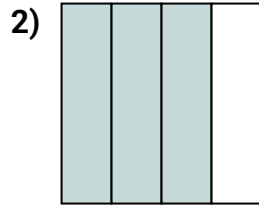
12. _____



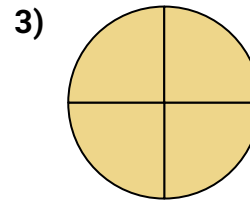
Determine which letter best describes the shaded portion.

Answers

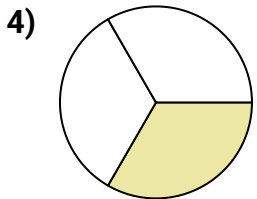
- A. one-fourth
B. two-halves
C. one-half



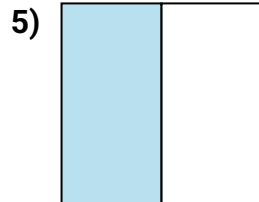
- A. three-fourths
B. two-quarters
C. two-halves



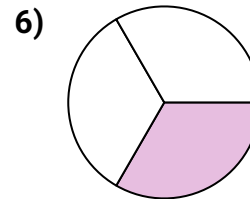
- A. four-fourths
B. one-fourth
C. one-half




- A. one-half
B. two-halves
C. one-third



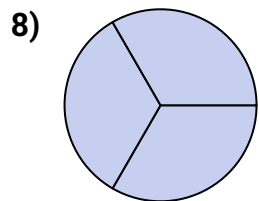
- A. three-quarters
B. one-quarter
C. one-half



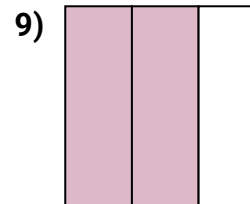
- A. three-quarters
B. one-half
C. one-third



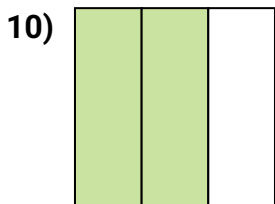
- A. two-quarters
B. two-halves
C. one-fourth



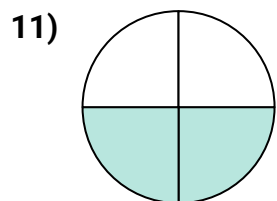
- A. two-halves
B. one-half
C. three-thirds



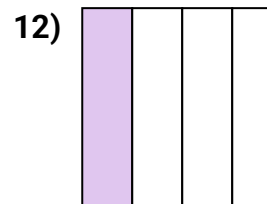
- A. two-thirds
B. two-halves
C. three-quarters



- A. two-halves
B. two-thirds
C. one-half



- A. two-fourths
B. three-fourths
C. one-quarter



- A. one-fourth
B. one-half
C. four-quarters

1. **C**2. **A**3. **A**4. **C**5. **C**6. **C**7. **B**8. **C**9. **A**10. **B**11. **A**12. **A**