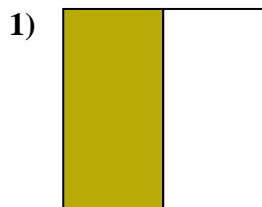
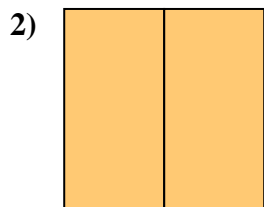
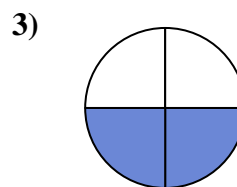


**Determine which letter best describes the shaded portion.****Answers**

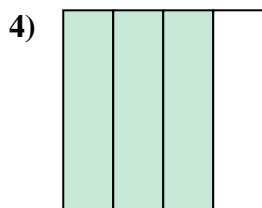
- A. two-fourths
B. one-half
C. two-halves



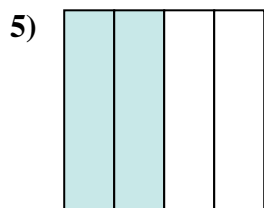
- A. two-halves
B. four-fourths
C. three-quarters



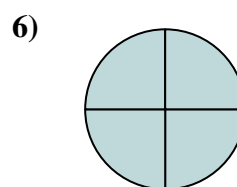
- A. one-quarter
B. three-fourths
C. two-quarters



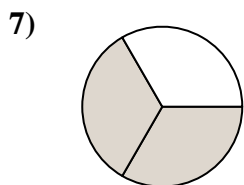
- A. one-fourth
B. three-quarters
C. two-fourths



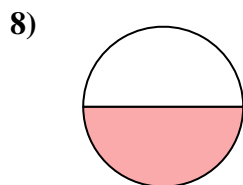
- A. two-quarters
B. three-fourths
C. two-halves



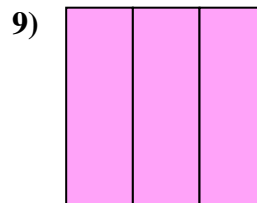
- A. four-quarters
B. two-halves
C. two-fourths



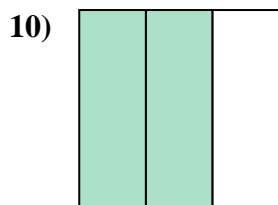
- A. one-quarter
B. two-halves
C. two-thirds



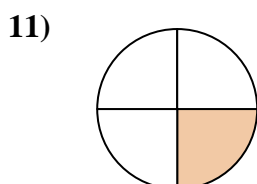
- A. four-fourths
B. two-halves
C. one-half



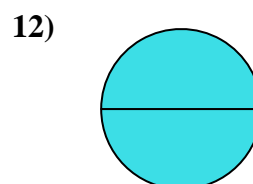
- A. one-half
B. three-thirds
C. four-quarters



- A. two-halves
B. two-thirds
C. three-fourths



- A. four-quarters
B. three-fourths
C. one-quarter



- A. two-halves
B. one-quarter
C. one-half

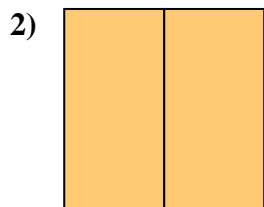
1. _____
2. _____
3. _____
4. _____
5. _____
6. _____
7. _____
8. _____
9. _____
10. _____
11. _____
12. _____



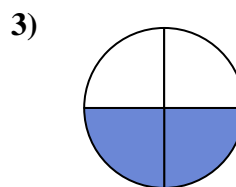
Determine which letter best describes the shaded portion.



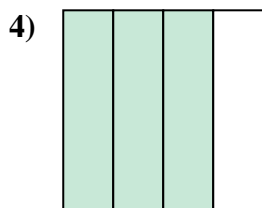
- A. two-fourths
B. one-half
C. two-halves



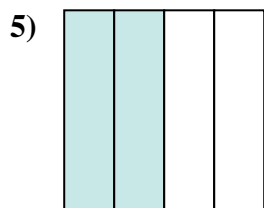
- A. two-halves
B. four-fourths
C. three-quarters



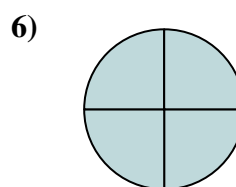
- A. one-quarter
B. three-fourths
C. two-quarters



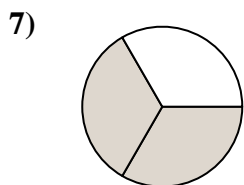
- A. one-fourth
B. three-quarters
C. two-fourths



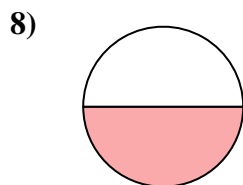
- A. two-quarters
B. three-fourths
C. two-halves



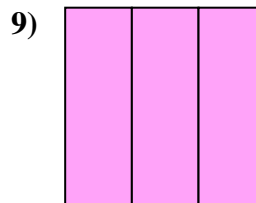
- A. four-quarters
B. two-halves
C. two-fourths



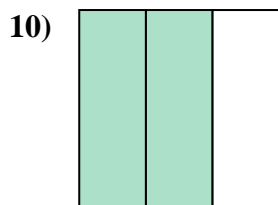
- A. one-quarter
B. two-halves
C. two-thirds



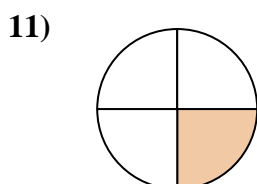
- A. four-fourths
B. two-halves
C. one-half



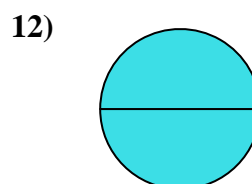
- A. one-half
B. three-thirds
C. four-quarters



- A. two-halves
B. two-thirds
C. three-fourths



- A. four-quarters
B. three-fourths
C. one-quarter



- A. two-halves
B. one-quarter
C. one-half

Answers

1. **B**
2. **A**
3. **C**
4. **B**
5. **A**
6. **A**
7. **C**
8. **C**
9. **B**
10. **B**
11. **C**
12. **A**