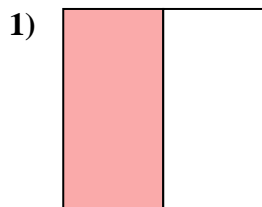
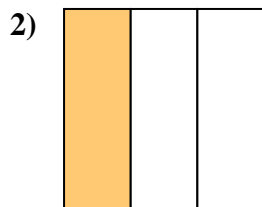
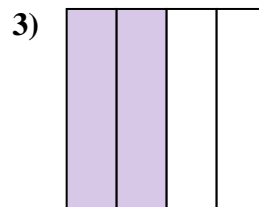


**Determine which letter best describes the shaded portion.****Answers**

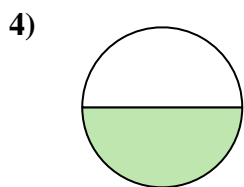
- A. one-half
B. one-quarter
C. two-quarters



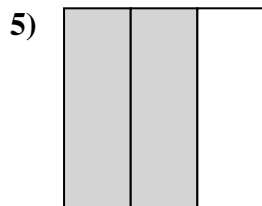
- A. one-fourth
B. one-third
C. two-halves



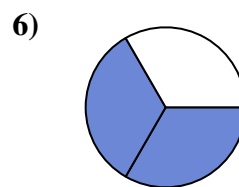
- A. two-halves
B. two-quarters
C. four-fourths



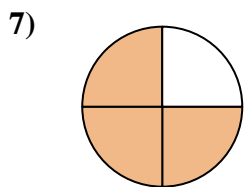
- A. one-half
B. four-quarters
C. three-fourths



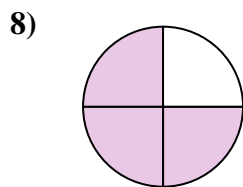
- A. two-thirds
B. two-quarters
C. four-quarters



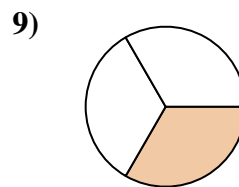
- A. two-thirds
B. two-halves
C. one-quarter



- A. four-fourths
B. one-quarter
C. three-fourths



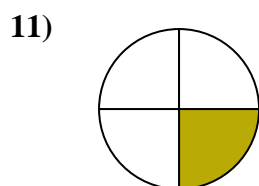
- A. three-quarters
B. two-halves
C. four-quarters



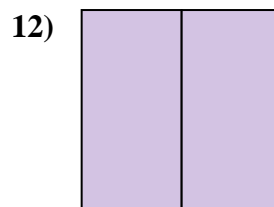
- A. one-third
B. two-fourths
C. four-fourths



- A. one-quarter
B. three-thirds
C. two-quarters



- A. one-fourth
B. four-fourths
C. two-halves

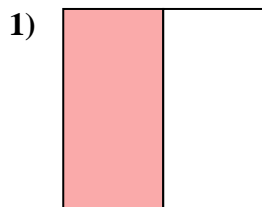


- A. three-quarters
B. two-fourths
C. two-halves

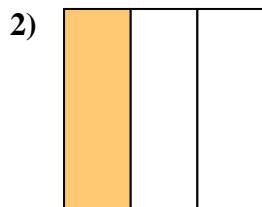
1. _____
2. _____
3. _____
4. _____
5. _____
6. _____
7. _____
8. _____
9. _____
10. _____
11. _____
12. _____



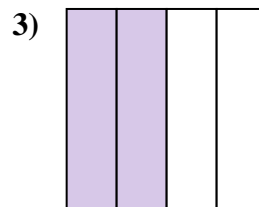
Determine which letter best describes the shaded portion.

Answers

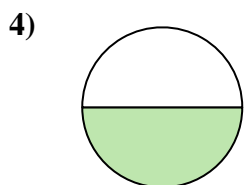
- A. one-half
B. one-quarter
C. two-quarters



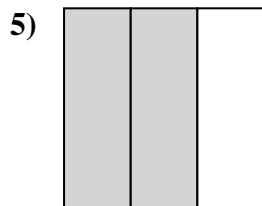
- A. one-fourth
B. one-third
C. two-halves



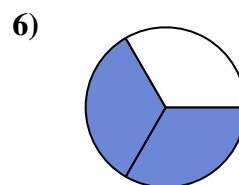
- A. two-halves
B. two-quarters
C. four-fourths



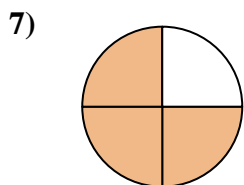
- A. one-half
B. four-quarters
C. three-fourths



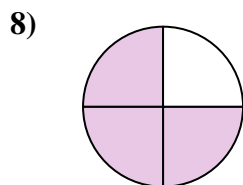
- A. two-thirds
B. two-quarters
C. four-quarters



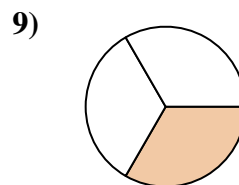
- A. two-thirds
B. two-halves
C. one-quarter



- A. four-fourths
B. one-quarter
C. three-fourths



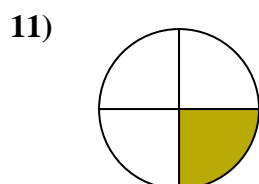
- A. three-quarters
B. two-halves
C. four-quarters



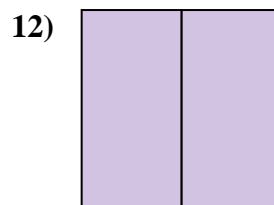
- A. one-third
B. two-fourths
C. four-fourths



- A. one-quarter
B. three-thirds
C. two-quarters



- A. one-fourth
B. four-fourths
C. two-halves



- A. three-quarters
B. two-fourths
C. two-halves

1. **A**
2. **B**
3. **B**
4. **A**
5. **A**
6. **A**
7. **C**
8. **A**
9. **A**
10. **B**
11. **A**
12. **C**