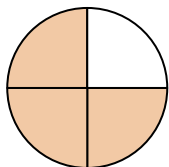


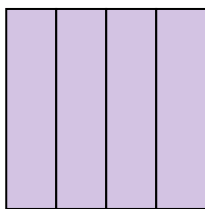
**Determine which letter best describes the shaded portion.****Answers**

1)



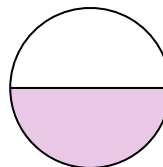
- A. four-fourths  
B. two-halves  
C. three-fourths

2)



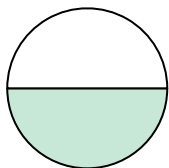
- A. one-half  
B. four-fourths  
C. one-quarter

3)



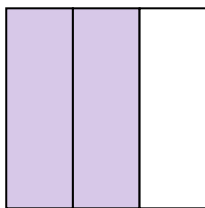
- A. one-half  
B. two-halves  
C. three-quarters

4)



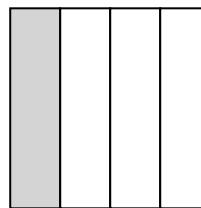
- A. one-half  
B. two-fourths  
C. two-halves

5)



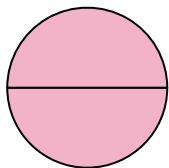
- A. two-quarters  
B. one-fourth  
C. two-thirds

6)



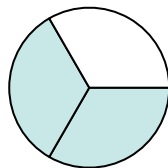
- A. four-quarters  
B. two-halves  
C. one-quarter

7)



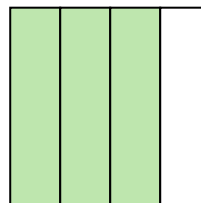
- A. one-fourth  
B. two-halves  
C. one-half

8)



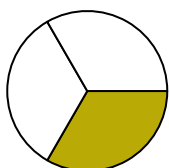
- A. one-half  
B. two-halves  
C. two-thirds

9)



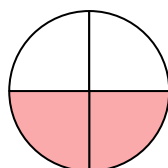
- A. four-fourths  
B. two-halves  
C. three-fourths

10)



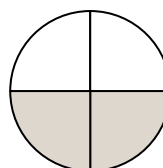
- A. one-fourth  
B. one-half  
C. one-third

11)



- A. four-fourths  
B. one-quarter  
C. two-quarters

12)



- A. two-fourths  
B. two-halves  
C. one-fourth

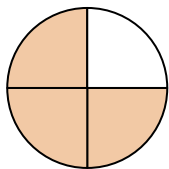
1. \_\_\_\_\_  
2. \_\_\_\_\_  
3. \_\_\_\_\_  
4. \_\_\_\_\_  
5. \_\_\_\_\_  
6. \_\_\_\_\_  
7. \_\_\_\_\_  
8. \_\_\_\_\_  
9. \_\_\_\_\_  
10. \_\_\_\_\_  
11. \_\_\_\_\_  
12. \_\_\_\_\_



Determine which letter best describes the shaded portion.

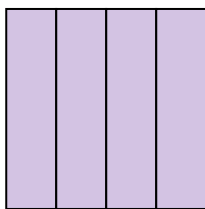
**Answers**

1)



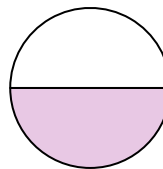
- A. four-fourths  
B. two-halves  
C. three-fourths

2)



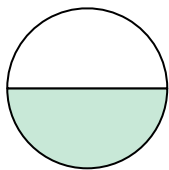
- A. one-half  
B. four-fourths  
C. one-quarter

3)



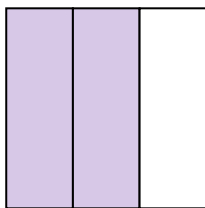
- A. one-half  
B. two-halves  
C. three-quarters

4)



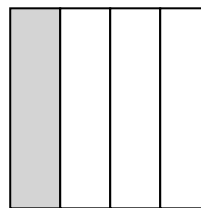
- A. one-half  
B. two-fourths  
C. two-halves

5)



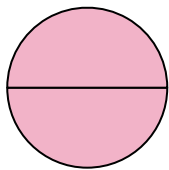
- A. two-quarters  
B. one-fourth  
C. two-thirds

6)



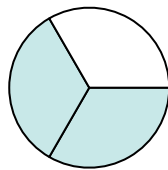
- A. four-quarters  
B. two-halves  
C. one-quarter

7)



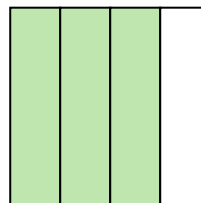
- A. one-fourth  
B. two-halves  
C. one-half

8)



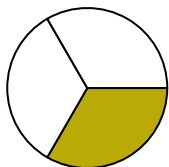
- A. one-half  
B. two-halves  
C. two-thirds

9)



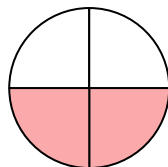
- A. four-fourths  
B. two-halves  
C. three-fourths

10)



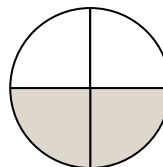
- A. one-fourth  
B. one-half  
C. one-third

11)



- A. four-fourths  
B. one-quarter  
C. two-quarters

12)



- A. two-fourths  
B. two-halves  
C. one-fourth

1. **C**  
2. **B**  
3. **A**  
4. **A**  
5. **C**  
6. **C**  
7. **B**  
8. **C**  
9. **C**  
10. **C**  
11. **C**  
12. **A**