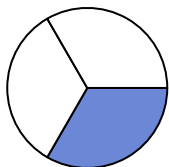


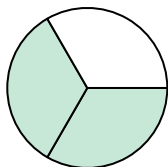
**Determine which letter best describes the shaded portion.****Answers**

1)



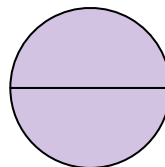
- A. four-quarters
B. one-quarter
C. one-third

2)



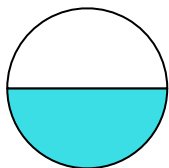
- A. two-thirds
B. one-half
C. one-quarter

3)



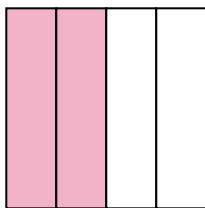
- A. one-fourth
B. two-quarters
C. two-halves

4)



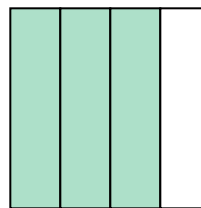
- A. one-half
B. four-quarters
C. three-fourths

5)




- A. four-quarters
B. two-halves
C. two-fourths

6)



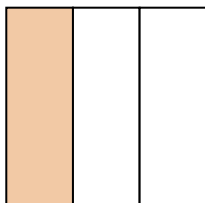
- A. one-fourth
B. four-quarters
C. three-quarters

7)



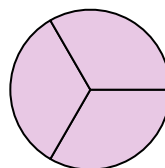
- A. two-fourths
B. two-halves
C. one-half

8)



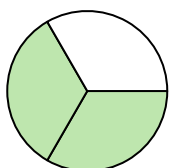
- A. two-fourths
B. one-third
C. three-fourths

9)



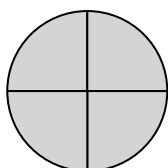
- A. three-thirds
B. one-half
C. three-quarters

10)



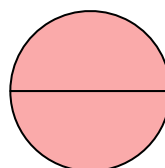
- A. four-fourths
B. two-thirds
C. three-fourths

11)



- A. one-fourth
B. four-quarters
C. one-half

12)

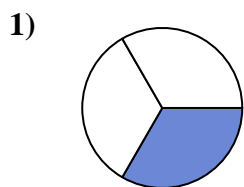


- A. two-halves
B. two-fourths
C. four-fourths

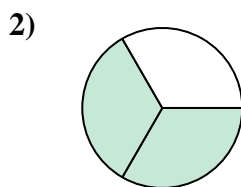
1. _____
2. _____
3. _____
4. _____
5. _____
6. _____
7. _____
8. _____
9. _____
10. _____
11. _____
12. _____



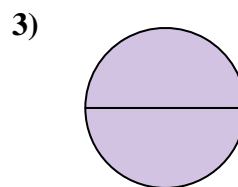
Determine which letter best describes the shaded portion.

Answers

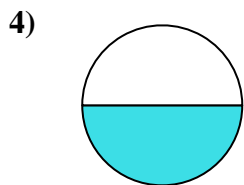
- A. four-quarters
B. one-quarter
C. one-third



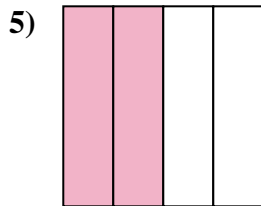
- A. two-thirds
B. one-half
C. one-quarter



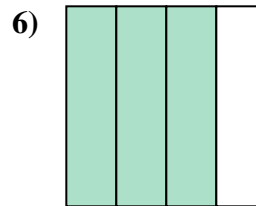
- A. one-fourth
B. two-quarters
C. two-halves



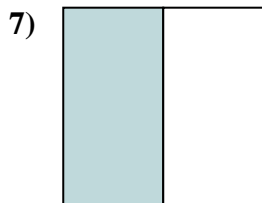
- A. one-half
B. four-quarters
C. three-fourths



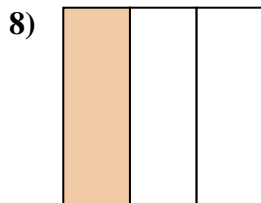
- A. four-quarters
B. two-halves
C. two-fourths



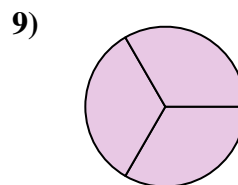
- A. one-fourth
B. four-quarters
C. three-quarters



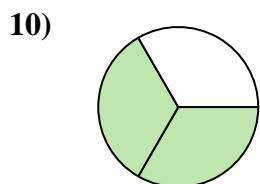
- A. two-fourths
B. two-halves
C. one-half



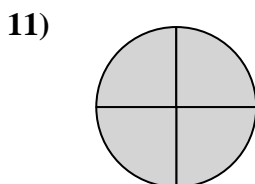
- A. two-fourths
B. one-third
C. three-fourths



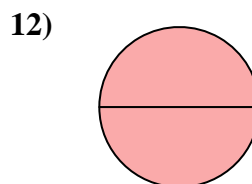
- A. three-thirds
B. one-half
C. three-quarters



- A. four-fourths
B. two-thirds
C. three-fourths



- A. one-fourth
B. four-quarters
C. one-half



- A. two-halves
B. two-fourths
C. four-fourths

1. **C**
2. **A**
3. **C**
4. **A**
5. **C**
6. **C**
7. **C**
8. **B**
9. **A**
10. **B**
11. **B**
12. **A**