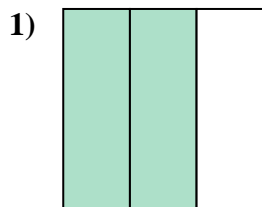
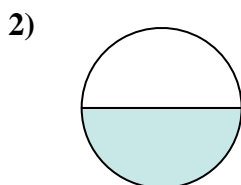
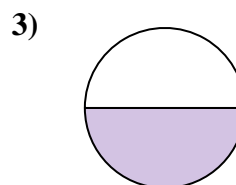


**Determine which letter best describes the shaded portion.****Answers**

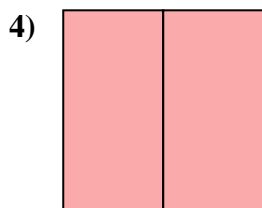
- A. two-halves  
B. two-thirds  
C. one-quarter



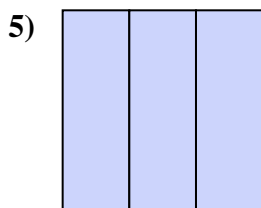
- A. one-fourth  
B. two-quarters  
C. one-half



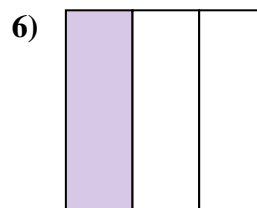
- A. two-fourths  
B. one-half  
C. two-halves



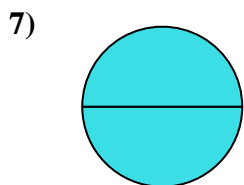
- A. two-halves  
B. two-quarters  
C. one-half



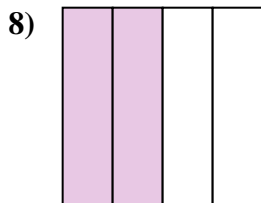
- A. three-fourths  
B. three-thirds  
C. one-fourth



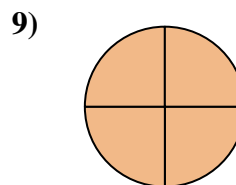
- A. two-halves  
B. one-third  
C. one-quarter



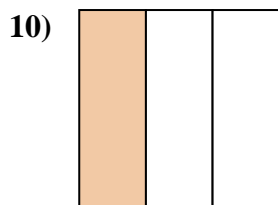
- A. four-fourths  
B. one-half  
C. two-halves



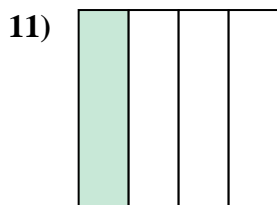
- A. three-quarters  
B. two-quarters  
C. two-halves



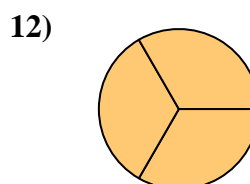
- A. one-half  
B. four-fourths  
C. two-fourths



- A. one-third  
B. one-half  
C. two-halves



- A. three-quarters  
B. two-halves  
C. one-quarter

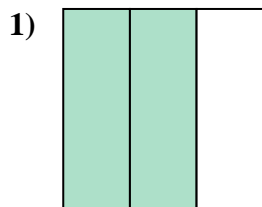


- A. three-thirds  
B. two-halves  
C. one-half

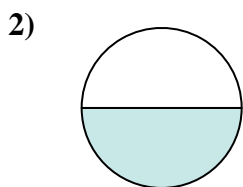
1. \_\_\_\_\_  
2. \_\_\_\_\_  
3. \_\_\_\_\_  
4. \_\_\_\_\_  
5. \_\_\_\_\_  
6. \_\_\_\_\_  
7. \_\_\_\_\_  
8. \_\_\_\_\_  
9. \_\_\_\_\_  
10. \_\_\_\_\_  
11. \_\_\_\_\_  
12. \_\_\_\_\_



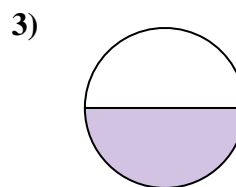
Determine which letter best describes the shaded portion.



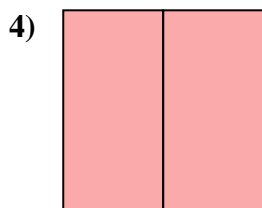
- A. two-halves  
B. two-thirds  
C. one-quarter



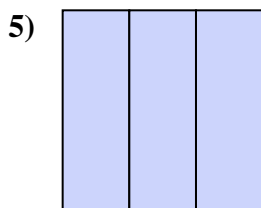
- A. one-fourth  
B. two-quarters  
C. one-half



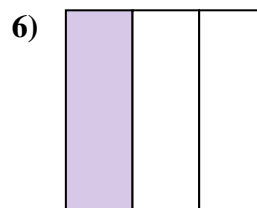
- A. two-fourths  
B. one-half  
C. two-halves



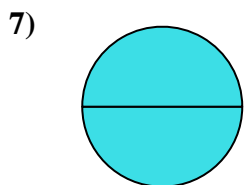
- A. two-halves  
B. two-quarters  
C. one-half



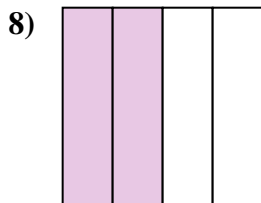
- A. three-fourths  
B. three-thirds  
C. one-fourth



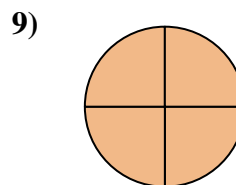
- A. two-halves  
B. one-third  
C. one-quarter



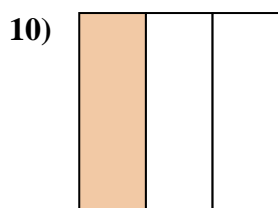
- A. four-fourths  
B. one-half  
C. two-halves



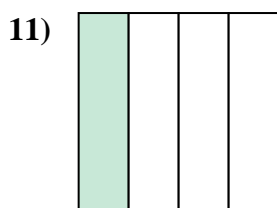
- A. three-quarters  
B. two-quarters  
C. two-halves



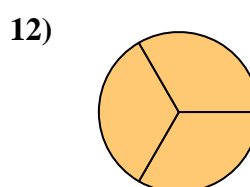
- A. one-half  
B. four-fourths  
C. two-fourths



- A. one-third  
B. one-half  
C. two-halves



- A. three-quarters  
B. two-halves  
C. one-quarter



- A. three-thirds  
B. two-halves  
C. one-half

**Answers**

1. **B**  
2. **C**  
3. **B**  
4. **A**  
5. **B**  
6. **B**  
7. **C**  
8. **B**  
9. **B**  
10. **A**  
11. **C**  
12. **A**