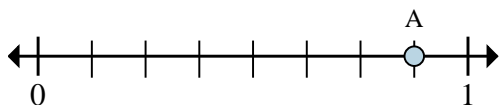




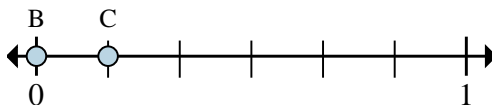
Solve each problem.

Ex)



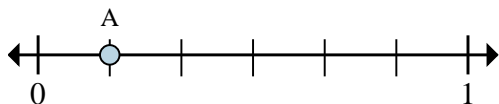
- a. This numberline is divided into how many pieces?
- b. What is the location of A (written as a fraction)?

1)



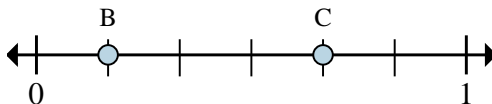
- a. On this numberline what is the value of 1 written as a fraction?
- b. On this numberline from B to C is how far (written as a fraction)?

2)



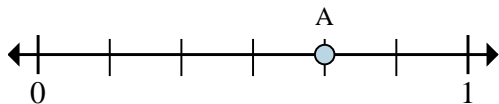
- a. This numberline is divided into how many pieces?
- b. What is the location of A (written as a fraction)?

3)



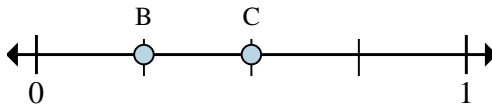
- a. On this numberline what is the value of 0 written as a fraction?
- b. On this numberline from B to C is how far (written as a fraction)?

4)



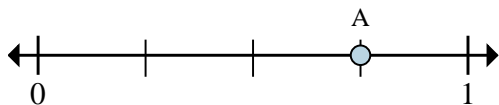
- a. This numberline is divided into how many pieces?
- b. What is the location of A (written as a fraction)?

5)



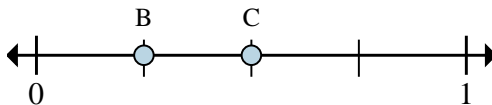
- a. On this numberline what is the value of 0 written as a fraction?
- b. On this numberline from B to C is how far (written as a fraction)?

6)



- a. This numberline is divided into how many pieces?
- b. What is the location of A (written as a fraction)?

7)



- a. On this numberline what is the value of 0 written as a fraction?
- b. On this numberline from B to C is how far (written as a fraction)?

AnswersEx. 8 $\frac{7}{8}$

1. _____

2. _____

3. _____

4. _____

5. _____

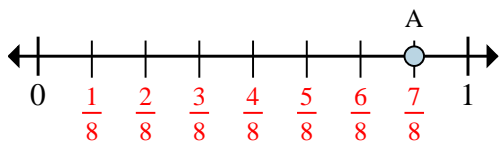
6. _____

7. _____



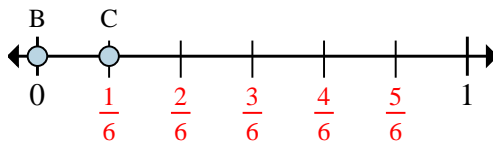
Solve each problem.

Ex)



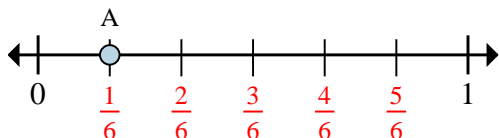
- a. This numberline is divided into how many pieces?
b. What is the location of A (written as a fraction)?

1)



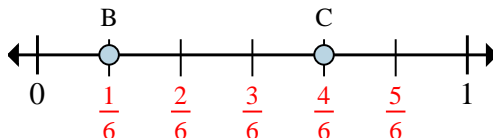
- a. On this numberline what is the value of 1 written as a fraction?
b. On this numberline from B to C is how far (written as a fraction)?

2)



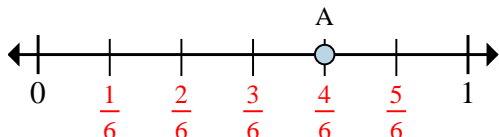
- a. This numberline is divided into how many pieces?
b. What is the location of A (written as a fraction)?

3)



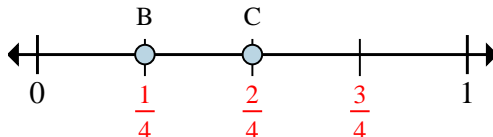
- a. On this numberline what is the value of 0 written as a fraction?
b. On this numberline from B to C is how far (written as a fraction)?

4)



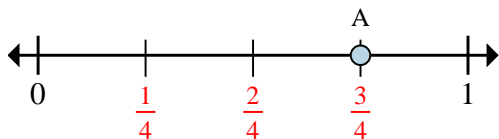
- a. This numberline is divided into how many pieces?
b. What is the location of A (written as a fraction)?

5)



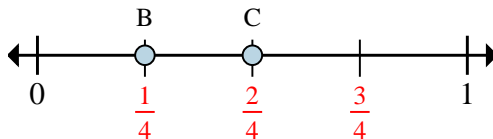
- a. On this numberline what is the value of 0 written as a fraction?
b. On this numberline from B to C is how far (written as a fraction)?

6)



- a. This numberline is divided into how many pieces?
b. What is the location of A (written as a fraction)?

7)



- a. On this numberline what is the value of 0 written as a fraction?
b. On this numberline from B to C is how far (written as a fraction)?

Answers

Ex.	<u>8</u>	<u>7/8</u>
1.	<u>6/6</u>	<u>1/6</u>
2.	<u>6</u>	<u>1/6</u>
3.	<u>0/6</u>	<u>3/6</u>
4.	<u>6</u>	<u>4/6</u>
5.	<u>0/4</u>	<u>1/4</u>
6.	<u>4</u>	<u>3/4</u>
7.	<u>0/4</u>	<u>1/4</u>