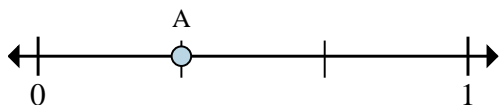




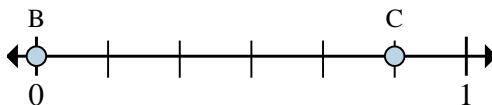
Solve each problem.

Ex)



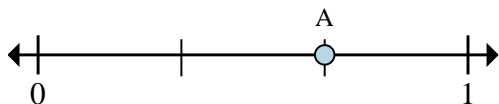
- a. This numberline is divided into how many pieces?
- b. What is the location of A (written as a fraction)?

1)



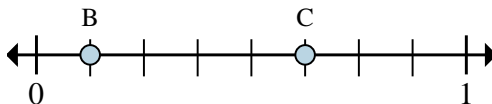
- a. On this numberline what is the value of 1 written as a fraction?
- b. On this numberline from B to C is how far (written as a fraction)?

2)



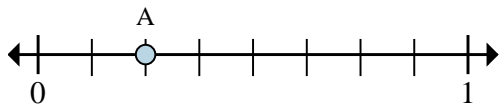
- a. This numberline is divided into how many pieces?
- b. What is the location of A (written as a fraction)?

3)



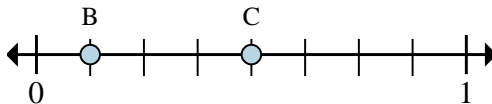
- a. On this numberline what is the value of 0 written as a fraction?
- b. On this numberline from B to C is how far (written as a fraction)?

4)



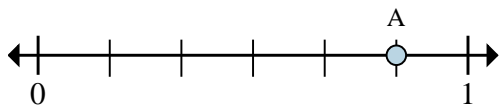
- a. This numberline is divided into how many pieces?
- b. What is the location of A (written as a fraction)?

5)



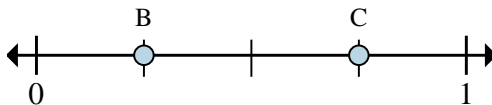
- a. On this numberline what is the value of 1 written as a fraction?
- b. On this numberline from B to C is how far (written as a fraction)?

6)



- a. This numberline is divided into how many pieces?
- b. What is the location of A (written as a fraction)?

7)



- a. On this numberline what is the value of 1 written as a fraction?
- b. On this numberline from B to C is how far (written as a fraction)?

AnswersEx. 3 $\frac{1}{3}$

1. _____

2. _____

3. _____

4. _____

5. _____

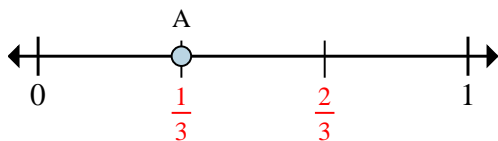
6. _____

7. _____



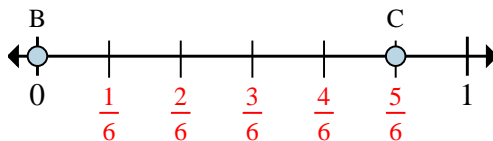
Solve each problem.

Ex)



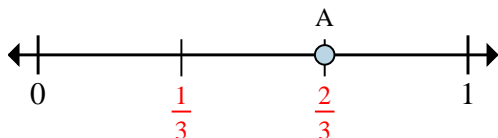
- a. This numberline is divided into how many pieces?
b. What is the location of A (written as a fraction)?

1)



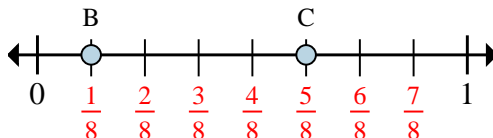
- a. On this numberline what is the value of 1 written as a fraction?
b. On this numberline from B to C is how far (written as a fraction)?

2)



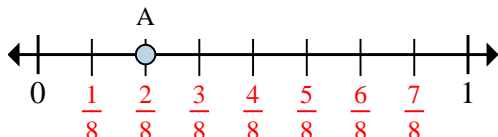
- a. This numberline is divided into how many pieces?
b. What is the location of A (written as a fraction)?

3)



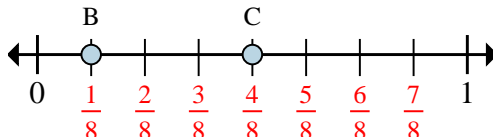
- a. On this numberline what is the value of 0 written as a fraction?
b. On this numberline from B to C is how far (written as a fraction)?

4)



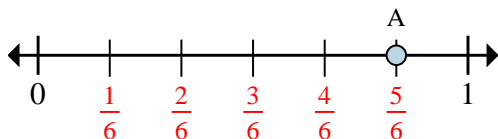
- a. This numberline is divided into how many pieces?
b. What is the location of A (written as a fraction)?

5)



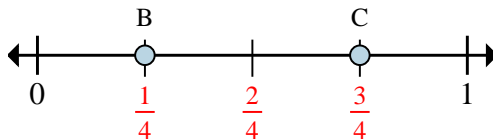
- a. On this numberline what is the value of 1 written as a fraction?
b. On this numberline from B to C is how far (written as a fraction)?

6)



- a. This numberline is divided into how many pieces?
b. What is the location of A (written as a fraction)?

7)



- a. On this numberline what is the value of 1 written as a fraction?
b. On this numberline from B to C is how far (written as a fraction)?

AnswersEx. 3 1/31. 6/6 5/62. 3 2/33. 0/8 4/84. 8 2/85. 8/8 3/86. 6 5/67. 4/4 2/4