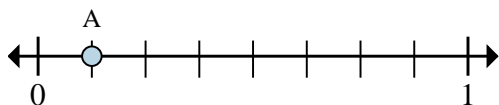




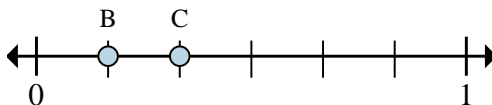
Solve each problem.

Ex)



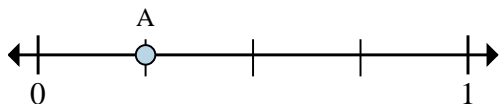
- a. This numberline is divided into how many pieces?
- b. What is the location of A (written as a fraction)?

1)



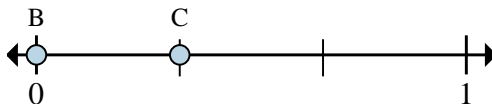
- a. On this numberline what is the value of 1 written as a fraction?
- b. On this numberline from B to C is how far (written as a fraction)?

2)



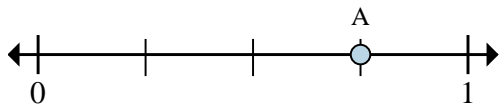
- a. This numberline is divided into how many pieces?
- b. What is the location of A (written as a fraction)?

3)



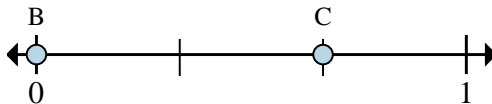
- a. On this numberline what is the value of 0 written as a fraction?
- b. On this numberline from B to C is how far (written as a fraction)?

4)



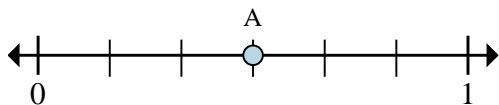
- a. This numberline is divided into how many pieces?
- b. What is the location of A (written as a fraction)?

5)



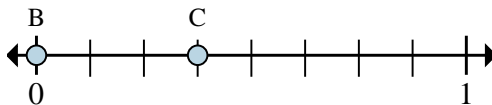
- a. On this numberline what is the value of 1 written as a fraction?
- b. On this numberline from B to C is how far (written as a fraction)?

6)



- a. This numberline is divided into how many pieces?
- b. What is the location of A (written as a fraction)?

7)



- a. On this numberline what is the value of 1 written as a fraction?
- b. On this numberline from B to C is how far (written as a fraction)?

AnswersEx. 8 $\frac{1}{8}$

1. _____

2. _____

3. _____

4. _____

5. _____

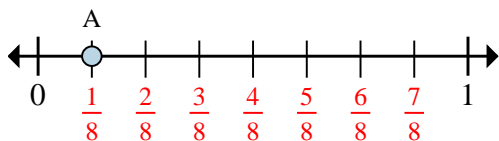
6. _____

7. _____



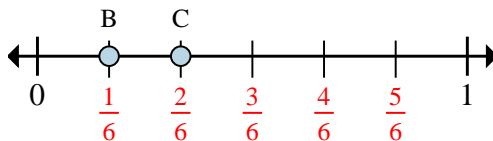
Solve each problem.

Ex)



- a. This numberline is divided into how many pieces?
- b. What is the location of A (written as a fraction)?

1)



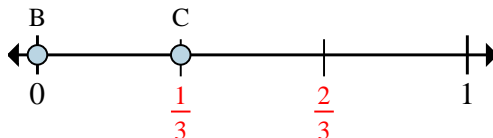
- a. On this numberline what is the value of 1 written as a fraction?
- b. On this numberline from B to C is how far (written as a fraction)?

2)



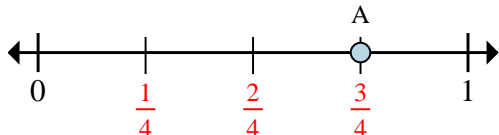
- a. This numberline is divided into how many pieces?
- b. What is the location of A (written as a fraction)?

3)



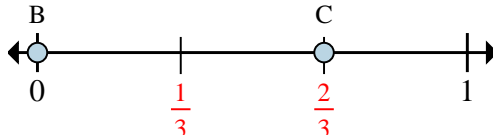
- a. On this numberline what is the value of 0 written as a fraction?
- b. On this numberline from B to C is how far (written as a fraction)?

4)



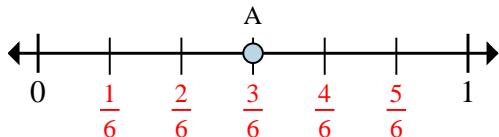
- a. This numberline is divided into how many pieces?
- b. What is the location of A (written as a fraction)?

5)



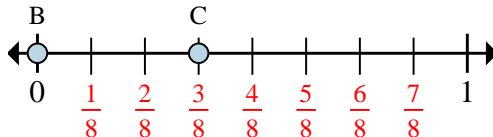
- a. On this numberline what is the value of 1 written as a fraction?
- b. On this numberline from B to C is how far (written as a fraction)?

6)



- a. This numberline is divided into how many pieces?
- b. What is the location of A (written as a fraction)?

7)



- a. On this numberline what is the value of 1 written as a fraction?
- b. On this numberline from B to C is how far (written as a fraction)?

Answers

Ex.

8 **$\frac{1}{8}$**

1.

 $\frac{6}{6}$ **$\frac{1}{6}$**

2.

4 **$\frac{1}{4}$**

3.

 $\frac{0}{3}$ **$\frac{1}{3}$**

4.

4 **$\frac{3}{4}$**

5.

 $\frac{3}{3}$ **$\frac{2}{3}$**

6.

6 **$\frac{3}{6}$**

7.

 $\frac{8}{8}$ **$\frac{3}{8}$**