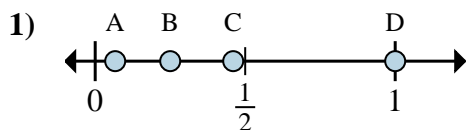
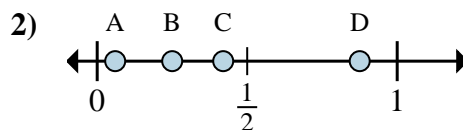
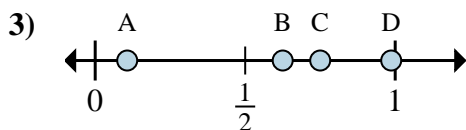
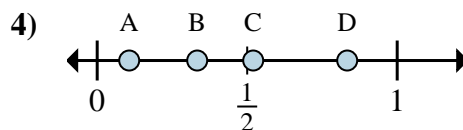
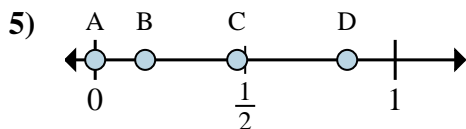
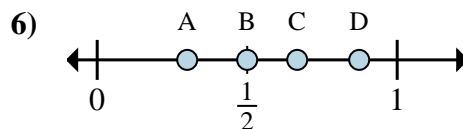
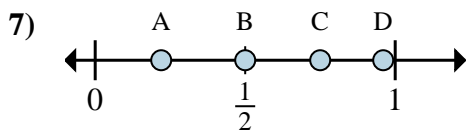
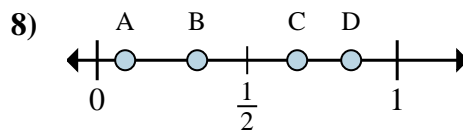




Determine which letter best shows the location of the fraction.

**Answers**a. Which letter best shows  $\frac{4}{4}$ ?b. Which letter best shows  $\frac{1}{4}$ ?a. Which letter best shows  $\frac{7}{8}$ ?b. Which letter best shows  $\frac{2}{8}$ ?a. Which letter best shows  $\frac{5}{8}$ ?b. Which letter best shows  $\frac{6}{8}$ ?a. Which letter best shows  $\frac{5}{6}$ ?b. Which letter best shows  $\frac{2}{6}$ ?a. Which letter best shows  $\frac{0}{6}$ ?b. Which letter best shows  $\frac{1}{6}$ ?a. Which letter best shows  $\frac{3}{6}$ ?b. Which letter best shows  $\frac{4}{6}$ ?a. Which letter best shows  $\frac{3}{4}$ ?b. Which letter best shows  $\frac{2}{4}$ ?a. Which letter best shows  $\frac{2}{3}$ ?b. Which letter best shows  $\frac{1}{3}$ ?

1. \_\_\_\_\_

2. \_\_\_\_\_

3. \_\_\_\_\_

4. \_\_\_\_\_

5. \_\_\_\_\_

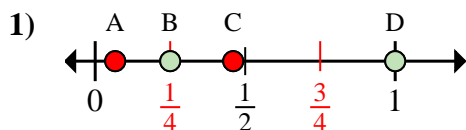
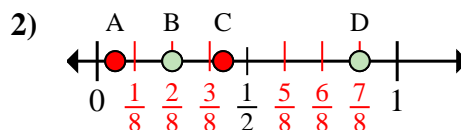
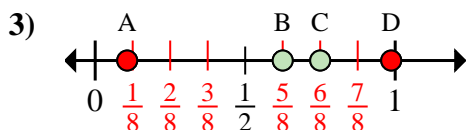
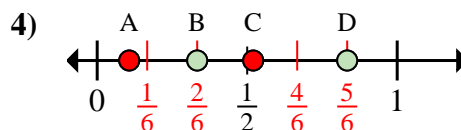
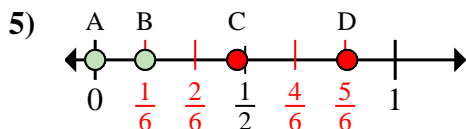
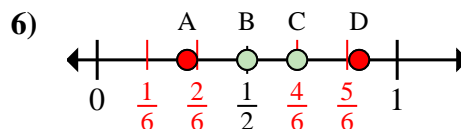
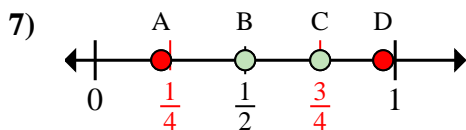
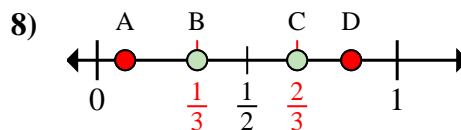
6. \_\_\_\_\_

7. \_\_\_\_\_

8. \_\_\_\_\_



Determine which letter best shows the location of the fraction.

**Answers**a. Which letter best shows  $\frac{4}{4}$ ?b. Which letter best shows  $\frac{1}{4}$ ?a. Which letter best shows  $\frac{7}{8}$ ?b. Which letter best shows  $\frac{2}{8}$ ?a. Which letter best shows  $\frac{5}{8}$ ?b. Which letter best shows  $\frac{6}{8}$ ?a. Which letter best shows  $\frac{5}{6}$ ?b. Which letter best shows  $\frac{2}{6}$ ?a. Which letter best shows  $\frac{0}{6}$ ?b. Which letter best shows  $\frac{1}{6}$ ?a. Which letter best shows  $\frac{3}{6}$ ?b. Which letter best shows  $\frac{4}{6}$ ?a. Which letter best shows  $\frac{3}{4}$ ?b. Which letter best shows  $\frac{2}{4}$ ?a. Which letter best shows  $\frac{2}{3}$ ?b. Which letter best shows  $\frac{1}{3}$ ?1. **D** **B**2. **D** **B**3. **B** **C**4. **D** **B**5. **A** **B**6. **B** **C**7. **C** **B**8. **C** **B**