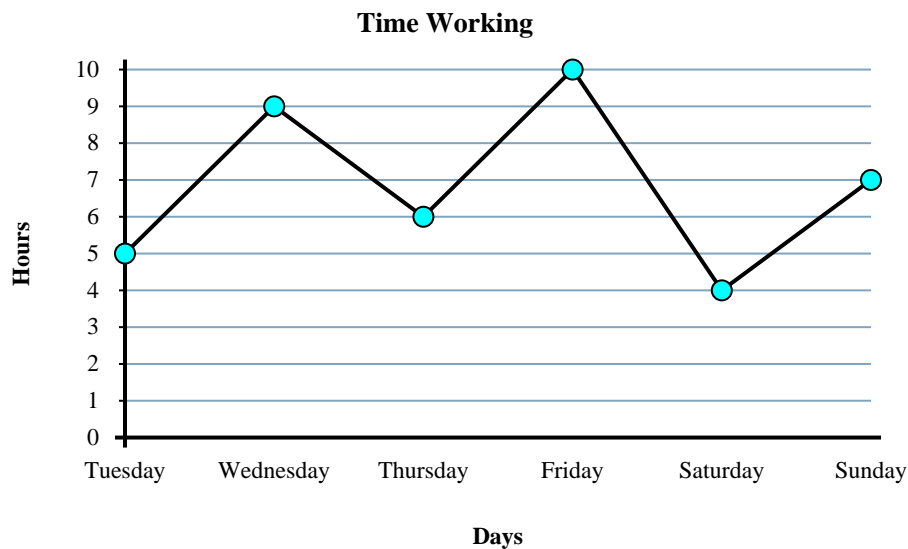




Solve each problem.

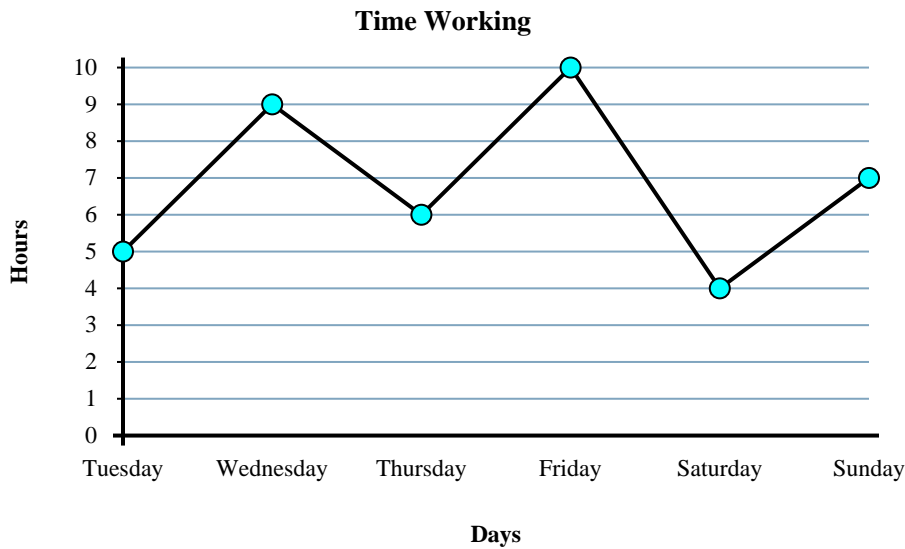
**Answers**

- 1) From Friday to Saturday did the number of hours she worked increase or decrease?
- 2) What is the total number of hours she worked?
- 3) Did she work fewer hours on Friday or on Sunday?
- 4) On Tuesday Sarah wanted to work at least 8 hours. Did she reach her goal?
- 5) How many hours did she work on Friday?
- 6) What is the difference in the number of hours she worked on Wednesday and the number she worked on Thursday?
- 7) Did she work more hours on Wednesday or on Saturday?
- 8) Which day did she work the least?
- 9) How many hours did she work on Friday?
- 10) Which day did she work the most?

1. \_\_\_\_\_
2. \_\_\_\_\_
3. \_\_\_\_\_
4. \_\_\_\_\_
5. \_\_\_\_\_
6. \_\_\_\_\_
7. \_\_\_\_\_
8. \_\_\_\_\_
9. \_\_\_\_\_
10. \_\_\_\_\_



Solve each problem.



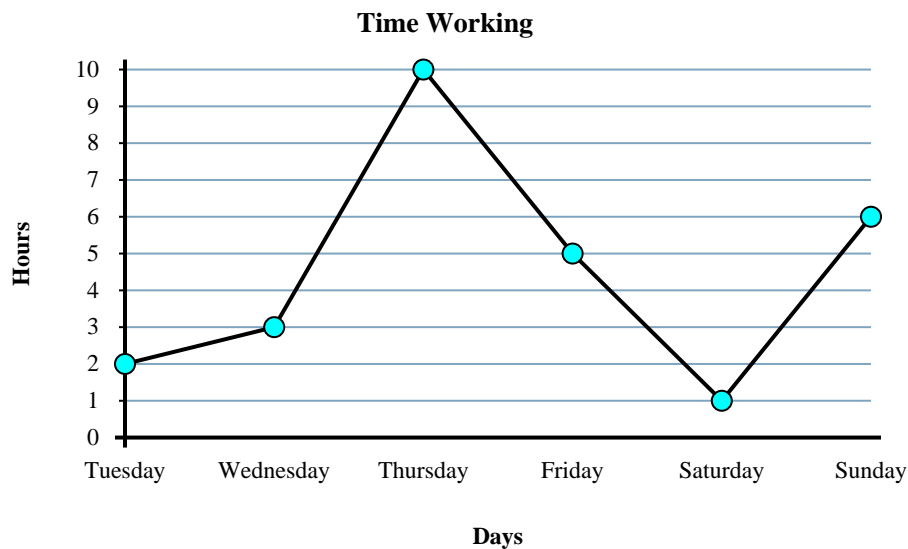
- 1) From Friday to Saturday did the number of hours she worked increase or decrease?
- 2) What is the total number of hours she worked?
- 3) Did she work fewer hours on Friday or on Sunday?
- 4) On Tuesday Sarah wanted to work at least 8 hours. Did she reach her goal?
- 5) How many hours did she work on Friday?
- 6) What is the difference in the number of hours she worked on Wednesday and the number she worked on Thursday?
- 7) Did she work more hours on Wednesday or on Saturday?
- 8) Which day did she work the least?
- 9) How many hours did she work on Friday?
- 10) Which day did she work the most?

**Answers**

1. **Decrease**
2. **41**
3. **Sunday**
4. **no**
5. **10**
6. **3**
7. **Wednesday**
8. **Saturday**
9. **10**
10. **Friday**



Solve each problem.

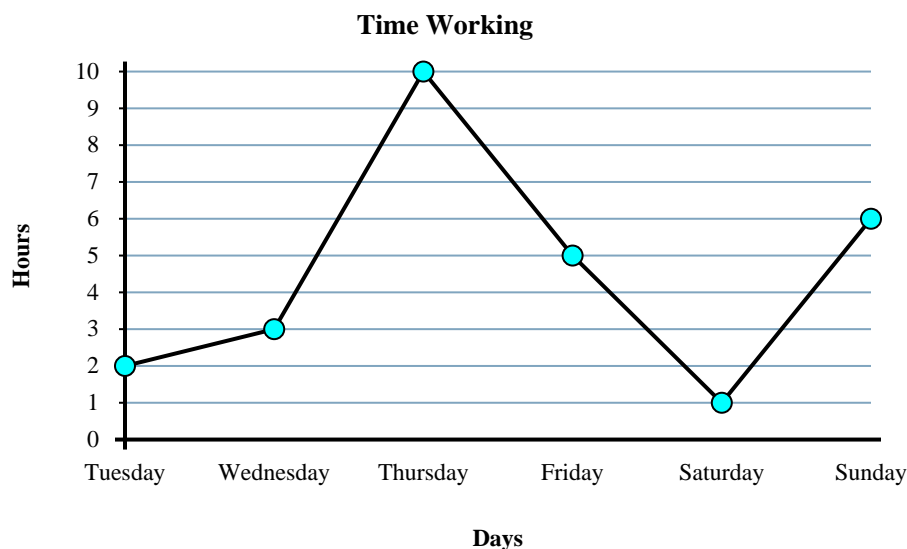
**Answers**

- 1) What is the total number of hours she worked?
- 2) What is the difference in the number of hours she worked on Tuesday and the number she worked on Friday?
- 3) How many hours did she work on Sunday?
- 4) Which day did she work the least?
- 5) From Friday to Saturday did the number of hours she worked increase or decrease?
- 6) On Thursday Sarah wanted to work at least 6 hours. Did she reach her goal?
- 7) Did she work fewer hours on Tuesday or on Saturday?
- 8) How many hours did she work on Thursday?
- 9) Which day did she work the most?
- 10) Did she work more hours on Friday or on Saturday?

1. \_\_\_\_\_
2. \_\_\_\_\_
3. \_\_\_\_\_
4. \_\_\_\_\_
5. \_\_\_\_\_
6. \_\_\_\_\_
7. \_\_\_\_\_
8. \_\_\_\_\_
9. \_\_\_\_\_
10. \_\_\_\_\_



Solve each problem.



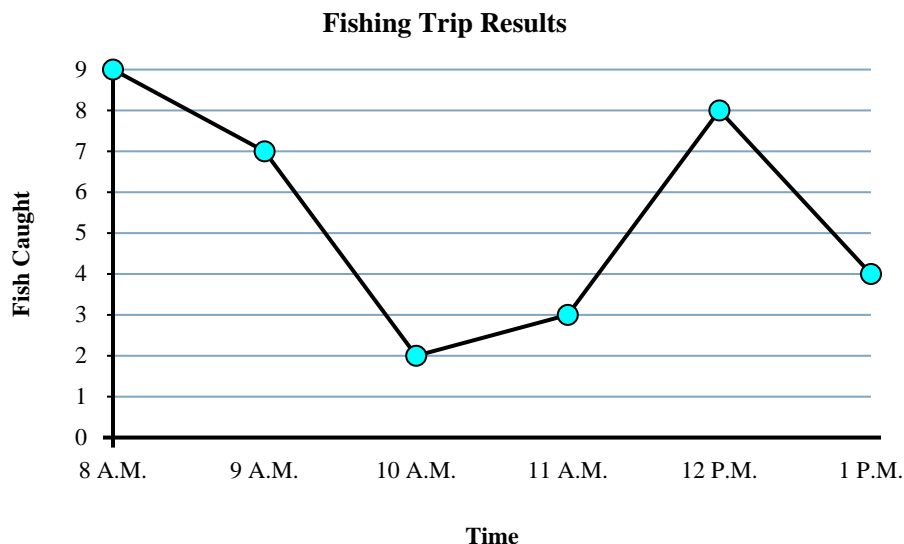
- 1) What is the total number of hours she worked?
- 2) What is the difference in the number of hours she worked on Tuesday and the number she worked on Friday?
- 3) How many hours did she work on Sunday?
- 4) Which day did she work the least?
- 5) From Friday to Saturday did the number of hours she worked increase or decrease?
- 6) On Thursday Sarah wanted to work at least 6 hours. Did she reach her goal?
- 7) Did she work fewer hours on Tuesday or on Saturday?
- 8) How many hours did she work on Thursday?
- 9) Which day did she work the most?
- 10) Did she work more hours on Friday or on Saturday?

**Answers**

1. **27**
2. **3**
3. **6**
4. **Saturday**
5. **Decrease**
6. **yes**
7. **Saturday**
8. **10**
9. **Thursday**
10. **Friday**



Solve each problem.

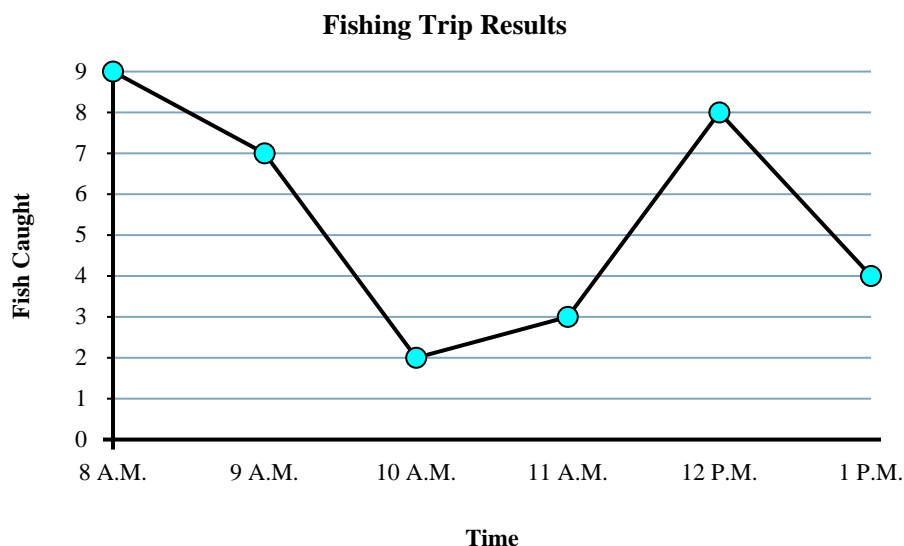
**Answers**

- 1) What time were the most fish caught?
- 2) How many fish were caught at 9 A.M.?
- 3) How many fish were caught at 12 P.M.?
- 4) What time were the fewest fish caught?
- 5) Were more fish caught at 9 A.M. or at 12 P.M.?
- 6) What is the total number of fish caught?
- 7) From 9 A.M. to 10 A.M. did the number of fish caught increase or decrease?
- 8) Were fewer fish caught at 9 A.M. or at 10 A.M.?
- 9) Were there at least 9 caught at 9 A.M.?
- 10) What is the difference in the number of fish caught at 9 A.M. and the number caught at 12 P.M.?

1. \_\_\_\_\_
2. \_\_\_\_\_
3. \_\_\_\_\_
4. \_\_\_\_\_
5. \_\_\_\_\_
6. \_\_\_\_\_
7. \_\_\_\_\_
8. \_\_\_\_\_
9. \_\_\_\_\_
10. \_\_\_\_\_



Solve each problem.



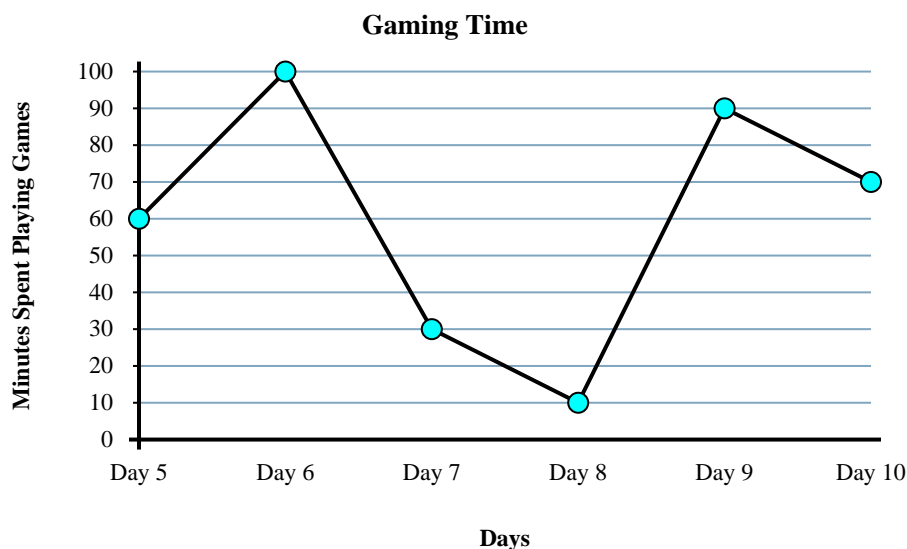
- 1) What time were the most fish caught?
- 2) How many fish were caught at 9 A.M.?
- 3) How many fish were caught at 12 P.M.?
- 4) What time were the fewest fish caught?
- 5) Were more fish caught at 9 A.M. or at 12 P.M.?
- 6) What is the total number of fish caught?
- 7) From 9 A.M. to 10 A.M. did the number of fish caught increase or decrease?
- 8) Were fewer fish caught at 9 A.M. or at 10 A.M.?
- 9) Were there at least 9 caught at 9 A.M.?
- 10) What is the difference in the number of fish caught at 9 A.M. and the number caught at 12 P.M.?

**Answers**

1. **8 A.M.**
2. **7**
3. **8**
4. **10 A.M.**
5. **12 P.M.**
6. **33**
7. **Decrease**
8. **10 A.M.**
9. **no**
10. **1**



Solve each problem.

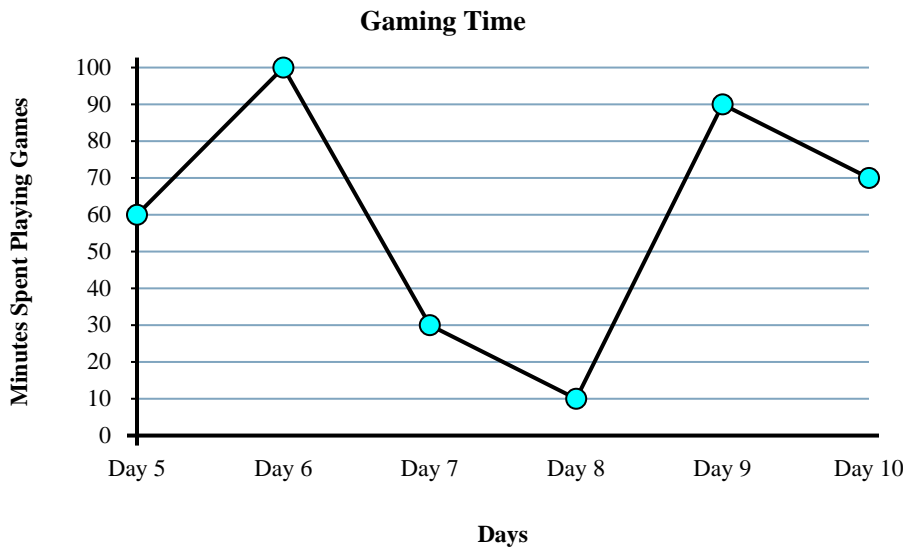
**Answers**

- 1) On Day 8 he wanted to play at least 70 minutes. Did he get to or not?
- 2) From Day 6 to Day 7 did the amount of time he spent playing games increase or decrease?
- 3) Did he spend more time playing on Day 5 or Day 7?
- 4) What is the total time he spent playing?
- 5) How many minutes did he play on Day 9?
- 6) Which day did he spend the least time playing games?
- 7) What is the difference in the amount of time spent playing on Day 6 and the amount spent playing on Day 8?
- 8) Did he spend less time playing on Day 7 or Day 9?
- 9) How many minutes did he play on Day 9?
- 10) Which day did he spend the most time playing games?

1. \_\_\_\_\_
2. \_\_\_\_\_
3. \_\_\_\_\_
4. \_\_\_\_\_
5. \_\_\_\_\_
6. \_\_\_\_\_
7. \_\_\_\_\_
8. \_\_\_\_\_
9. \_\_\_\_\_
10. \_\_\_\_\_



Solve each problem.



- 1) On Day 8 he wanted to play at least 70 minutes. Did he get to or not?
- 2) From Day 6 to Day 7 did the amount of time he spent playing games increase or decrease?
- 3) Did he spend more time playing on Day 5 or Day 7?
- 4) What is the total time he spent playing?
- 5) How many minutes did he play on Day 9?
- 6) Which day did he spend the least time playing games?
- 7) What is the difference in the amount of time spent playing on Day 6 and the amount spent playing on Day 8?
- 8) Did he spend less time playing on Day 7 or Day 9?
- 9) How many minutes did he play on Day 9?
- 10) Which day did he spend the most time playing games?

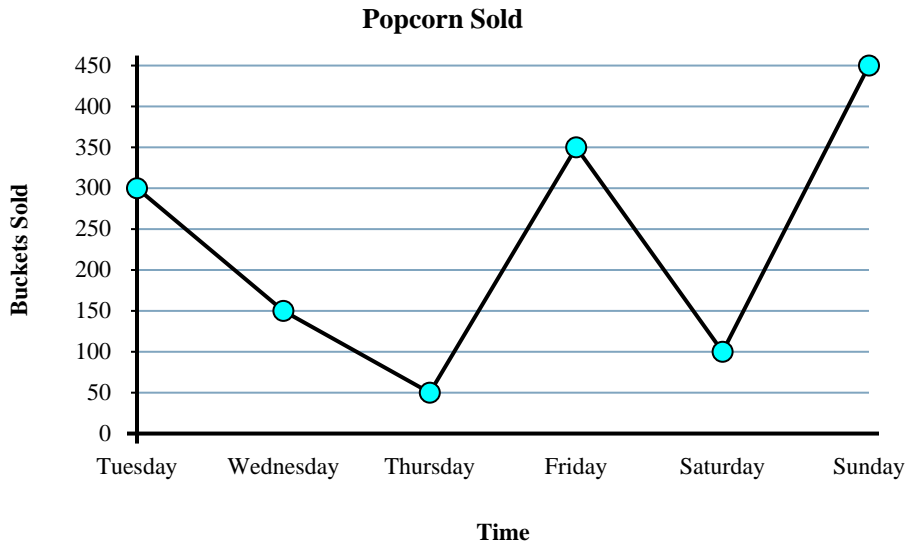
**Answers**

1. **no**
2. **Decrease**
3. **Day 5**
4. **360**
5. **90**
6. **Day 8**
7. **90**
8. **Day 7**
9. **90**
10. **Day 6**





Solve each problem.

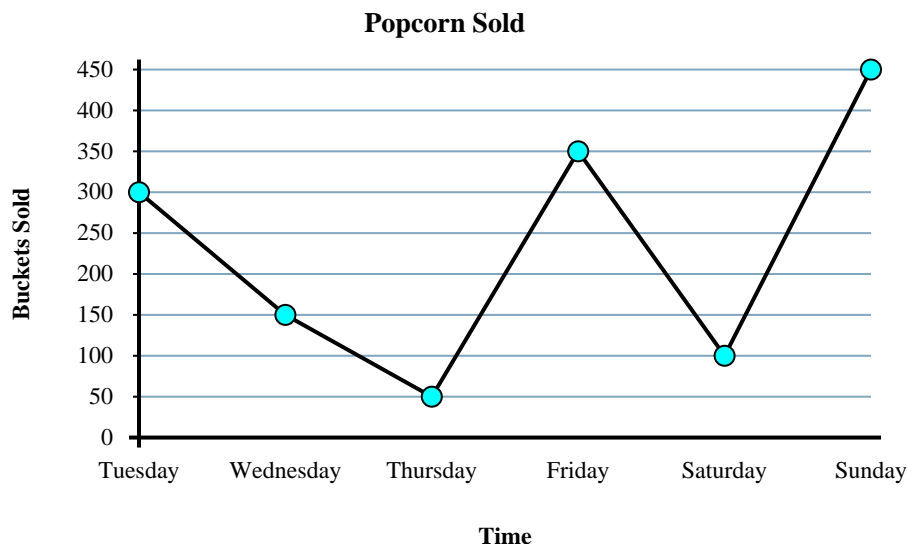
**Answers**

- 1) On Wednesday the goal was to sell at least 200 buckets. Was that goal reached?
- 2) How many buckets were sold on Sunday?
- 3) From Tuesday to Wednesday did the amount of popcorn sold increase or decrease?
- 4) How many buckets were sold on Tuesday?
- 5) What is the total number of buckets sold?
- 6) Which day had the least popcorn sold?
- 7) Which day had the most popcorn sold?
- 8) Were fewer buckets sold on Wednesday or on Sunday?
- 9) What is the difference in the number of buckets sold on Tuesday and the number sold on Thursday?
- 10) Were more buckets sold on Thursday or on Friday?

1. \_\_\_\_\_
2. \_\_\_\_\_
3. \_\_\_\_\_
4. \_\_\_\_\_
5. \_\_\_\_\_
6. \_\_\_\_\_
7. \_\_\_\_\_
8. \_\_\_\_\_
9. \_\_\_\_\_
10. \_\_\_\_\_



Solve each problem.



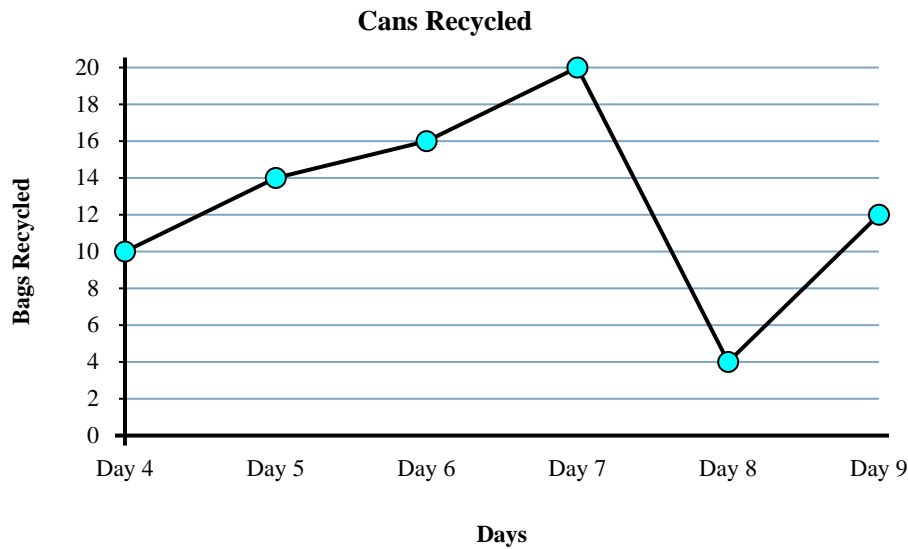
- 1) On Wednesday the goal was to sell at least 200 buckets. Was that goal reached?
- 2) How many buckets were sold on Sunday?
- 3) From Tuesday to Wednesday did the amount of popcorn sold increase or decrease?
- 4) How many buckets were sold on Tuesday?
- 5) What is the total number of buckets sold?
- 6) Which day had the least popcorn sold?
- 7) Which day had the most popcorn sold?
- 8) Were fewer buckets sold on Wednesday or on Sunday?
- 9) What is the difference in the number of buckets sold on Tuesday and the number sold on Thursday?
- 10) Were more buckets sold on Thursday or on Friday?

**Answers**

1. **no**
2. **450**
3. **Decrease**
4. **300**
5. **1400**
6. **Thursday**
7. **Sunday**
8. **Wednesday**
9. **250**
10. **Friday**



Solve each problem.

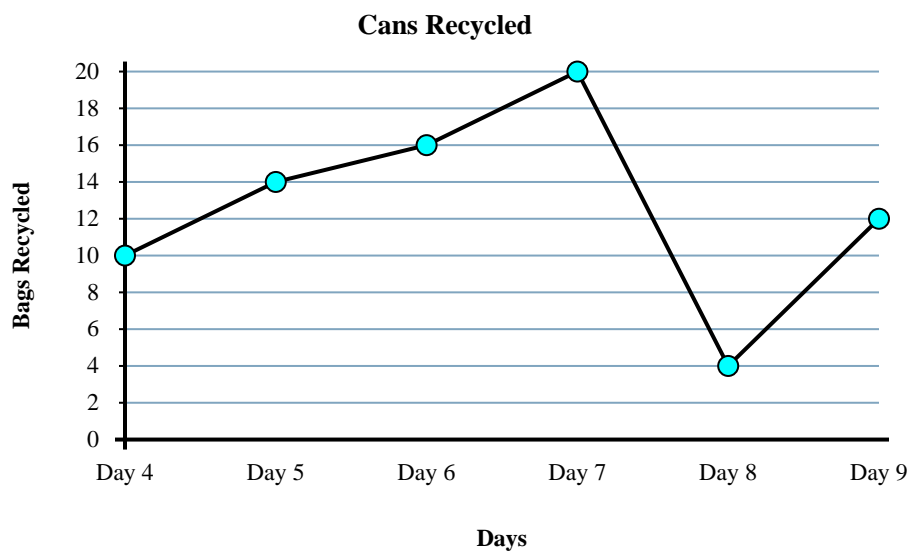
**Answers**

- 1) Were more bags recycled on Day 4 or Day 7?
- 2) How many bags were recycled on Day 6?
- 3) Which day had the fewest bags recycled?
- 4) What is the difference in the number of bags recycled on Day 6 and the number recycled on Day 7?
- 5) Were fewer bags recycled on Day 7 or Day 8?
- 6) Which day had the greatest number of bags recycled?
- 7) What is the total number of bags recycled?
- 8) From Day 4 to Day 5 did the amount of bags recycled increase or decrease?
- 9) How many bags were recycled on Day 9?
- 10) On Day 6 the goal was to recycle 18 bags. Was the goal reached?

1. \_\_\_\_\_
2. \_\_\_\_\_
3. \_\_\_\_\_
4. \_\_\_\_\_
5. \_\_\_\_\_
6. \_\_\_\_\_
7. \_\_\_\_\_
8. \_\_\_\_\_
9. \_\_\_\_\_
10. \_\_\_\_\_



Solve each problem.



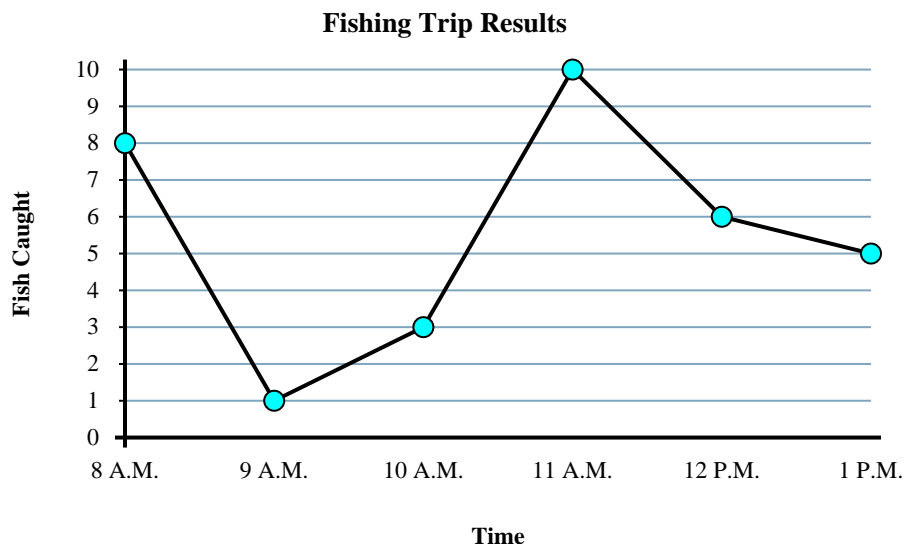
- 1) Were more bags recycled on Day 4 or Day 7?
- 2) How many bags were recycled on Day 6?
- 3) Which day had the fewest bags recycled?
- 4) What is the difference in the number of bags recycled on Day 6 and the number recycled on Day 7?
- 5) Were fewer bags recycled on Day 7 or Day 8?
- 6) Which day had the greatest number of bags recycled?
- 7) What is the total number of bags recycled?
- 8) From Day 4 to Day 5 did the amount of bags recycled increase or decrease?
- 9) How many bags were recycled on Day 9?
- 10) On Day 6 the goal was to recycle 18 bags. Was the goal reached?

**Answers**

1. **Day 7**
2. **16**
3. **Day 8**
4. **4**
5. **Day 8**
6. **Day 7**
7. **76**
8. **Increase**
9. **12**
10. **no**



Solve each problem.

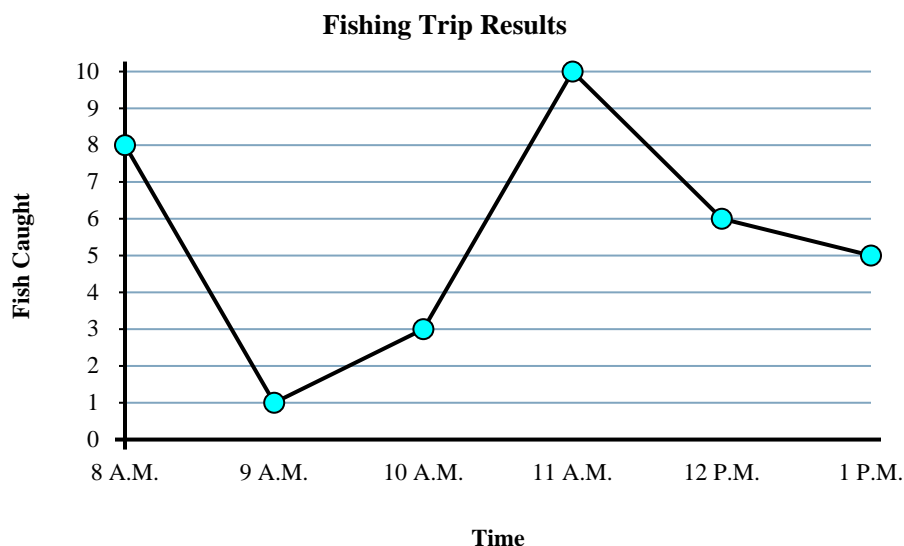
**Answers**

- 1) What is the difference in the number of fish caught at 10 A.M. and the number caught at 1 P.M.?
- 2) Were more fish caught at 8 A.M. or at 9 A.M.?
- 3) What time were the most fish caught?
- 4) How many fish were caught at 11 A.M.?
- 5) From 10 A.M. to 11 A.M. did the number of fish caught increase or decrease?
- 6) Were fewer fish caught at 11 A.M. or at 1 P.M.?
- 7) How many fish were caught at 10 A.M.?
- 8) What time were the fewest fish caught?
- 9) What is the total number of fish caught?
- 10) Were there at least 10 caught at 12 P.M.?

1. \_\_\_\_\_
2. \_\_\_\_\_
3. \_\_\_\_\_
4. \_\_\_\_\_
5. \_\_\_\_\_
6. \_\_\_\_\_
7. \_\_\_\_\_
8. \_\_\_\_\_
9. \_\_\_\_\_
10. \_\_\_\_\_



Solve each problem.



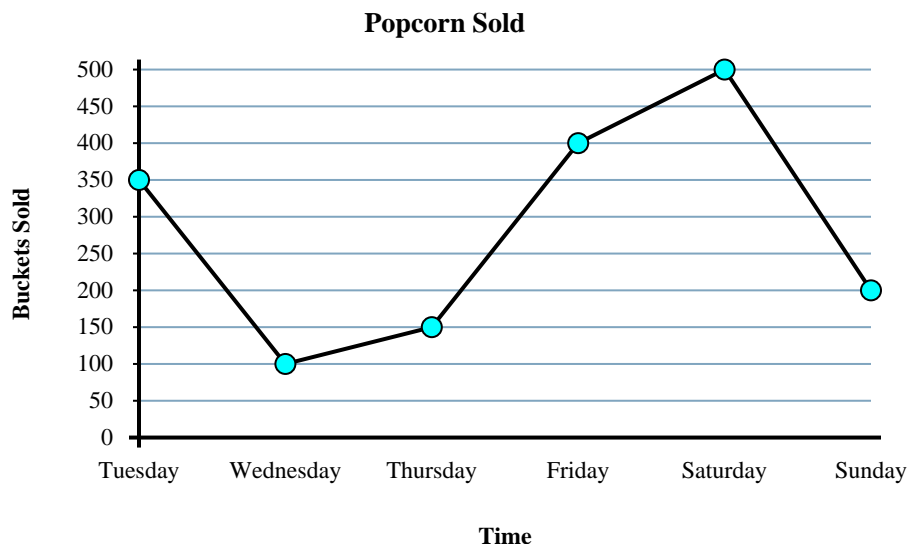
- 1) What is the difference in the number of fish caught at 10 A.M. and the number caught at 1 P.M.?
- 2) Were more fish caught at 8 A.M. or at 9 A.M.?
- 3) What time were the most fish caught?
- 4) How many fish were caught at 11 A.M.?
- 5) From 10 A.M. to 11 A.M. did the number of fish caught increase or decrease?
- 6) Were fewer fish caught at 11 A.M. or at 1 P.M.?
- 7) How many fish were caught at 10 A.M.?
- 8) What time were the fewest fish caught?
- 9) What is the total number of fish caught?
- 10) Were there at least 10 caught at 12 P.M.?

**Answers**

1. **2**
2. **8 A.M.**
3. **11 A.M.**
4. **10**
5. **Increase**
6. **1 P.M.**
7. **3**
8. **9 A.M.**
9. **33**
10. **no**



Solve each problem.

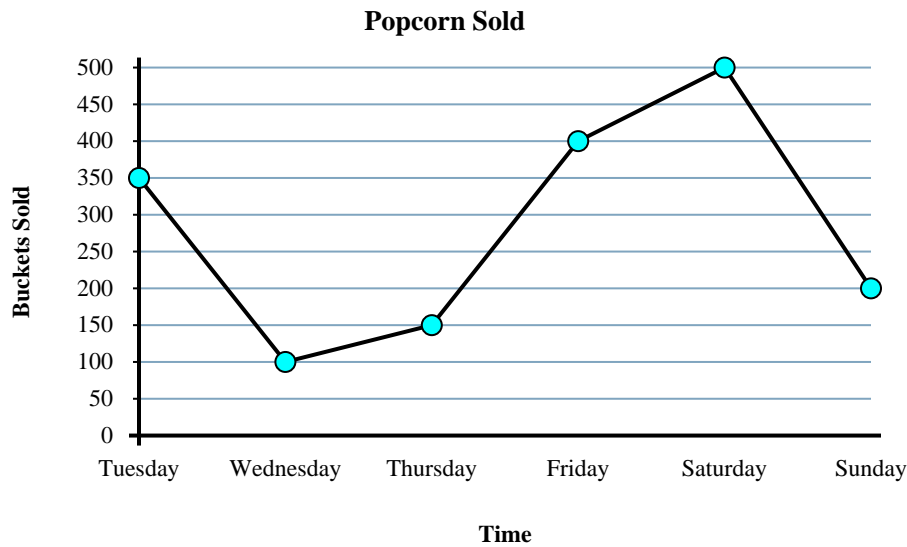
Answers

- 1) Were more buckets sold on Wednesday or on Friday?
- 2) On Sunday the goal was to sell at least 300 buckets. Was that goal reached?
- 3) From Friday to Saturday did the amount of popcorn sold increase or decrease?
- 4) How many buckets were sold on Sunday?
- 5) Were fewer buckets sold on Thursday or on Sunday?
- 6) How many buckets were sold on Wednesday?
- 7) What is the total number of buckets sold?
- 8) Which day had the least popcorn sold?
- 9) Which day had the most popcorn sold?
- 10) What is the difference in the number of buckets sold on Thursday and the number sold on Friday?

1. \_\_\_\_\_
2. \_\_\_\_\_
3. \_\_\_\_\_
4. \_\_\_\_\_
5. \_\_\_\_\_
6. \_\_\_\_\_
7. \_\_\_\_\_
8. \_\_\_\_\_
9. \_\_\_\_\_
10. \_\_\_\_\_



Solve each problem.



- 1) Were more buckets sold on Wednesday or on Friday?
- 2) On Sunday the goal was to sell at least 300 buckets. Was that goal reached?
- 3) From Friday to Saturday did the amount of popcorn sold increase or decrease?
- 4) How many buckets were sold on Sunday?
- 5) Were fewer buckets sold on Thursday or on Sunday?
- 6) How many buckets were sold on Wednesday?
- 7) What is the total number of buckets sold?
- 8) Which day had the least popcorn sold?
- 9) Which day had the most popcorn sold?
- 10) What is the difference in the number of buckets sold on Thursday and the number sold on Friday?

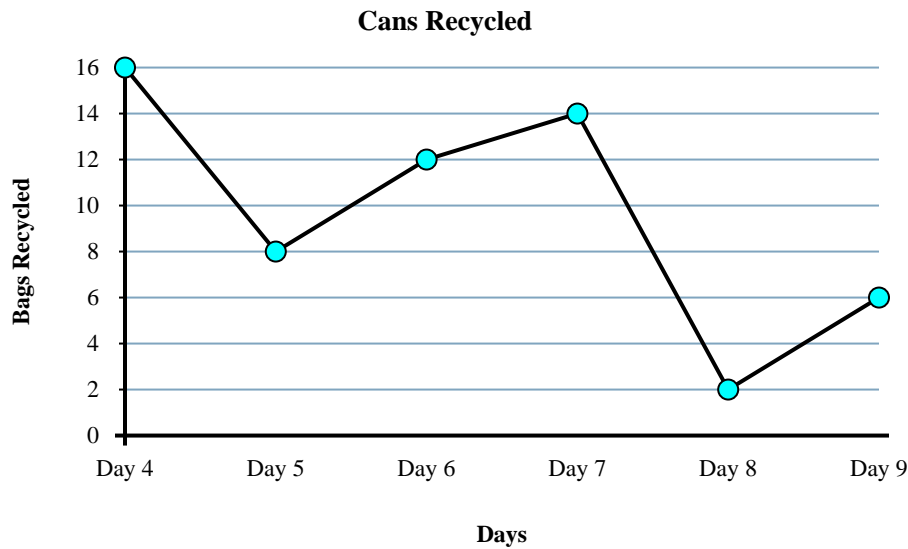
**Answers**

1. **Friday**
2. **no**
3. **Increase**
4. **200**
5. **Thursday**
6. **100**
7. **1700**
8. **Wednesday**
9. **Saturday**
10. **250**





Solve each problem.

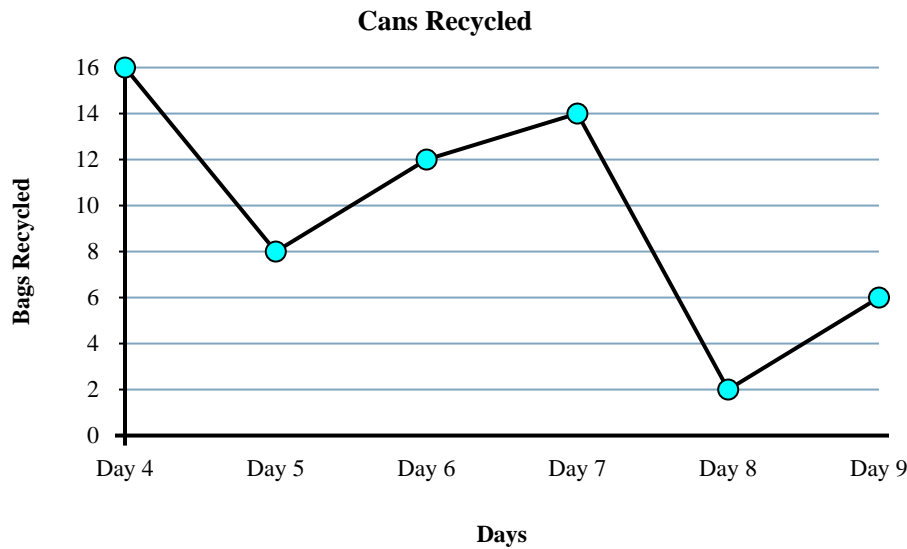
**Answers**

- 1) From Day 5 to Day 6 did the amount of bags recycled increase or decrease?
- 2) Which day had the greatest number of bags recycled?
- 3) On Day 9 the goal was to recycle 4 bags. Was the goal reached?
- 4) Which day had the fewest bags recycled?
- 5) Were fewer bags recycled on Day 7 or Day 9?
- 6) How many bags were recycled on Day 6?
- 7) What is the total number of bags recycled?
- 8) What is the difference in the number of bags recycled on Day 4 and the number recycled on Day 7?
- 9) How many bags were recycled on Day 5?
- 10) Were more bags recycled on Day 4 or Day 7?

1. \_\_\_\_\_
2. \_\_\_\_\_
3. \_\_\_\_\_
4. \_\_\_\_\_
5. \_\_\_\_\_
6. \_\_\_\_\_
7. \_\_\_\_\_
8. \_\_\_\_\_
9. \_\_\_\_\_
10. \_\_\_\_\_



Solve each problem.

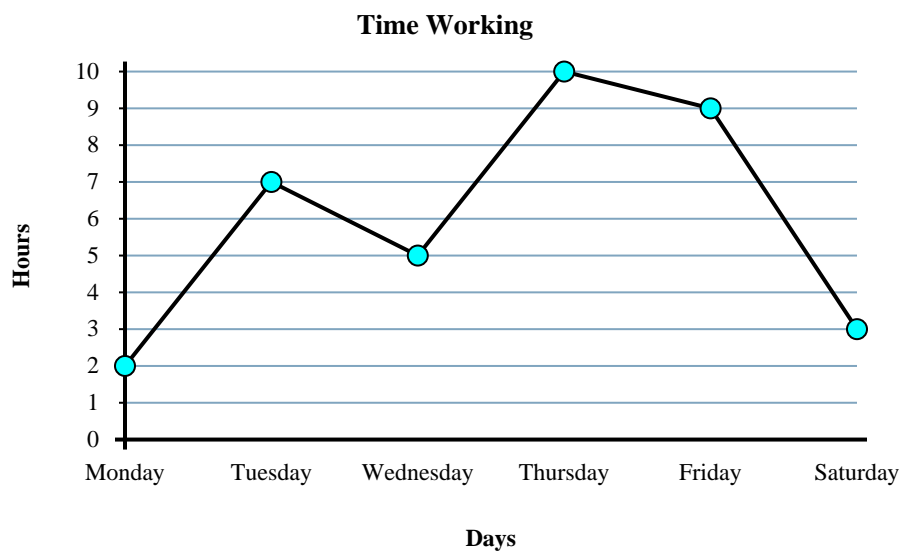
**Answers**

- 1) From Day 5 to Day 6 did the amount of bags recycled increase or decrease?
- 2) Which day had the greatest number of bags recycled?
- 3) On Day 9 the goal was to recycle 4 bags. Was the goal reached?
- 4) Which day had the fewest bags recycled?
- 5) Were fewer bags recycled on Day 7 or Day 9?
- 6) How many bags were recycled on Day 6?
- 7) What is the total number of bags recycled?
- 8) What is the difference in the number of bags recycled on Day 4 and the number recycled on Day 7?
- 9) How many bags were recycled on Day 5?
- 10) Were more bags recycled on Day 4 or Day 7?

1. **Increase**
2. **Day 4**
3. **yes**
4. **Day 8**
5. **Day 9**
6. **12**
7. **58**
8. **2**
9. **8**
10. **Day 4**



Solve each problem.

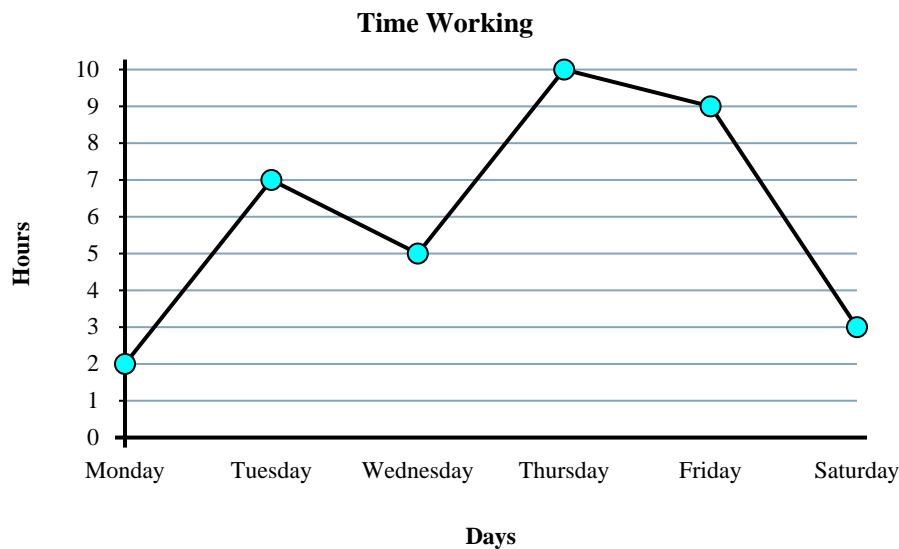
**Answers**

- 1) How many hours did she work on Monday?
- 2) From Monday to Tuesday did the number of hours she worked increase or decrease?
- 3) Which day did she work the most?
- 4) How many hours did she work on Saturday?
- 5) What is the total number of hours she worked?
- 6) On Thursday Sarah wanted to work at least 3 hours. Did she reach her goal?
- 7) Which day did she work the least?
- 8) What is the difference in the number of hours she worked on Tuesday and the number she worked on Friday?
- 9) Did she work more hours on Tuesday or on Wednesday?
- 10) Did she work fewer hours on Wednesday or on Thursday?

1. \_\_\_\_\_
2. \_\_\_\_\_
3. \_\_\_\_\_
4. \_\_\_\_\_
5. \_\_\_\_\_
6. \_\_\_\_\_
7. \_\_\_\_\_
8. \_\_\_\_\_
9. \_\_\_\_\_
10. \_\_\_\_\_



Solve each problem.



- 1) How many hours did she work on Monday?
- 2) From Monday to Tuesday did the number of hours she worked increase or decrease?
- 3) Which day did she work the most?
- 4) How many hours did she work on Saturday?
- 5) What is the total number of hours she worked?
- 6) On Thursday Sarah wanted to work at least 3 hours. Did she reach her goal?
- 7) Which day did she work the least?
- 8) What is the difference in the number of hours she worked on Tuesday and the number she worked on Friday?
- 9) Did she work more hours on Tuesday or on Wednesday?
- 10) Did she work fewer hours on Wednesday or on Thursday?

**Answers**

1. 2
2. Increase
3. Thursday
4. 3
5. 36
6. yes
7. Monday
8. 2
9. Tuesday
10. Wednesday