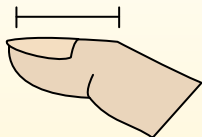



**Determine which letter best represents the length / height.****Answers****Inch (in)**

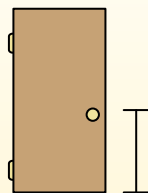
An inch is about the distance of the last joint of your finger.

**Foot (ft)**

A foot is 12 inches. The length of a ruler.

**Yard (yd)**

1 yard is the same as 3 feet. From the floor to a door knob is about 1 yard.

**Mile (mi)**

A mile is 5,280 feet. Most major roads are at least a mile long.



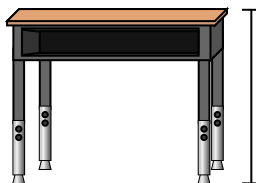
1)



Pen

- A. 5 inches
- B. 12 inches
- C. 1 foot
- D. 5 yards

2)



Desk

- A. 6 inches
- B. 2 yards
- C. 2 feet
- D. 11 inches

3)



Frog

- A. 9 inches
- B. 3 inches
- C. 1 foot
- D. 2 feet

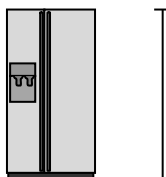
4)



Bicycle

- A. 3 inches
- B. 1 yard
- C. 3 yards
- D. 10 inches

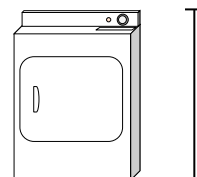
5)



Refrigerator

- A. 6 feet
- B. 1 foot
- C. 12 inches
- D. 4 yards

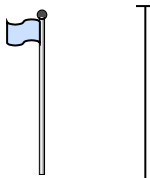
6)



Clothes Dryer

- A. 2 feet
- B. 1 yard
- C. 11 inches
- D. 6 inches


7)



Flag Pole

- A. 5 feet
- B. 10 yards
- C. 1 mile
- D. 12 inches

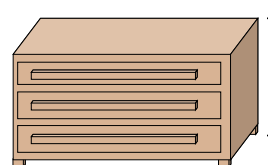
8)



Tennis Ball

- A. 1 foot
- B. 7 inches
- C. 3 inches
- D. 2 feet

9)



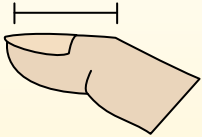
Dresser

- A. 18 inches
- B. 3 feet
- C. 3 yards
- D. 12 inches

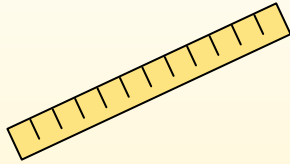
- 1. \_\_\_\_\_
- 2. \_\_\_\_\_
- 3. \_\_\_\_\_
- 4. \_\_\_\_\_
- 5. \_\_\_\_\_
- 6. \_\_\_\_\_
- 7. \_\_\_\_\_
- 8. \_\_\_\_\_
- 9. \_\_\_\_\_

**Determine which letter best represents the length / height.****Answers****Inch (in)**

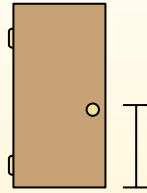
An inch is about the distance of the last joint of your finger.

**Foot (ft)**

A foot is 12 inches. The length of a ruler.

**Yard (yd)**

1 yard is the same as 3 feet. From the floor to a door knob is about 1 yard.

**Mile (mi)**

A mile is 5,280 feet. Most major roads are at least a mile long.



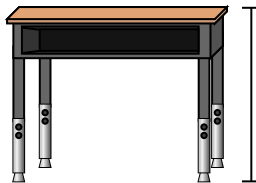
1)



Pen

- A. 5 inches
- B. 12 inches
- C. 1 foot
- D. 5 yards

2)



Desk

- A. 6 inches
- B. 2 yards
- C. 2 feet
- D. 11 inches

3)



Frog

- A. 9 inches
- B. 3 inches
- C. 1 foot
- D. 2 feet

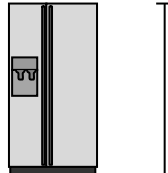
4)



Bicycle

- A. 3 inches
- B. 1 yard
- C. 3 yards
- D. 10 inches

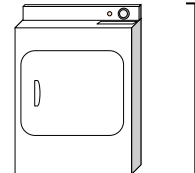
5)



Refrigerator

- A. 6 feet
- B. 1 foot
- C. 12 inches
- D. 4 yards

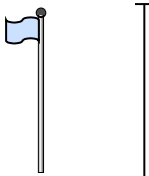
6)



Clothes Dryer

- A. 2 feet
- B. 1 yard
- C. 11 inches
- D. 6 inches


7)



Flag Pole

- A. 5 feet
- B. 10 yards
- C. 1 mile
- D. 12 inches

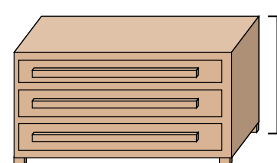
8)



Tennis Ball

- A. 1 foot
- B. 7 inches
- C. 3 inches
- D. 2 feet

9)



Dresser

- A. 18 inches
- B. 3 feet
- C. 3 yards
- D. 12 inches

1. **A**2. **C**3. **B**4. **B**5. **A**6. **B**7. **B**8. **C**9. **B**