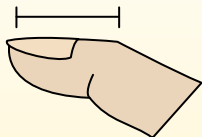



**Determine which letter best represents the length / height.****Answers****Inch (in)**

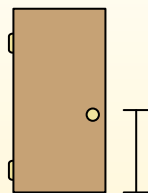
An inch is about the distance of the last joint of your finger.

**Foot (ft)**

A foot is 12 inches. The length of a ruler.

**Yard (yd)**


1 yard is the same as 3 feet. From the floor to a door knob is about 1 yard.

**Mile (mi)**

A mile is 5,280 feet. Most major roads are at least a mile long.



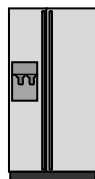
1)



Apple Height

- A. 4 inches
- B. 2 feet
- C. 1 yard
- D. 1 inch


2)



Refrigerator

- A. 12 inches
- B. 1 foot
- C. 6 feet
- D. 4 yards

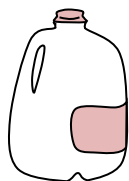
3)



Notebook Paper

- A. 2 feet
- B. 6 inches
- C. 11 inches
- D. 1 yard

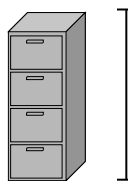
4)



Gallon of Milk

- A. 11 feet
- B. 3 inches
- C. 9 inches
- D. 6 inches

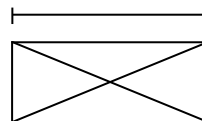
5)



File Cabinet

- A. 2 feet
- B. 11 inches
- C. 5 feet
- D. 1 foot

6)



Envelope

- A. 1 inch
- B. 1 foot
- C. 7 inches
- D. 3 inches


7)



Frog

- A. 3 inches
- B. 2 feet
- C. 9 inches
- D. 1 foot

8)



Hammer

- A. 1 yard
- B. 4 inches
- C. 1 inch
- D. 16 inches

9)



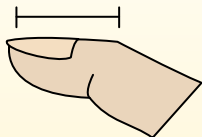
Recliner

- A. 2 feet
- B. 4 inches
- C. 1 yard
- D. 2 yards


- 1. _____
- 2. _____
- 3. _____
- 4. _____
- 5. _____
- 6. _____
- 7. _____
- 8. _____
- 9. _____

**Determine which letter best represents the length / height.****Answers****Inch (in)**

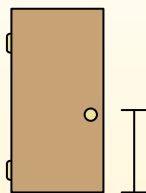
An inch is about the distance of the last joint of your finger.

**Foot (ft)**

A foot is 12 inches. The length of a ruler.

**Yard (yd)**


1 yard is the same as 3 feet. From the floor to a door knob is about 1 yard.

**Mile (mi)**

A mile is 5,280 feet. Most major roads are at least a mile long.



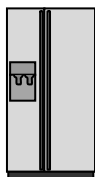
1)



Apple Height

- A. 4 inches
- B. 2 feet
- C. 1 yard
- D. 1 inch


2)



Refrigerator

- A. 12 inches
- B. 1 foot
- C. 6 feet
- D. 4 yards

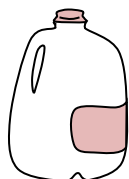
3)



Notebook Paper

- A. 2 feet
- B. 6 inches
- C. 11 inches
- D. 1 yard

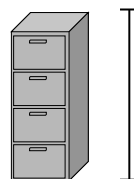
4)



Gallon of Milk

- A. 11 feet
- B. 3 inches
- C. 9 inches
- D. 6 inches

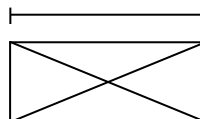
5)



File Cabinet

- A. 2 feet
- B. 11 inches
- C. 5 feet
- D. 1 foot

6)



Envelope

- A. 1 inch
- B. 1 foot
- C. 7 inches
- D. 3 inches


7)



Frog

- A. 3 inches
- B. 2 feet
- C. 9 inches
- D. 1 foot

8)



Hammer

- A. 1 yard
- B. 4 inches
- C. 1 inch
- D. 16 inches

9)



Recliner

- A. 2 feet
- B. 4 inches
- C. 1 yard
- D. 2 yards

- 1. **A**
- 2. **C**
- 3. **C**
- 4. **C**
- 5. **C**
- 6. **C**
- 7. **A**
- 8. **D**
- 9. **C**