




Measure the width and height of each block in inches and in centimeters.

Ex)



1)




2)



3)



4)

**Answers**Ex. 2 0 1/2 5.1 1.3

1. _____

2. _____

3. _____

4. _____




Measure the width and height of each block in inches and in centimeters.

Ex) 

1) 

2) 

3) 

4) 

Answers

Ex. 2 0 1/2 5.1 1.3

1. 3 0 1/2 7.6 1.3

2. 5 0 1/2 12.7 1.3

3. 1 1/2 1 3.8 2.5

4. 4 1 10.2 2.5