





Measure the width and height of each block in inches and in centimeters.

Ex)



1)




2)



3)



4)



Answers

Ex. 1 1 1/2 2.5 3.8

1. _____

2. _____


3. _____

4. _____




Measure the width and height of each block in inches and in centimeters.

Ex)



1)



2)



3)



4)

**Answers**Ex. 1 1 1/2 2.5 3.81. 1 1/2 1 1/2 3.8 3.82. 5 1 12.7 2.53. 5 1/2 0 1/2 14 1.34. 0 1/2 1 1/2 1.3 3.8