




Measure the width and height of each block in inches and in centimeters.

Ex)



1)




2)



3)



4)



Answers

Ex. 4 1/2 1 11.4 2.5

1. _____



2. _____

3. _____

4. _____



Measure the width and height of each block in inches and in centimeters.



Answers

Ex. 4 1/2 1 11.4 2.5

1. 5 1/2 1 1/2 14 3.8

2. 1 0 1/2 2.5 1.3

3. 1 1/2 0 1/2 3.8 1.3

4. 4 1 1/2 10.2 3.8