



Measure the width and height of each block in inches and in centimeters.

Ex)



Answers

Ex. 5 1/2 0 1/2 **14** **1.3**


1. _____

2. _____

3. _____

4. _____

1)




2)



3)



4)





Measure the width and height of each block in inches and in centimeters.

Ex)



Answers

Ex. 5 $\frac{1}{2}$ 0 $\frac{1}{2}$ **14** **1.3**


1. 3 $\frac{1}{2}$ 1 $\frac{1}{2}$ **8.9** **3.8**

2. **4** 0 $\frac{1}{2}$ **10.2** **1.3**

3. **5** **1** 12.7 **2.5**

4. **1** **1** **2.5** **2.5**

1)



2)



3)



4)

