

Measure the width and height of each block in inches and in centimeters.

Ex)



**Answers**

Ex. 3 1/2 0 1/2 8.9 1.3


1. \_\_\_\_\_

2. \_\_\_\_\_

3. \_\_\_\_\_

4. \_\_\_\_\_


1)




2)



3)



4)





Measure the width and height of each block in inches and in centimeters.

Ex)



**Answers**

Ex.  $\underline{3\frac{1}{2}}$   $\underline{0\frac{1}{2}}$  **8.9** **1.3**


1. **1** **1 $\frac{1}{2}$**  **2.5** **3.8**

2. **1 $\frac{1}{2}$**  **1** **3.8** **2.5**

3. **5 $\frac{1}{2}$**  **1 $\frac{1}{2}$**  **14** **3.8**

4. **5** **1** **12.7** **2.5**


1)



2)



3)



4)

