




Measure the width and height of each block in inches and in centimeters.


Ex)



1)



2)



3)



4)



Answers

Ex. 4 1/2 1 1/2 11.4 3.8

1. _____

2. _____


3. _____

4. _____




Measure the width and height of each block in inches and in centimeters.


Ex)



1)



2)



3)



4)



Answers

Ex. 4 1/2 1 1/2 11.4 3.8

1. 5 1 12.7 2.5

2. 1 1 2.5 2.5

3. 1 1/2 0 1/2 3.8 1.3

4. 4 0 1/2 10.2 1.3