



Determine the amount of money shown.

Answers

1. _____



2. _____



3. _____



4. _____



5. _____



6. _____



7. _____



8. _____






9. _____



10. _____



Determine the amount of money shown.

Answers1. \$0.962. \$0.963. \$0.974. \$0.955. \$0.956. \$0.997. \$0.998. \$0.989. \$0.9710. \$0.97