

Solve each problem.

Answers

- 1) At the book fair Adam spent \$6.83 buying books. He gave the cashier a twenty dollar bill. How much change should he get back?



1. _____

2. _____

3. _____

- 2) Robin bought a new board game for \$2.78. She gave the cashier a ten dollar bill. How much change should she get back?



- 3) Rachel spent \$10.55 on a movie ticket. She gave the cashier a twenty dollar bill. How much change should she get back?





Solve each problem.

Answers

- 1) At the book fair Adam spent \$6.83 buying books. He gave the cashier a twenty dollar bill. How much change should he get back?

1. **D**2. **A**3. **A**

- 2) Robin bought a new board game for \$2.78. She gave the cashier a ten dollar bill. How much change should she get back?



- 3) Rachel spent \$10.55 on a movie ticket. She gave the cashier a twenty dollar bill. How much change should she get back?





Solve each problem.

Answers

- 1) Paul spent \$12.91 buying some new toys. He bought them using a twenty dollar bill. How much change should he get back?



1. _____
2. _____
3. _____

- 2) At the book fair Jerry spent \$1.16 buying books. He gave the cashier a ten dollar bill. How much change should he get back?



- 3) Cody bought \$6.97 worth of groceries. He gave the cashier a twenty dollar bill. How much change should he get back?





Solve each problem.

Answers

- 1) Paul spent \$12.91 buying some new toys. He bought them using a twenty dollar bill. How much change should he get back?



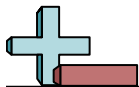
1. **A**
2. **A**
3. **B**

- 2) At the book fair Jerry spent \$1.16 buying books. He gave the cashier a ten dollar bill. How much change should he get back?



- 3) Cody bought \$6.97 worth of groceries. He gave the cashier a twenty dollar bill. How much change should he get back?





Solve each problem.

Answers

- 1) At the fair Faye spent \$7.00 buying fair food. She gave the cashier a twenty dollar bill. How much change should she get back?




1. _____

2. _____

3. _____



- 2) At the book fair Oliver spent \$5.77 buying books. He gave the cashier a ten dollar bill. How much change should he get back?



- 3) Billy spent \$10.74 buying some new toys. He bought them using a twenty dollar bill. How much change should he get back?





Solve each problem.

Answers

- 1) At the fair Faye spent \$7.00 buying fair food. She gave the cashier a twenty dollar bill. How much change should she get back?

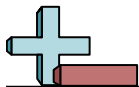
1. **B**2. **C**3. **C**

- 2) At the book fair Oliver spent \$5.77 buying books. He gave the cashier a ten dollar bill. How much change should he get back?



- 3) Billy spent \$10.74 buying some new toys. He bought them using a twenty dollar bill. How much change should he get back?





Solve each problem.

Answers

- 1) Gwen spent \$7.82 on a movie ticket. She gave the cashier a twenty dollar bill. How much change should she get back?



- 2) Victor spent \$4.05 buying some new toys. He bought them using a ten dollar bill. How much change should he get back?



- 3) At the fair Janet spent \$18.24 buying fair food. She gave the cashier a twenty dollar bill. How much change should she get back?



1. _____

2. _____

3. _____



Solve each problem.

Answers

- 1) Gwen spent \$7.82 on a movie ticket. She gave the cashier a twenty dollar bill. How much change should she get back?



- 2) Victor spent \$4.05 buying some new toys. He bought them using a ten dollar bill. How much change should he get back?



- 3) At the fair Janet spent \$18.24 buying fair food. She gave the cashier a twenty dollar bill. How much change should she get back?



1. **D**
2. **A**
3. **B**



Solve each problem.

Answers

- 1) Dave spent \$11.22 buying some new toys. He bought them using a twenty dollar bill. How much change should he get back?



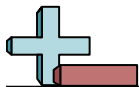
1. _____
2. _____
3. _____

- 2) Sam bought \$7.02 worth of groceries. He gave the cashier a ten dollar bill. How much change should he get back?



- 3) Nancy spent \$13.83 on a movie ticket. She gave the cashier a twenty dollar bill. How much change should she get back?






Solve each problem.

Answers

- 1) Dave spent \$11.22 buying some new toys. He bought them using a twenty dollar bill. How much change should he get back?

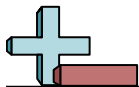
1. **B**2. **B**3. **A**

- 2) Sam bought \$7.02 worth of groceries. He gave the cashier a ten dollar bill. How much change should he get back?



- 3) Nancy spent \$13.83 on a movie ticket. She gave the cashier a twenty dollar bill. How much change should she get back?






Solve each problem.

Answers


- 1) Victor spent \$10.46 buying some new toys. He bought them using a twenty dollar bill. How much change should he get back?



- 2) Olivia bought a new board game for \$7.90. She gave the cashier a ten dollar bill. How much change should she get back?



- 3) At the book fair Oliver spent \$12.53 buying books. He gave the cashier a twenty dollar bill. How much change should he get back?



1. _____

2. _____

3. _____



Solve each problem.


- 1) Victor spent \$10.46 buying some new toys. He bought them using a twenty dollar bill. How much change should he get back?



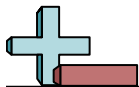
- 2) Olivia bought a new board game for \$7.90. She gave the cashier a ten dollar bill. How much change should she get back?



- 3) At the book fair Oliver spent \$12.53 buying books. He gave the cashier a twenty dollar bill. How much change should he get back?

**Answers**


1. **C**
2. **C**
3. **C**



Solve each problem.

Answers

- 1) At the book fair Henry spent \$4.75 buying books. He gave the cashier a twenty dollar bill. How much change should he get back?



1. _____

2. _____

3. _____

- 2) Lana bought a new board game for \$2.44. She gave the cashier a ten dollar bill. How much change should she get back?



- 3) Bianca spent \$2.41 on a movie ticket. She gave the cashier a twenty dollar bill. How much change should she get back?





Solve each problem.

Answers

- 1) At the book fair Henry spent \$4.75 buying books. He gave the cashier a twenty dollar bill. How much change should he get back?



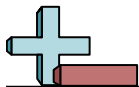
1. **B**
2. **D**
3. **D**

- 2) Lana bought a new board game for \$2.44. She gave the cashier a ten dollar bill. How much change should she get back?



- 3) Bianca spent \$2.41 on a movie ticket. She gave the cashier a twenty dollar bill. How much change should she get back?





Solve each problem.

Answers

- 1) At the fair Janet spent \$5.12 buying fair food. She gave the cashier a twenty dollar bill. How much change should she get back?



1. _____

2. _____

3. _____

- 2) Rachel bought a new board game for \$7.21. She gave the cashier a ten dollar bill. How much change should she get back?



- 3) Oliver spent \$14.61 on candy at the mall. He gave the cashier a twenty dollar bill. How much change should he get back?





Solve each problem.

Answers

- 1) At the fair Janet spent \$5.12 buying fair food. She gave the cashier a twenty dollar bill. How much change should she get back?



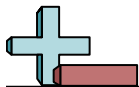
1. **D**
2. **D**
3. **D**

- 2) Rachel bought a new board game for \$7.21. She gave the cashier a ten dollar bill. How much change should she get back?



- 3) Oliver spent \$14.61 on candy at the mall. He gave the cashier a twenty dollar bill. How much change should he get back?






Solve each problem.

Answers

- 1) Bianca bought a new board game for \$2.06. She gave the cashier a twenty dollar bill. How much change should she get back?



1. _____

2. _____

3. _____

- 2) At the book fair Luke spent \$4.57 buying books. He gave the cashier a ten dollar bill. How much change should he get back?



- 3) Katie spent \$7.50 on a movie ticket. She gave the cashier a twenty dollar bill. How much change should she get back?





Solve each problem.

Answers

- 1) Bianca bought a new board game for \$2.06. She gave the cashier a twenty dollar bill. How much change should she get back?

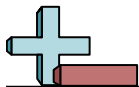
1. **A**2. **A**3. **B**

- 2) At the book fair Luke spent \$4.57 buying books. He gave the cashier a ten dollar bill. How much change should he get back?



- 3) Katie spent \$7.50 on a movie ticket. She gave the cashier a twenty dollar bill. How much change should she get back?





Solve each problem.

Answers

- 1) Tom spent \$16.71 on candy at the mall. He gave the cashier a twenty dollar bill. How much change should he get back?




1. _____

2. _____

3. _____

- 2) Jerry bought \$8.64 worth of groceries. He gave the cashier a ten dollar bill. How much change should he get back?



- 3) Victor spent \$7.33 buying some new toys. He bought them using a twenty dollar bill. How much change should he get back?





Solve each problem.

Answers

- 1) Tom spent \$16.71 on candy at the mall. He gave the cashier a twenty dollar bill. How much change should he get back?



1. **A**
2. **C**
3. **A**

- 2) Jerry bought \$8.64 worth of groceries. He gave the cashier a ten dollar bill. How much change should he get back?



- 3) Victor spent \$7.33 buying some new toys. He bought them using a twenty dollar bill. How much change should he get back?

