

**Determine which choice best describes the coins in the order shown.****Answers**

1)



- A. quarter, nickel, penny, dime
B. nickel, quarter, penny, dime
C. quarter, penny, dime, nickel
D. dime, quarter, penny, nickel

1. _____

2)



- A. nickel, dime, penny, quarter
B. nickel, quarter, dime, penny
C. penny, quarter, dime, nickel
D. quarter, dime, nickel, penny

2. _____

3)



- A. dime, nickel, quarter, penny
B. penny, dime, quarter, nickel
C. penny, dime, nickel, quarter
D. nickel, dime, penny, quarter

3. _____

4)



- A. quarter, dime, penny, nickel
B. nickel, dime, quarter, penny
C. dime, quarter, nickel, penny
D. nickel, quarter, dime, penny

4. _____


5)



- A. nickel, dime, penny, quarter
B. penny, nickel, quarter, dime
C. dime, quarter, nickel, penny
D. penny, quarter, nickel, dime

5. _____

6)



- A. dime, penny, quarter, nickel
B. quarter, dime, penny, nickel
C. nickel, quarter, dime, penny
D. penny, nickel, quarter, dime

6. _____

7)



- A. quarter, penny, dime, nickel
B. nickel, quarter, penny, dime
C. dime, quarter, nickel, penny
D. dime, nickel, penny, quarter

7. _____

8)



- A. dime, nickel, penny, quarter
B. nickel, penny, dime, quarter
C. quarter, dime, nickel, penny
D. dime, nickel, quarter, penny

8. _____




Determine which choice best describes the coins in the order shown.

1)



- A. quarter, nickel, penny, dime
B. nickel, quarter, penny, dime
C. quarter, penny, dime, nickel
D. dime, quarter, penny, nickel

2)



- A. nickel, dime, penny, quarter
B. nickel, quarter, dime, penny
C. penny, quarter, dime, nickel
D. quarter, dime, nickel, penny

3)



- A. dime, nickel, quarter, penny
B. penny, dime, quarter, nickel
C. penny, dime, nickel, quarter
D. nickel, dime, penny, quarter

4)




- A. quarter, dime, penny, nickel
B. nickel, dime, quarter, penny
C. dime, quarter, nickel, penny
D. nickel, quarter, dime, penny

5)



- A. nickel, dime, penny, quarter
B. penny, nickel, quarter, dime
C. dime, quarter, nickel, penny
D. penny, quarter, nickel, dime

6)



- A. dime, penny, quarter, nickel
B. quarter, dime, penny, nickel
C. nickel, quarter, dime, penny
D. penny, nickel, quarter, dime

7)



- A. quarter, penny, dime, nickel
B. nickel, quarter, penny, dime
C. dime, quarter, nickel, penny
D. dime, nickel, penny, quarter

8)



- A. dime, nickel, penny, quarter
B. nickel, penny, dime, quarter
C. quarter, dime, nickel, penny
D. dime, nickel, quarter, penny

Answers1. **C**2. **A**3. **A**4. **B**5. **B**6. **B**7. **D**8. **B**