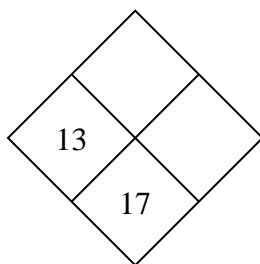


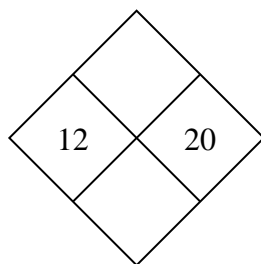


Complete the diamond.

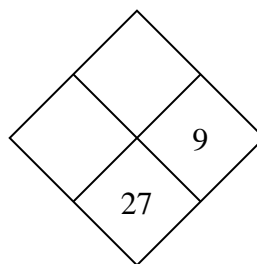
1)



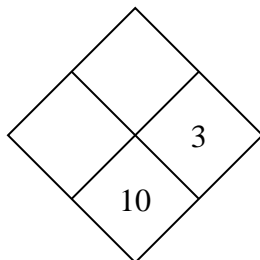
2)



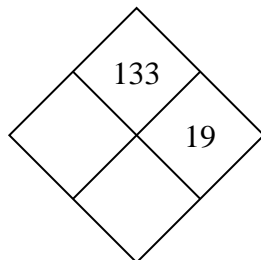
3)



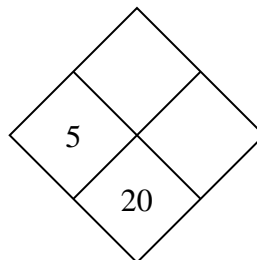
4)



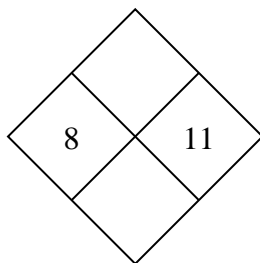
5)



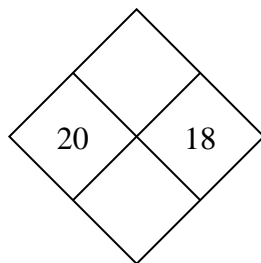
6)



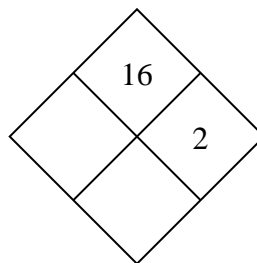
7)



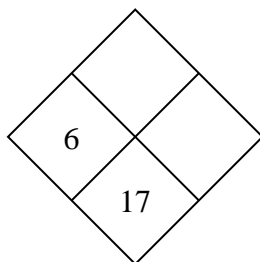
8)



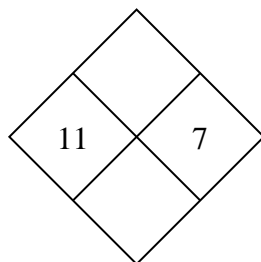
9)



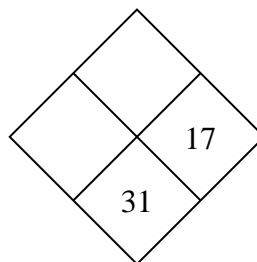
10)



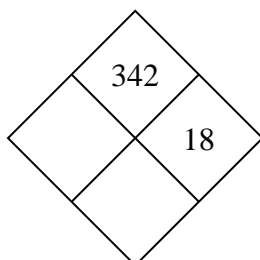
11)



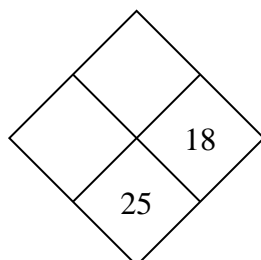
12)



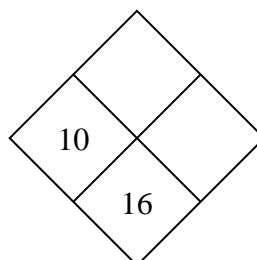
13)



14)



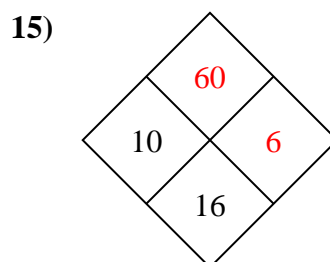
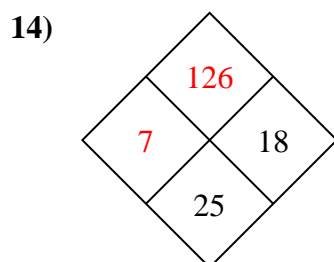
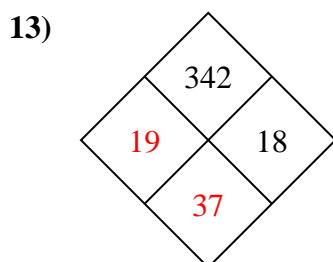
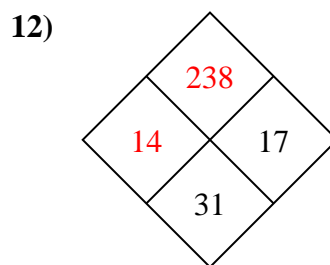
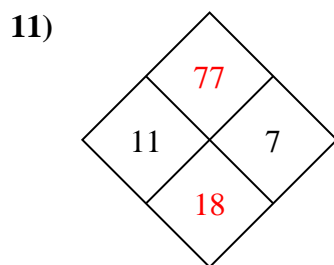
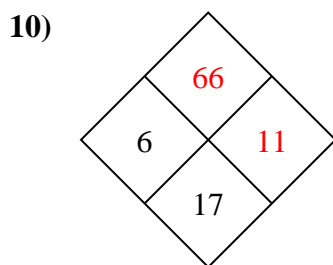
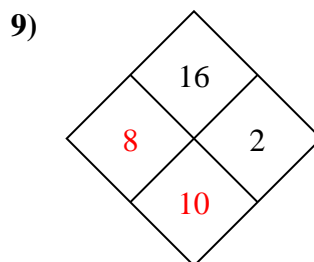
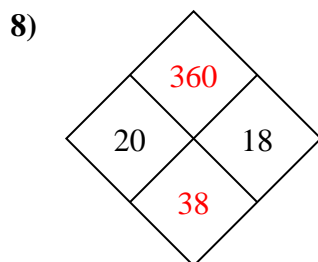
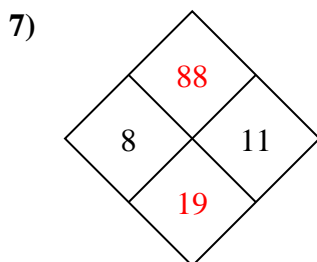
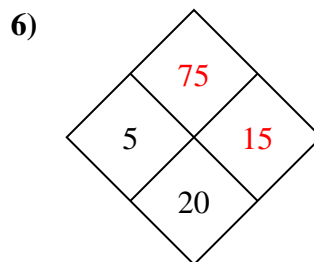
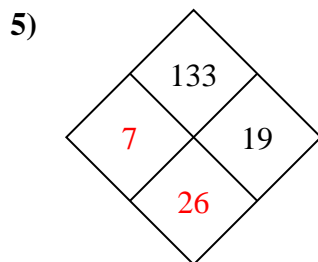
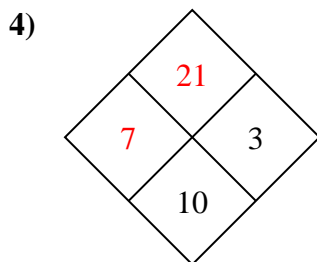
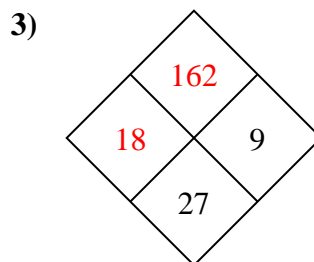
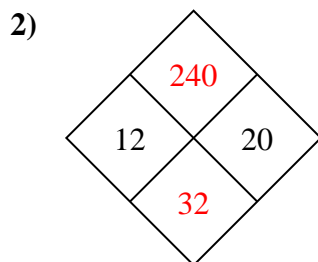
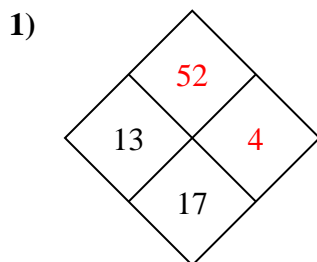
15)

**Answers**

1. \_\_\_\_\_
2. \_\_\_\_\_
3. \_\_\_\_\_
4. \_\_\_\_\_
5. \_\_\_\_\_
6. \_\_\_\_\_
7. \_\_\_\_\_
8. \_\_\_\_\_
9. \_\_\_\_\_
10. \_\_\_\_\_
11. \_\_\_\_\_
12. \_\_\_\_\_
13. \_\_\_\_\_
14. \_\_\_\_\_
15. \_\_\_\_\_



Complete the diamond.

**Answers**

1. **52 , 4**
2. **240 , 32**
3. **162 , 18**
4. **21 , 7**
5. **7 , 26**
6. **75 , 15**
7. **88 , 19**
8. **360 , 38**
9. **8 , 10**
10. **66 , 11**
11. **77 , 18**
12. **238 , 14**
13. **19 , 37**
14. **126 , 7**
15. **60 , 6**