




Solve each problem.


Answers

- 1) Which letter best shows -22?




1. _____

- 2) Which letter best shows -96?



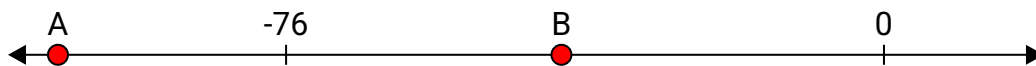
2. _____

- 3) Which letter best shows -114?




3. _____

- 4) Which letter best shows -105?




4. _____

- 5) Which letter best shows -36?



5. _____

- 6) Which letter best shows -26?



6. _____

- 7) Which letter best shows -28?



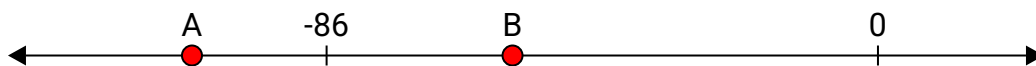
7. _____

- 8) Which letter best shows -115?




8. _____

- 9) Which letter best shows -57?



9. _____

- 10) Which letter best shows -15?



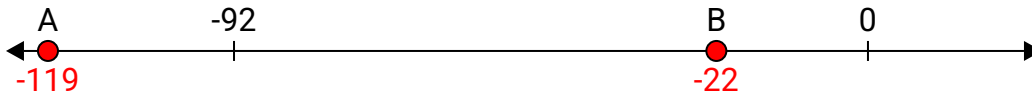
10. _____



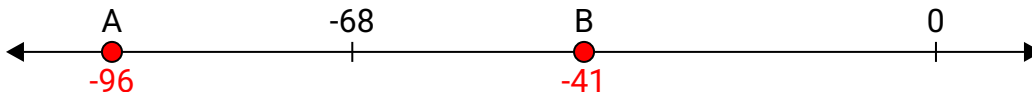
Solve each problem.

Answers

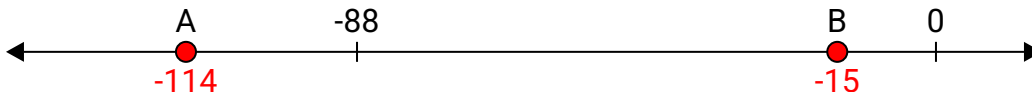
- 1) Which letter best shows -22?

1. **B**

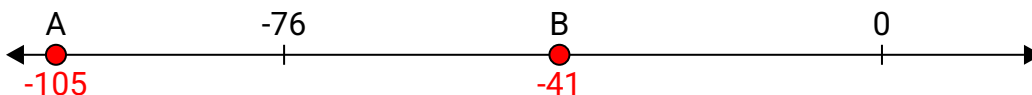
- 2) Which letter best shows -96?

2. **A**


- 3) Which letter best shows -114?

3. **A**


- 4) Which letter best shows -105?

4. **A**

- 5) Which letter best shows -36?

5. **B**


- 6) Which letter best shows -26?

6. **B**

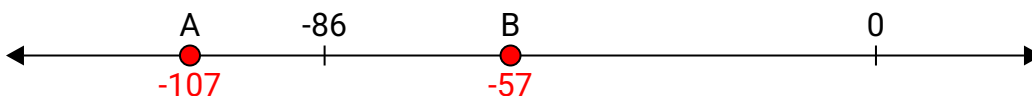
- 7) Which letter best shows -28?

7. **B**


- 8) Which letter best shows -115?

8. **A**

- 9) Which letter best shows -57?

9. **B**

- 10) Which letter best shows -15?

10. **B**