




Solve each problem.


Answers

- 1) Which letter best shows -27?



1. _____


- 2) Which letter best shows -16?



2. _____

3. _____


- 3) Which letter best shows -18?



4. _____

5. _____


- 4) Which letter best shows -15?



6. _____

7. _____

- 5) Which letter best shows -91?



8. _____

9. _____

- 6) Which letter best shows -75?




10. _____

- 7) Which letter best shows -81?




- 8) Which letter best shows -10?



- 9) Which letter best shows -59?



- 10) Which letter best shows -87?

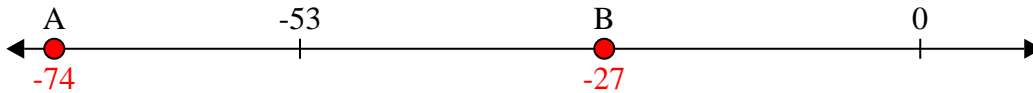




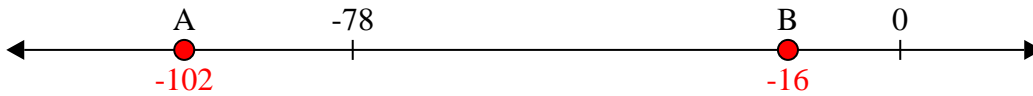
Solve each problem.

Answers

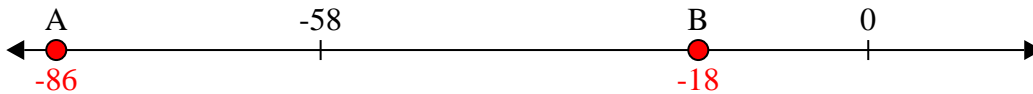
- 1) Which letter best shows -27?

1. **B**

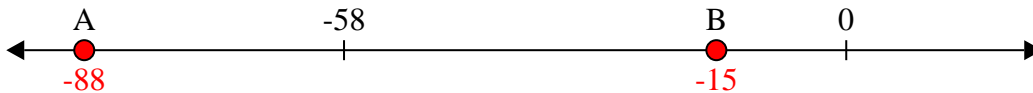
- 2) Which letter best shows -16?

2. **B**

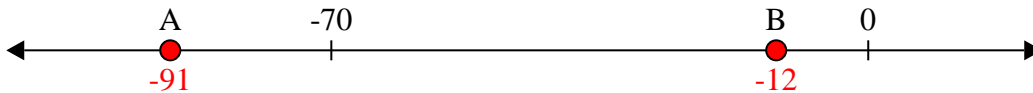
- 3) Which letter best shows -18?

3. **B**

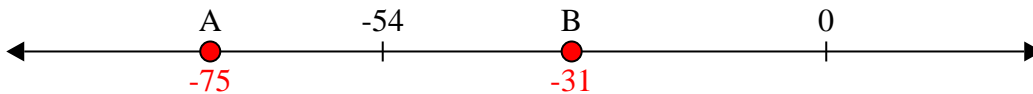
- 4) Which letter best shows -15?

4. **B**

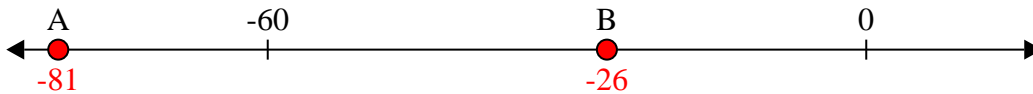
- 5) Which letter best shows -91?

5. **A**


- 6) Which letter best shows -75?

6. **A**

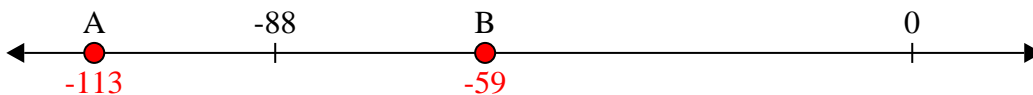
- 7) Which letter best shows -81?

7. **A**

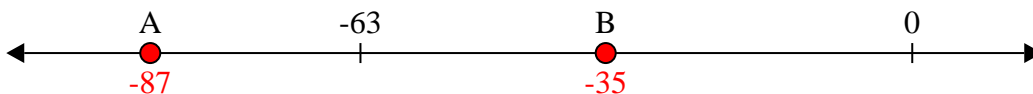
- 8) Which letter best shows -10?

8. **B**

- 9) Which letter best shows -59?

9. **B**

- 10) Which letter best shows -87?

10. **A**