




Solve each problem.


Answers

- 1) Which letter best shows -28?



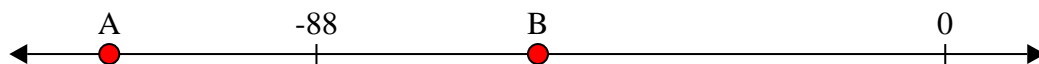
1. _____

- 2) Which letter best shows -26?



2. _____

- 3) Which letter best shows -117?




3. _____

- 4) Which letter best shows -97?



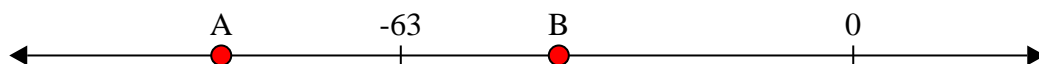
4. _____

- 5) Which letter best shows -113?




5. _____

- 6) Which letter best shows -88?




6. _____

- 7) Which letter best shows -22?




7. _____

- 8) Which letter best shows -25?




8. _____

- 9) Which letter best shows -82?



9. _____

- 10) Which letter best shows -120?




10. _____



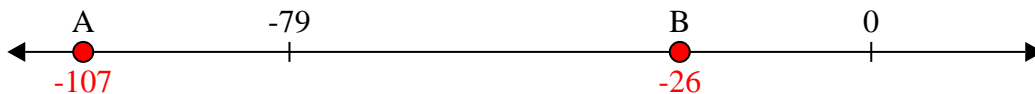
Solve each problem.

Answers

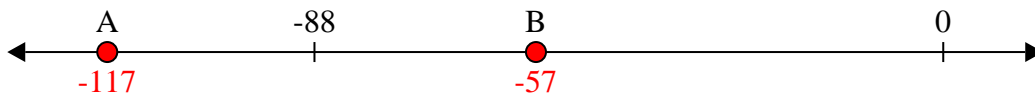
- 1) Which letter best shows -28?

1. **B**

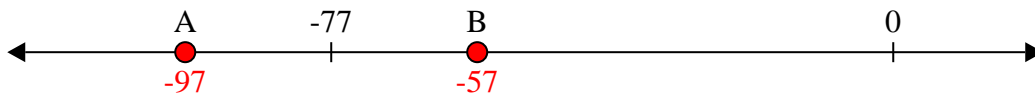
- 2) Which letter best shows -26?

2. **B**

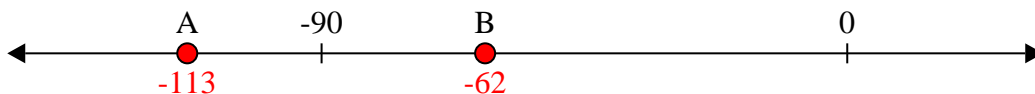
- 3) Which letter best shows -117?

3. **A**

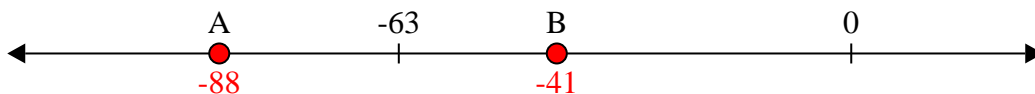
- 4) Which letter best shows -97?

4. **A**


- 5) Which letter best shows -113?

5. **A**


- 6) Which letter best shows -88?

6. **A**


- 7) Which letter best shows -22?

7. **B**

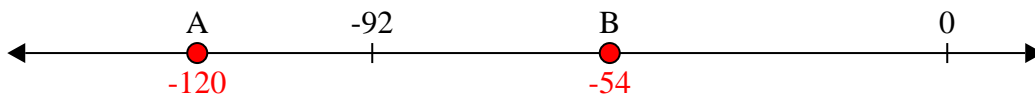
- 8) Which letter best shows -25?

8. **B**

- 9) Which letter best shows -82?

9. **A**

- 10) Which letter best shows -120?

10. **A**