




Solve each problem.

Answers

- 1) Which letter best shows -11?



1. _____

- 2) Which letter best shows -38?



2. _____

3. _____

- 3) Which letter best shows -78?



4. _____

5. _____


- 4) Which letter best shows -28?



6. _____

7. _____

- 5) Which letter best shows -109?



8. _____


9. _____

- 6) Which letter best shows -68?




10. _____

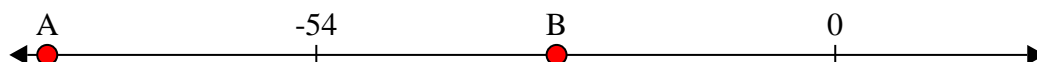
- 7) Which letter best shows -10?




- 8) Which letter best shows -20?



- 9) Which letter best shows -82?




- 10) Which letter best shows -79?



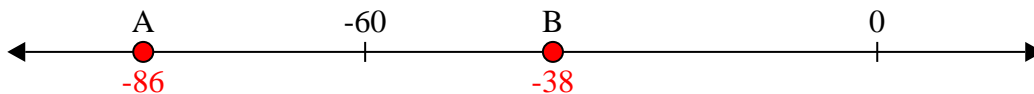


Solve each problem.

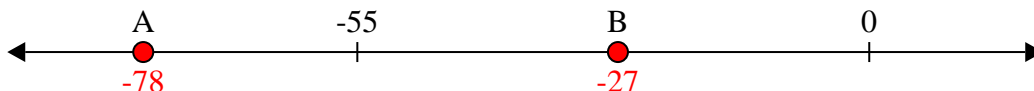
- 1) Which letter best shows -11?



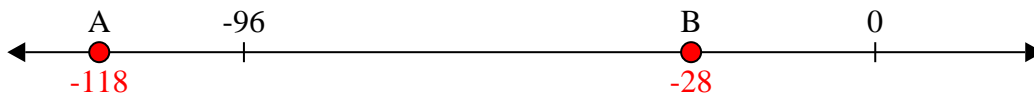
- 2) Which letter best shows -38?




- 3) Which letter best shows -78?



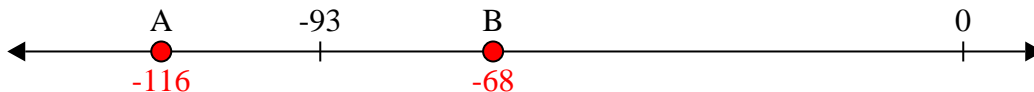
- 4) Which letter best shows -28?




- 5) Which letter best shows -109?



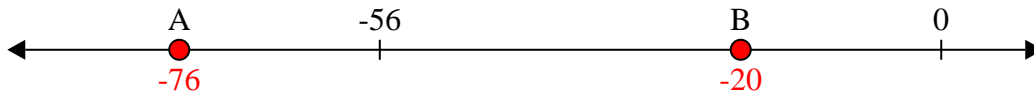
- 6) Which letter best shows -68?



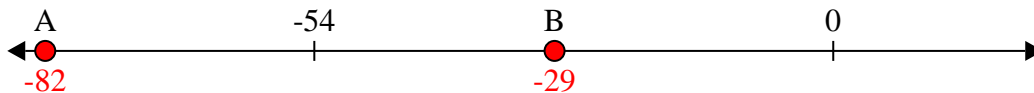
- 7) Which letter best shows -10?



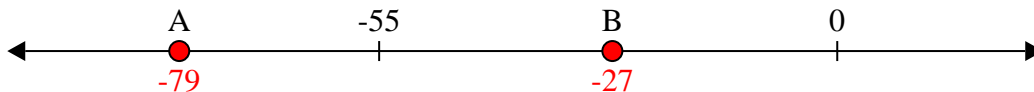
- 8) Which letter best shows -20?



- 9) Which letter best shows -82?



- 10) Which letter best shows -79?

**Answers**1. **B**2. **B**3. **A**4. **B**5. **A**6. **B**7. **B**8. **B**9. **A**10. **A**