




Solve each problem.


Answers

- 1) Which letter best shows -128?




1. _____

- 2) Which letter best shows -114?



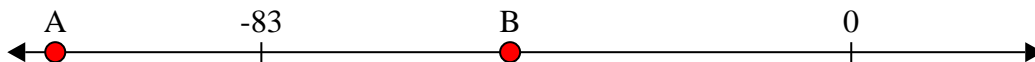
2. _____

- 3) Which letter best shows -76?




3. _____

- 4) Which letter best shows -48?




4. _____

- 5) Which letter best shows -47?



5. _____

- 6) Which letter best shows -115?



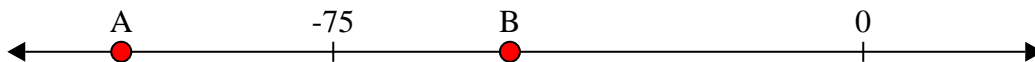
6. _____

- 7) Which letter best shows -115?




7. _____

- 8) Which letter best shows -105?




8. _____

- 9) Which letter best shows -10?



9. _____

- 10) Which letter best shows -82?



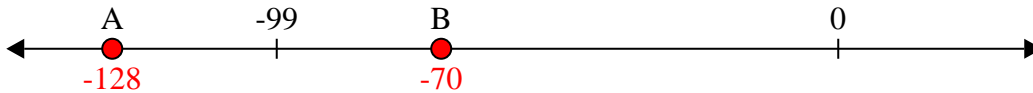
10. _____



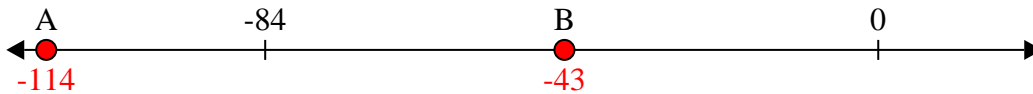
Solve each problem.

Answers

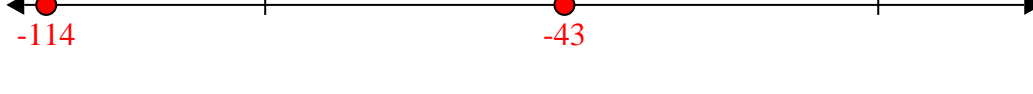
- 1) Which letter best shows -128?

1. **A**

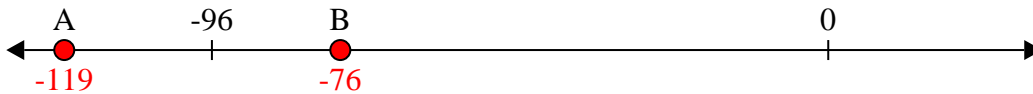
- 2) Which letter best shows -114?

2. **A**

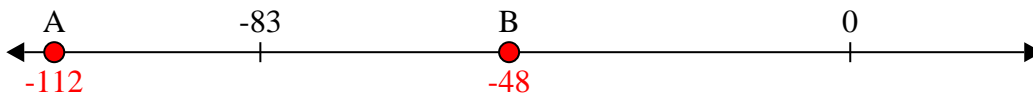
- 3) Which letter best shows -76?

3. **B**

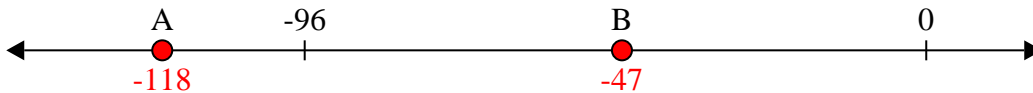
- 4) Which letter best shows -48?

4. **B**


- 5) Which letter best shows -47?

5. **B**


- 6) Which letter best shows -115?

6. **A**

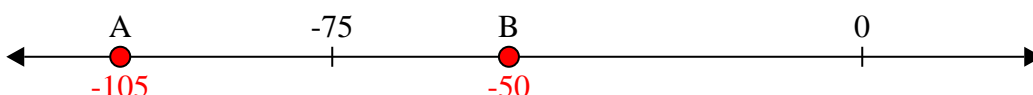
- 7) Which letter best shows -115?

7. **A**


- 8) Which letter best shows -105?

8. **A**

- 9) Which letter best shows -105?

9. **B**

- 10) Which letter best shows -10?

10. **A**

- 10) Which letter best shows -82?

