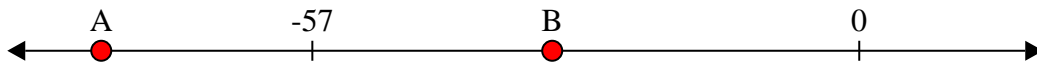




Solve each problem.


Answers

- 1) Which letter best shows -32?




1. _____

- 2) Which letter best shows -114?




2. _____

- 3) Which letter best shows -117?




3. _____

- 4) Which letter best shows -111?




4. _____

- 5) Which letter best shows -33?



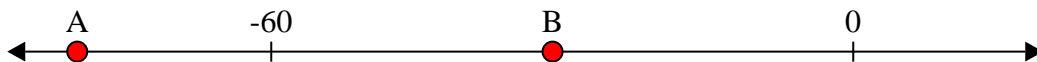
5. _____

- 6) Which letter best shows -29?




6. _____

- 7) Which letter best shows -80?



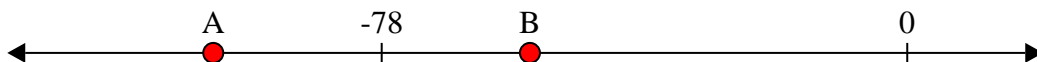
7. _____

- 8) Which letter best shows -86?




8. _____

- 9) Which letter best shows -56?



9. _____

- 10) Which letter best shows -24?



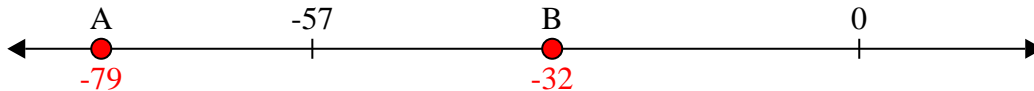
10. _____



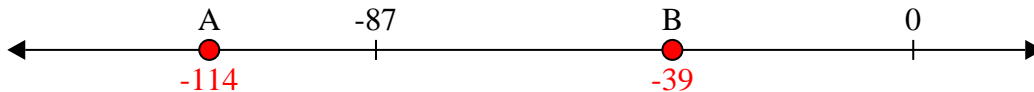
Solve each problem.

Answers

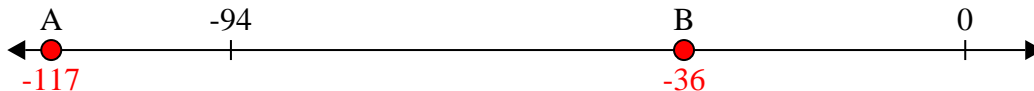
- 1) Which letter best shows -32?

1. **B**

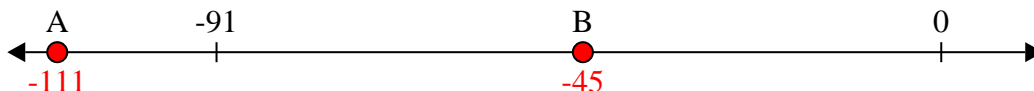
- 2) Which letter best shows -114?

2. **A**

- 3) Which letter best shows -117?

3. **A**

- 4) Which letter best shows -111?

4. **A**

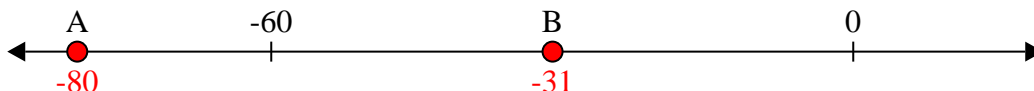
- 5) Which letter best shows -33?

5. **B**


- 6) Which letter best shows -29?

6. **B**

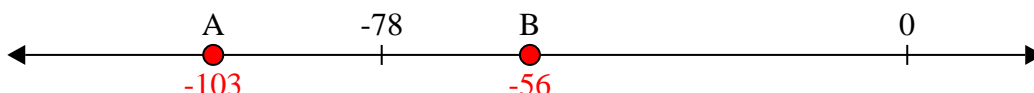
- 7) Which letter best shows -80?

7. **A**

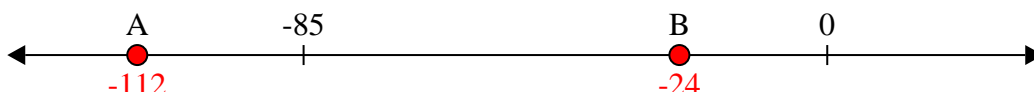
- 8) Which letter best shows -86?

8. **A**

- 9) Which letter best shows -56?

9. **B**

- 10) Which letter best shows -24?

10. **B**