




Solve each problem.


Answers

- 1) Which letter best shows -29?




1. _____

- 2) Which letter best shows -120?




2. _____

- 3) Which letter best shows -118?




3. _____

- 4) Which letter best shows -14?




4. _____

- 5) Which letter best shows -109?



5. _____

- 6) Which letter best shows -28?




6. _____

- 7) Which letter best shows -21?




7. _____

- 8) Which letter best shows -14?




8. _____

- 9) Which letter best shows -13?



9. _____

- 10) Which letter best shows -114?



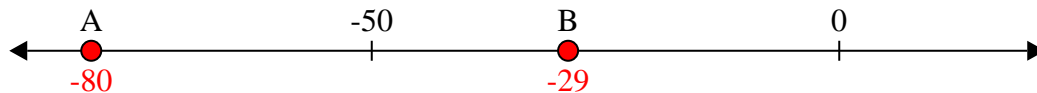
10. _____



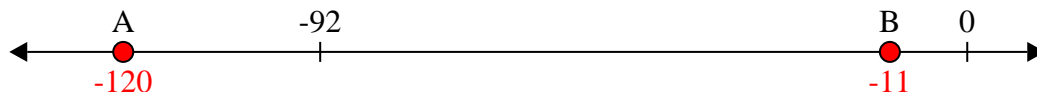
Solve each problem.

Answers

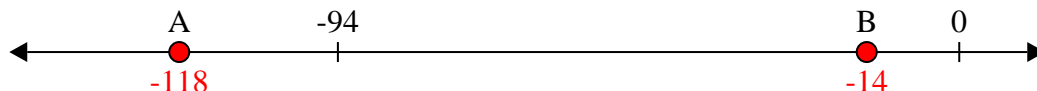
- 1) Which letter best shows -29?

1. **B**

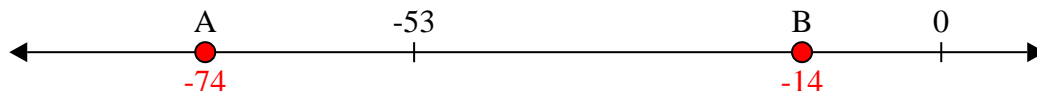
- 2) Which letter best shows -120?

2. **A**

- 3) Which letter best shows -118?

3. **A**


- 4) Which letter best shows -14?

4. **B**


- 5) Which letter best shows -109?

5. **A**

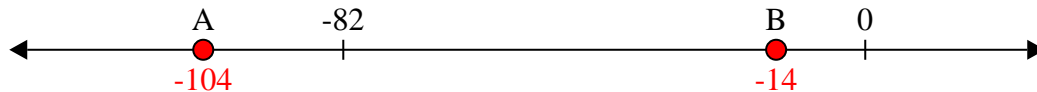
- 6) Which letter best shows -28?

6. **B**


- 7) Which letter best shows -21?

7. **B**

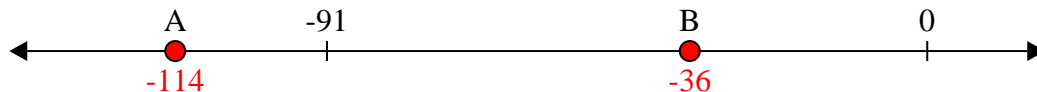
- 8) Which letter best shows -14?

8. **B**

- 9) Which letter best shows -13?

9. **B**

- 10) Which letter best shows -114?

10. **A**