




Solve each problem.


Answers

- 1) Which letter best shows -27?




1. _____

- 2) Which letter best shows -16?




2. _____

- 3) Which letter best shows -18?




3. _____

- 4) Which letter best shows -15?




4. _____

- 5) Which letter best shows -91?



5. _____

- 6) Which letter best shows -75?




6. _____

- 7) Which letter best shows -81?



7. _____

- 8) Which letter best shows -10?




8. _____

- 9) Which letter best shows -59?



9. _____

- 10) Which letter best shows -87?



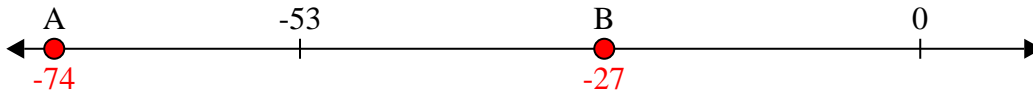
10. _____



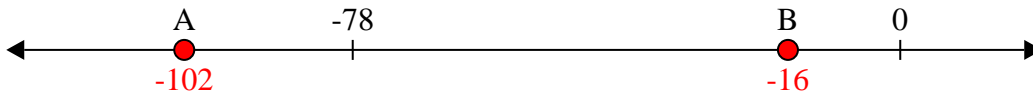
Solve each problem.

Answers

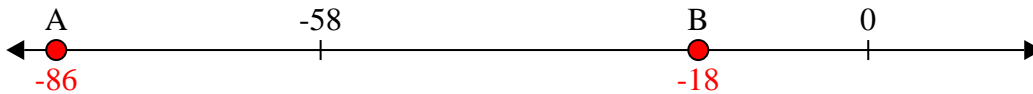
- 1) Which letter best shows -27?

1. **B**

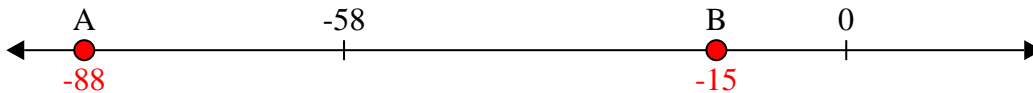
- 2) Which letter best shows -16?

2. **B**

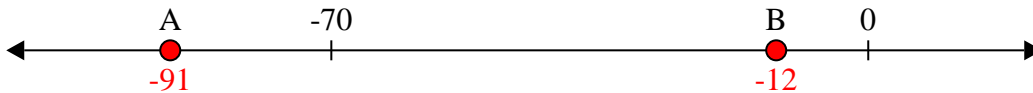
- 3) Which letter best shows -18?

3. **B**

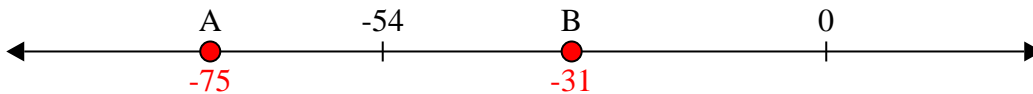
- 4) Which letter best shows -15?

4. **B**

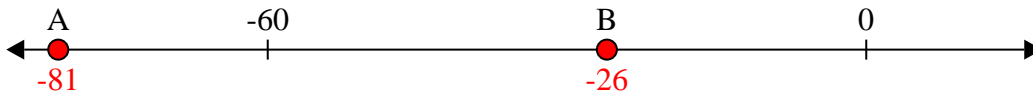
- 5) Which letter best shows -91?

5. **A**


- 6) Which letter best shows -75?

6. **A**

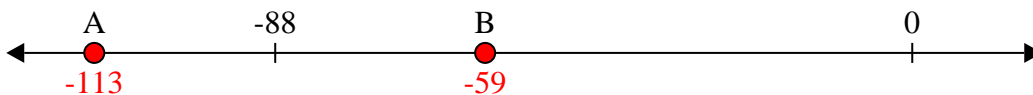
- 7) Which letter best shows -81?

7. **A**

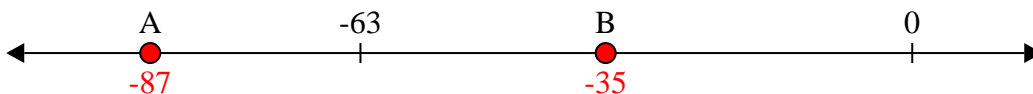
- 8) Which letter best shows -10?

8. **B**

- 9) Which letter best shows -59?

9. **B**

- 10) Which letter best shows -87?


10. **A**



Solve each problem.

Answers

- 1) Which letter best shows -28?



1. _____

- 2) Which letter best shows -26?



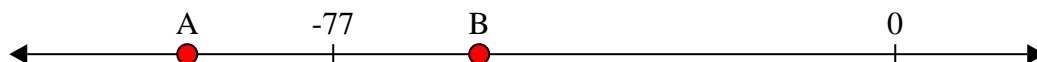
2. _____

- 3) Which letter best shows -117?



3. _____

- 4) Which letter best shows -97?



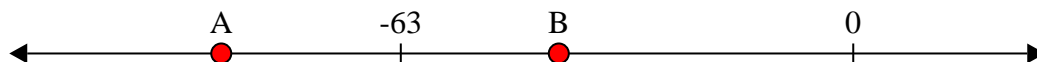
4. _____

- 5) Which letter best shows -113?




5. _____

- 6) Which letter best shows -88?




6. _____

- 7) Which letter best shows -22?




7. _____

- 8) Which letter best shows -25?




8. _____

- 9) Which letter best shows -82?



9. _____

- 10) Which letter best shows -120?




10. _____



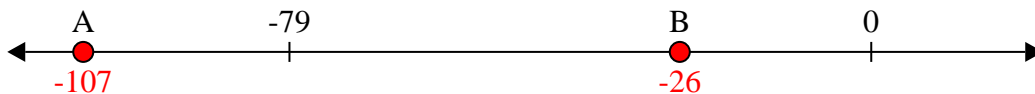
Solve each problem.

Answers

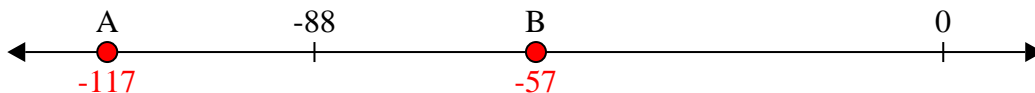
- 1) Which letter best shows -28?

1. **B**

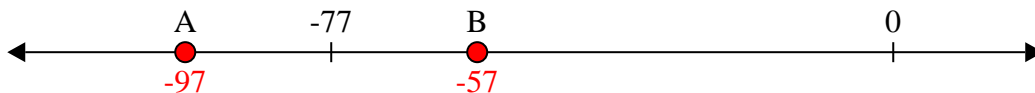
- 2) Which letter best shows -26?

2. **B**

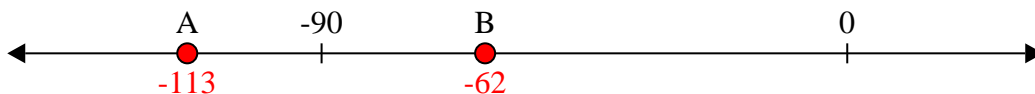
- 3) Which letter best shows -117?

3. **A**

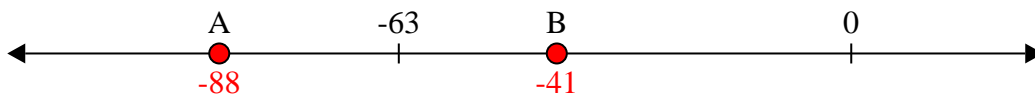
- 4) Which letter best shows -97?

4. **A**


- 5) Which letter best shows -113?

5. **A**


- 6) Which letter best shows -88?

6. **A**


- 7) Which letter best shows -22?

7. **B**

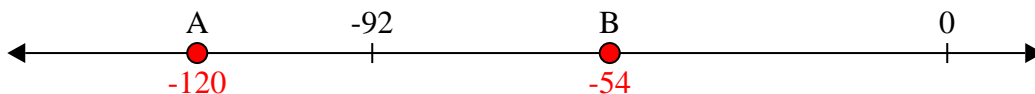
- 8) Which letter best shows -25?

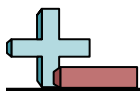
8. **B**

- 9) Which letter best shows -82?

9. **A**

- 10) Which letter best shows -120?


10. **A**



Solve each problem.


Answers

- 1) Which letter best shows -37?



1. _____

- 2) Which letter best shows -113?



2. _____

3. _____


- 3) Which letter best shows -97?



4. _____

5. _____


- 4) Which letter best shows -80?



6. _____

7. _____


- 5) Which letter best shows -40?



8. _____

9. _____

- 6) Which letter best shows -101?




10. _____


- 7) Which letter best shows -22?




- 8) Which letter best shows -105?



- 9) Which letter best shows -115?



- 10) Which letter best shows -97?

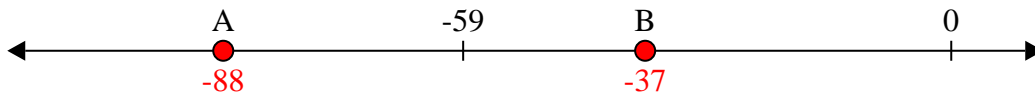




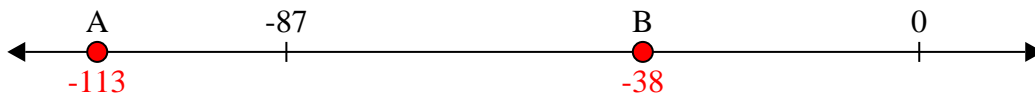
Solve each problem.

Answers

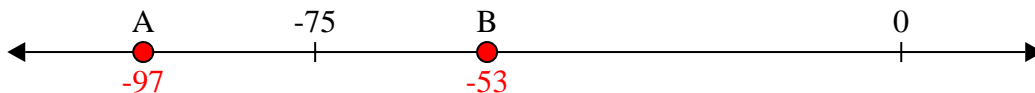
- 1) Which letter best shows -37?

1. **B**

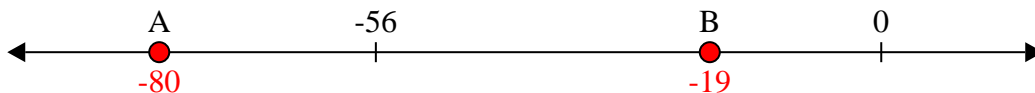
- 2) Which letter best shows -113?

2. **A**


- 3) Which letter best shows -97?

3. **A**


- 4) Which letter best shows -80?

4. **A**


- 5) Which letter best shows -40?

5. **B**


- 6) Which letter best shows -101?

6. **A**


- 7) Which letter best shows -22?

7. **B**

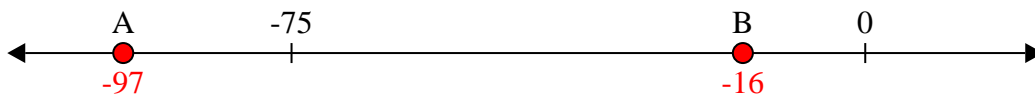
- 8) Which letter best shows -105?

8. **A**

- 9) Which letter best shows -115?

9. **A**

- 10) Which letter best shows -97?


10. **A**



Solve each problem.

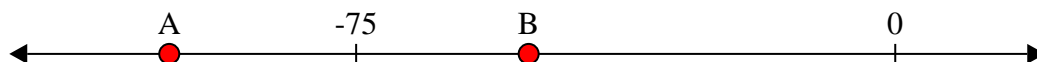
Answers

- 1) Which letter best shows -24?



1. _____

- 2) Which letter best shows -101?



2. _____

3. _____


- 3) Which letter best shows -83?



4. _____

5. _____

- 4) Which letter best shows -95?



6. _____

7. _____


- 5) Which letter best shows -86?



8. _____

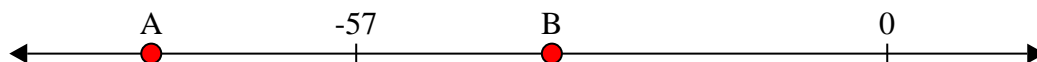
9. _____

- 6) Which letter best shows -112?




10. _____


- 7) Which letter best shows -79?



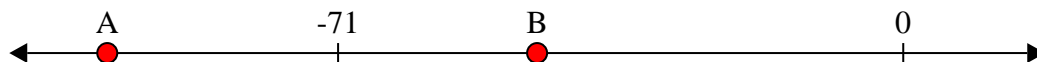
- 8) Which letter best shows -10?



- 9) Which letter best shows -27?



- 10) Which letter best shows -100?

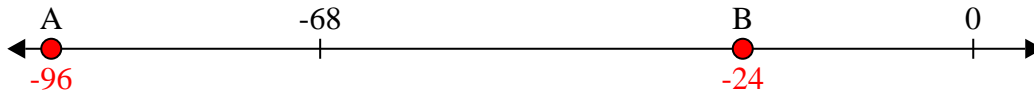




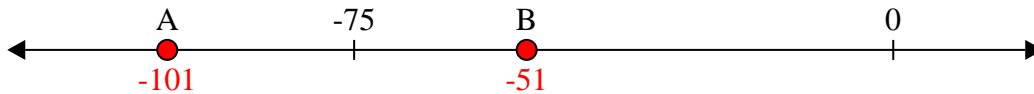
Solve each problem.

Answers

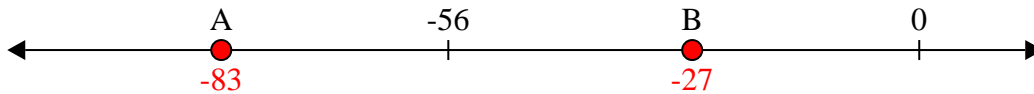
- 1) Which letter best shows -24?

1. **B**

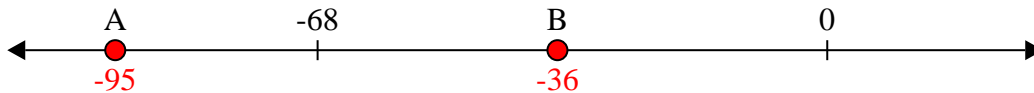
- 2) Which letter best shows -101?

2. **A**

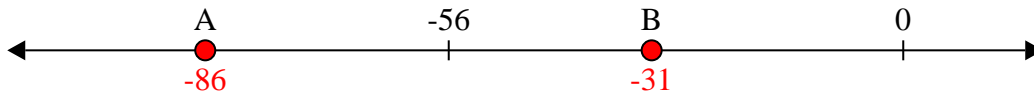
- 3) Which letter best shows -83?

3. **A**


- 4) Which letter best shows -95?

4. **A**

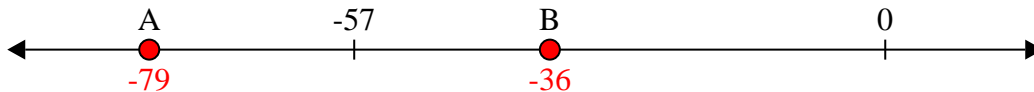
- 5) Which letter best shows -86?

5. **A**


- 6) Which letter best shows -112?

6. **A**


- 7) Which letter best shows -79?

7. **A**

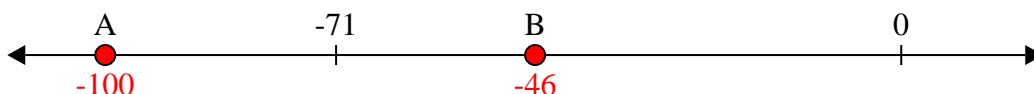
- 8) Which letter best shows -10?

8. **B**

- 9) Which letter best shows -27?

9. **B**

- 10) Which letter best shows -100?


10. **A**



Solve each problem.

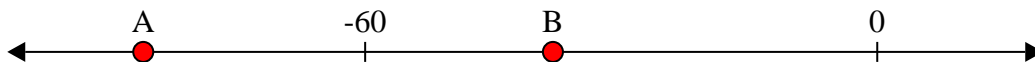
Answers

- 1) Which letter best shows -11?



1. _____


- 2) Which letter best shows -38?



2. _____

3. _____


- 3) Which letter best shows -78?



4. _____

5. _____


- 4) Which letter best shows -28?



6. _____

7. _____

- 5) Which letter best shows -109?



8. _____

9. _____

- 6) Which letter best shows -68?




10. _____

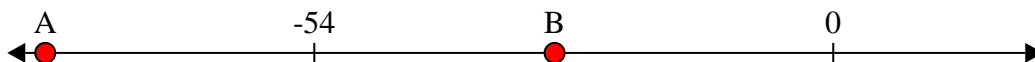
- 7) Which letter best shows -10?




- 8) Which letter best shows -20?



- 9) Which letter best shows -82?



- 10) Which letter best shows -79?

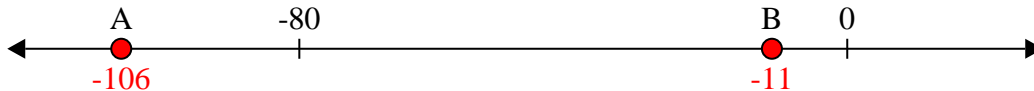




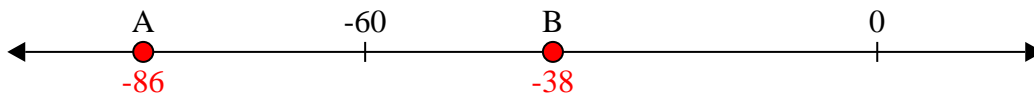
Solve each problem.

Answers

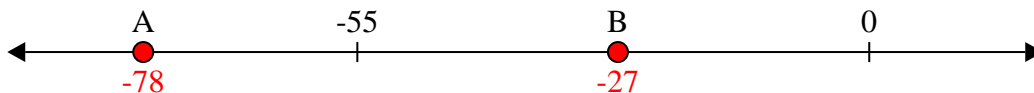
- 1) Which letter best shows -11?

1. **B**

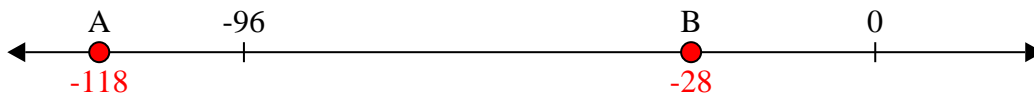
- 2) Which letter best shows -38?

2. **B**


- 3) Which letter best shows -78?

3. **A**

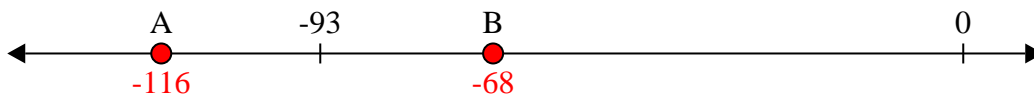
- 4) Which letter best shows -28?

4. **B**


- 5) Which letter best shows -109?

5. **A**


- 6) Which letter best shows -68?

6. **B**

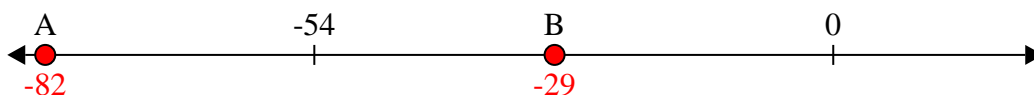
- 7) Which letter best shows -10?

7. **B**


- 8) Which letter best shows -20?

8. **B**

- 9) Which letter best shows -82?

9. **A**

- 10) Which letter best shows -79?


10. **A**



Solve each problem.


Answers

- 1) Which letter best shows -98?



1. _____


- 2) Which letter best shows -39?



2. _____

3. _____


- 3) Which letter best shows -20?



4. _____

5. _____

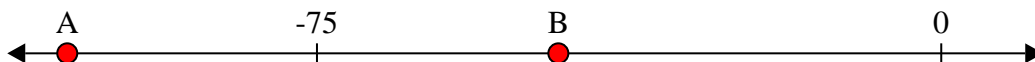
- 4) Which letter best shows -11?



6. _____

7. _____


- 5) Which letter best shows -105?



8. _____

9. _____

- 6) Which letter best shows -106?




10. _____


- 7) Which letter best shows -12?




- 8) Which letter best shows -111?



- 9) Which letter best shows -12?



- 10) Which letter best shows -28?

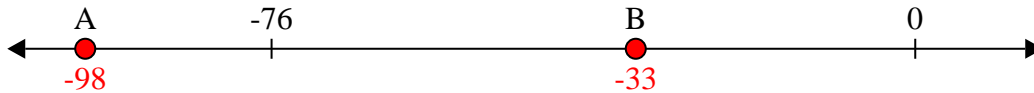




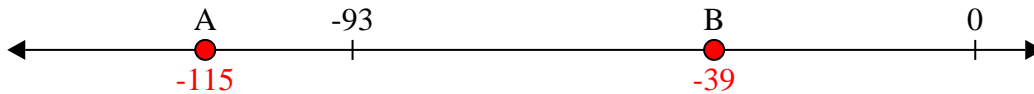
Solve each problem.

Answers

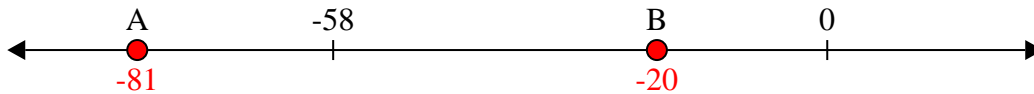
- 1) Which letter best shows -98?

1. **A**

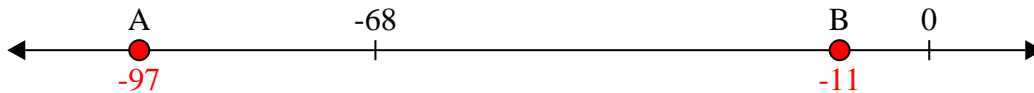
- 2) Which letter best shows -39?

2. **B**

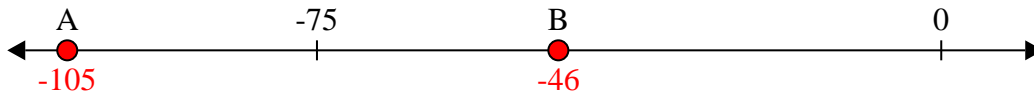
- 3) Which letter best shows -20?

3. **B**

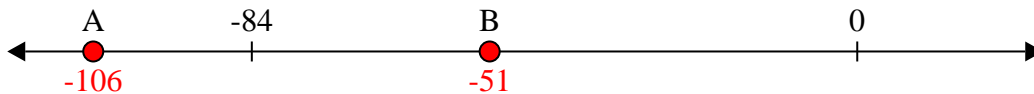
- 4) Which letter best shows -11?

4. **B**

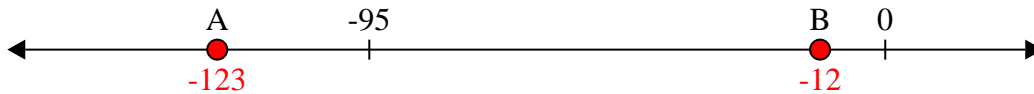
- 5) Which letter best shows -105?

5. **A**


- 6) Which letter best shows -106?

6. **A**


- 7) Which letter best shows -12?

7. **B**

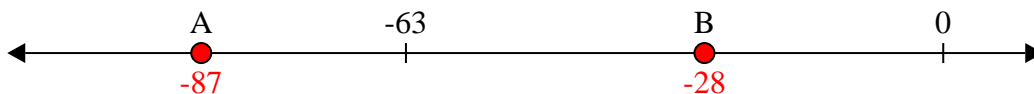
- 8) Which letter best shows -111?

8. **A**

- 9) Which letter best shows -12?

9. **B**

- 10) Which letter best shows -28?


10. **B**



Solve each problem.


Answers

- 1) Which letter best shows -128?




1. _____

- 2) Which letter best shows -114?



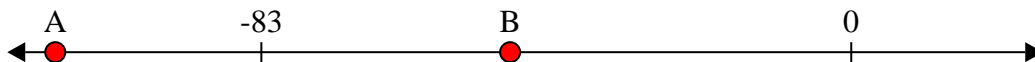
2. _____

- 3) Which letter best shows -76?




3. _____

- 4) Which letter best shows -48?




4. _____

- 5) Which letter best shows -47?



5. _____

- 6) Which letter best shows -115?



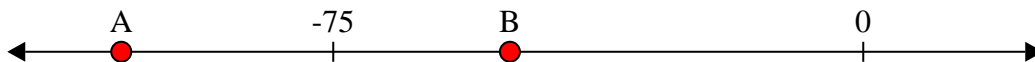
6. _____

- 7) Which letter best shows -115?




7. _____

- 8) Which letter best shows -105?




8. _____

- 9) Which letter best shows -10?



9. _____

- 10) Which letter best shows -82?



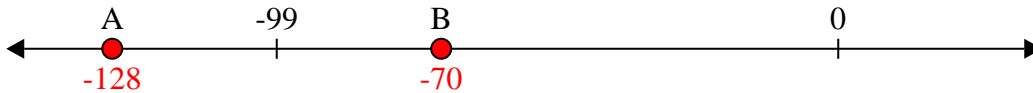
10. _____



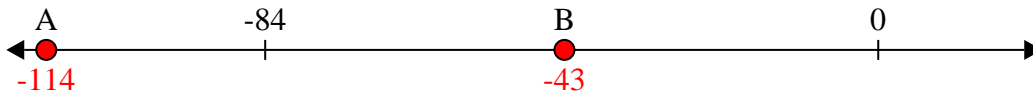
Solve each problem.

Answers

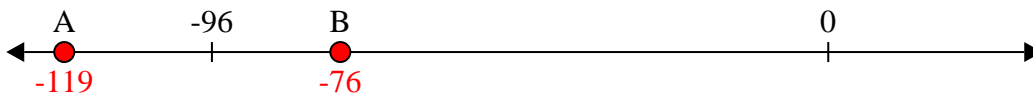
- 1) Which letter best shows -128?

1. **A**

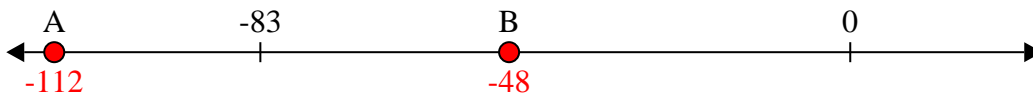
- 2) Which letter best shows -114?

2. **A**


- 3) Which letter best shows -76?

3. **B**


- 4) Which letter best shows -48?

4. **B**


- 5) Which letter best shows -47?

5. **B**

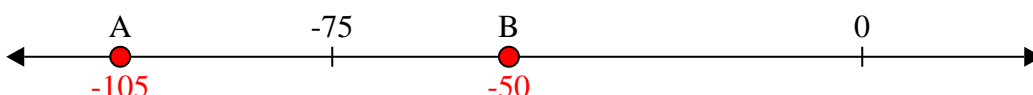
- 6) Which letter best shows -115?

6. **A**


- 7) Which letter best shows -115?

7. **A**


- 8) Which letter best shows -105?

8. **A**

- 9) Which letter best shows -10?

9. **B**

- 10) Which letter best shows -82?

10. **A**



Solve each problem.


Answers

- 1) Which letter best shows -32?




1. _____

- 2) Which letter best shows -114?




2. _____

- 3) Which letter best shows -117?




3. _____

- 4) Which letter best shows -111?




4. _____

- 5) Which letter best shows -33?



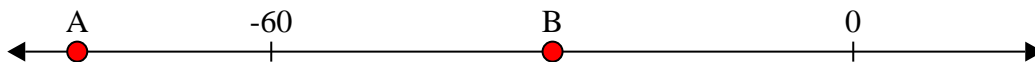
5. _____

- 6) Which letter best shows -29?




6. _____

- 7) Which letter best shows -80?



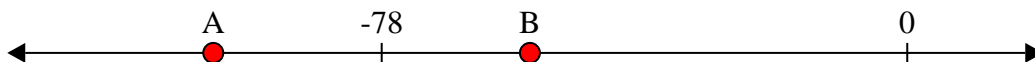
7. _____

- 8) Which letter best shows -86?




8. _____

- 9) Which letter best shows -56?



9. _____

- 10) Which letter best shows -24?



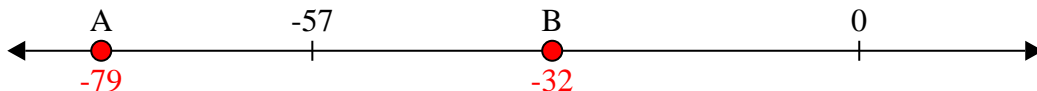
10. _____



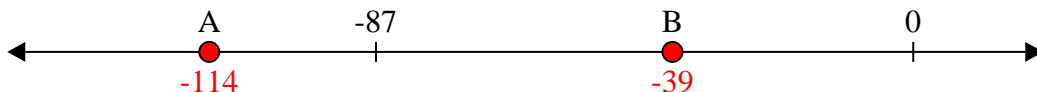
Solve each problem.

Answers

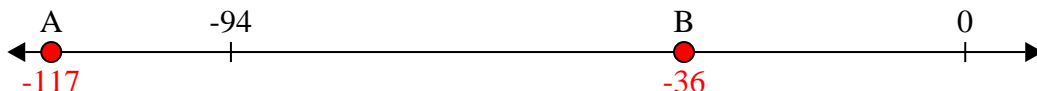
- 1) Which letter best shows -32?

1. **B**

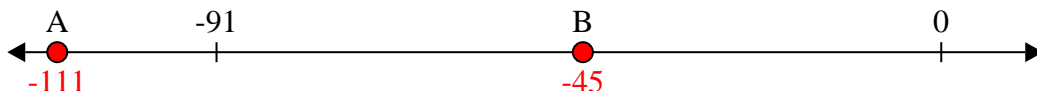
- 2) Which letter best shows -114?

2. **A**

- 3) Which letter best shows -117?

3. **A**


- 4) Which letter best shows -111?

4. **A**

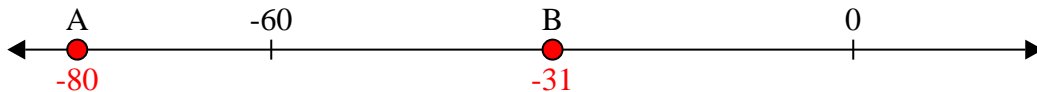
- 5) Which letter best shows -33?

5. **B**

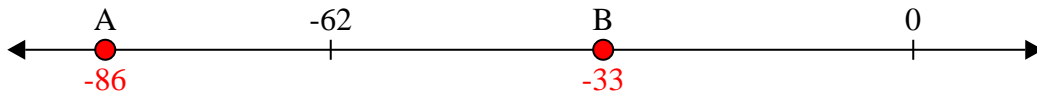
- 6) Which letter best shows -29?

6. **B**

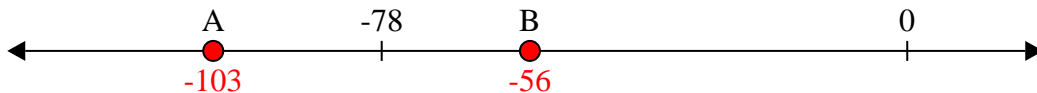
- 7) Which letter best shows -80?

7. **A**

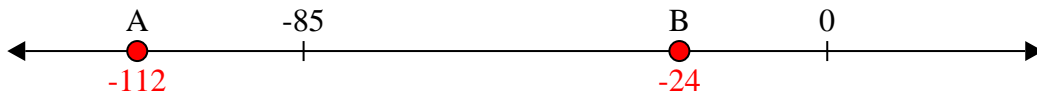
- 8) Which letter best shows -86?

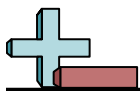
8. **A**

- 9) Which letter best shows -56?

9. **B**

- 10) Which letter best shows -24?


10. **B**



Solve each problem.


Answers

- 1) Which letter best shows -29?




1. _____

- 2) Which letter best shows -120?




2. _____

- 3) Which letter best shows -118?




3. _____

- 4) Which letter best shows -14?




4. _____

- 5) Which letter best shows -109?



5. _____

- 6) Which letter best shows -28?




6. _____

- 7) Which letter best shows -21?




7. _____

- 8) Which letter best shows -14?




8. _____

- 9) Which letter best shows -13?



9. _____

- 10) Which letter best shows -114?



10. _____



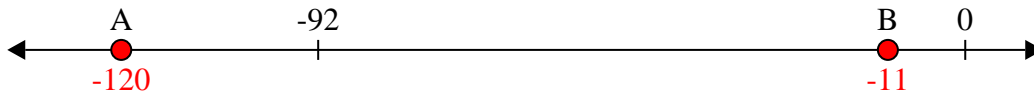
Solve each problem.

Answers

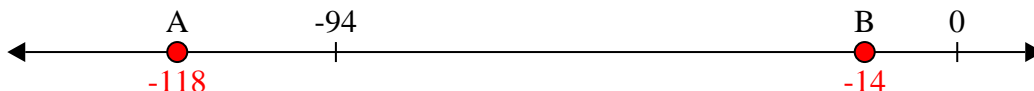
- 1) Which letter best shows -29?

1. **B**

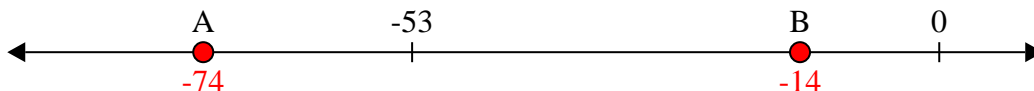
- 2) Which letter best shows -120?

2. **A**


- 3) Which letter best shows -118?

3. **A**4. **B**


- 4) Which letter best shows -14?

5. **A**6. **B**

- 5) Which letter best shows -109?

7. **B**8. **B**


- 6) Which letter best shows -28?

9. **B**10. **A**

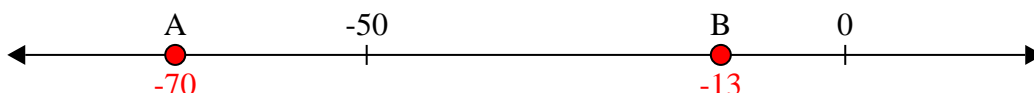
- 7) Which letter best shows -21?



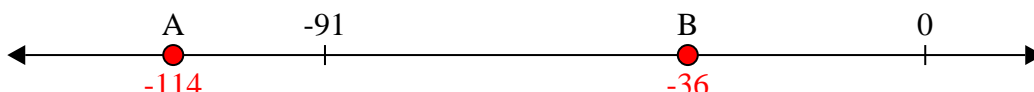
- 8) Which letter best shows -14?



- 9) Which letter best shows -13?



- 10) Which letter best shows -114?






Solve each problem.


Answers

- 1) Which letter best shows -101?



1. _____

- 2) Which letter best shows -42?



2. _____

3. _____

- 3) Which letter best shows -76?



4. _____

5. _____


- 4) Which letter best shows -110?



6. _____

7. _____


- 5) Which letter best shows -106?



8. _____


9. _____

- 6) Which letter best shows -114?




10. _____


- 7) Which letter best shows -21?




- 8) Which letter best shows -20?



- 9) Which letter best shows -79?



- 10) Which letter best shows -97?






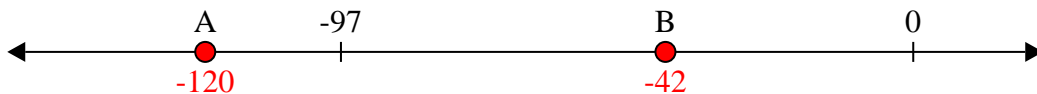
Solve each problem.

Answers

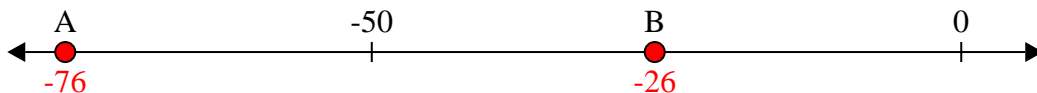
- 1) Which letter best shows -101?

1. **A**

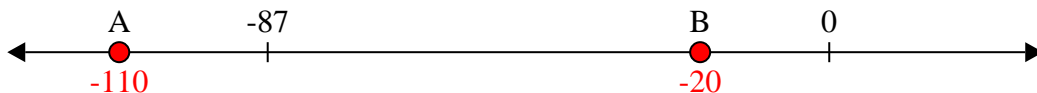
- 2) Which letter best shows -42?

2. **B**


- 3) Which letter best shows -76?

3. **A**


- 4) Which letter best shows -110?

4. **A**


- 5) Which letter best shows -106?

5. **A**


- 6) Which letter best shows -114?

6. **A**


- 7) Which letter best shows -21?

7. **B**

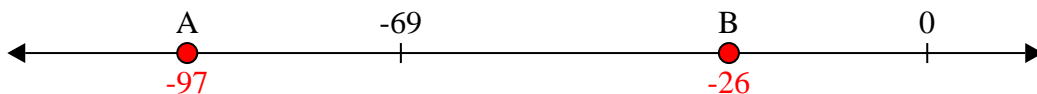
- 8) Which letter best shows -20?

8. **B**

- 9) Which letter best shows -79?

9. **A**

- 10) Which letter best shows -97?

10. **A**