




Solve each problem.

Answers

- 1) Which letter best shows -110?



1. _____

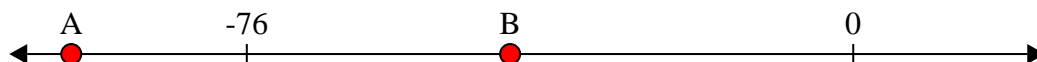
- 2) Which letter best shows -31?



2. _____

3. _____

- 3) Which letter best shows -98?



4. _____

5. _____


- 4) Which letter best shows -59?



6. _____

7. _____


- 5) Which letter best shows -19?



8. _____


9. _____

- 6) Which letter best shows -38?




10. _____


- 7) Which letter best shows -23?




- 8) Which letter best shows -28?



- 9) Which letter best shows -78?



- 10) Which letter best shows -108?






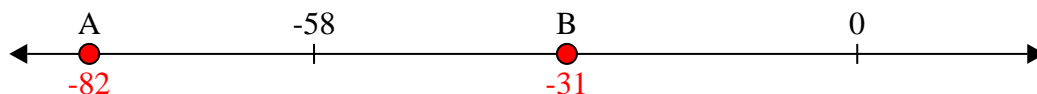
Solve each problem.

Answers

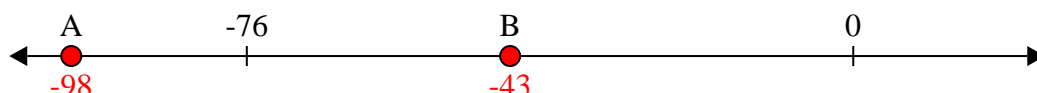
- 1) Which letter best shows -110?

1. **A**

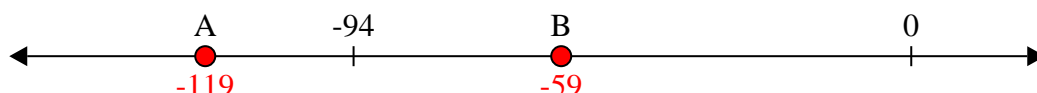
- 2) Which letter best shows -31?

2. **B**


- 3) Which letter best shows -98?

3. **A**


- 4) Which letter best shows -59?

4. **B**


- 5) Which letter best shows -19?

5. **B**


- 6) Which letter best shows -38?

6. **B**


- 7) Which letter best shows -23?

7. **B**


- 8) Which letter best shows -28?

8. **B**

- 9) Which letter best shows -78?

9. **A**

- 10) Which letter best shows -108?

10. **A**