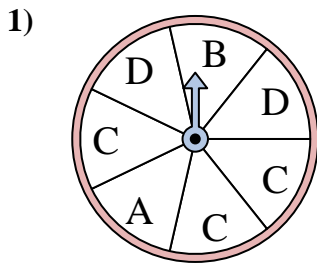
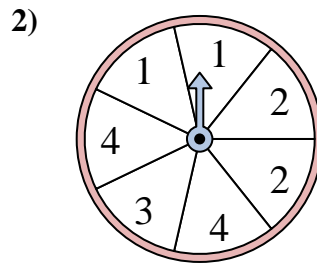




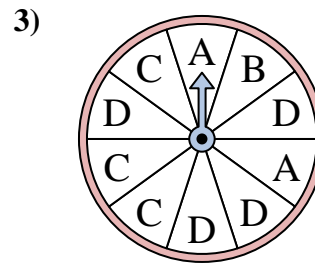
Solve each problem. Round your answer to the nearest tenth.

Answers

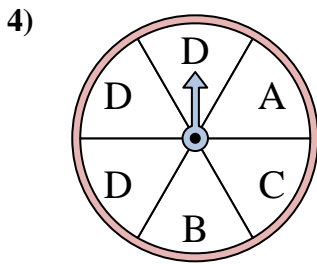
The spinner has a _____% chance of landing on a D.



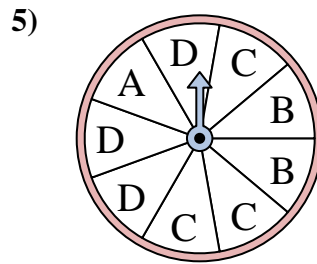
The spinner has a _____% chance of landing on a 3.



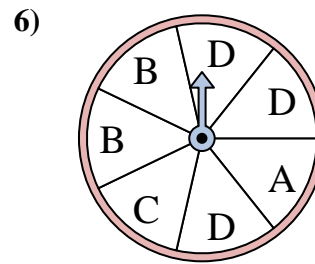
The spinner has a _____% chance of landing on a B.



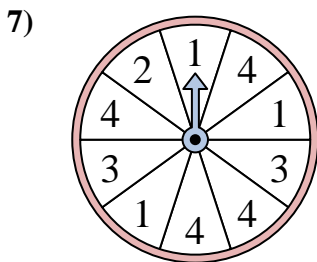
The spinner has a _____% chance of landing on a B.



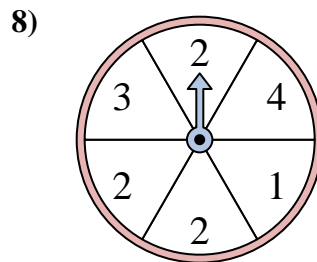
The spinner has a _____% chance of landing on a C.



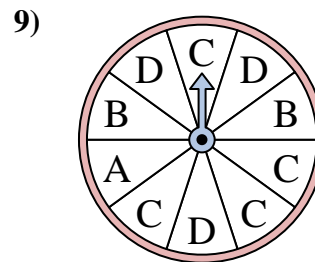
The spinner has a _____% chance of landing on a B.



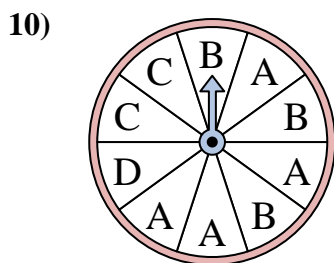
The spinner has a _____% chance of landing on a 4.



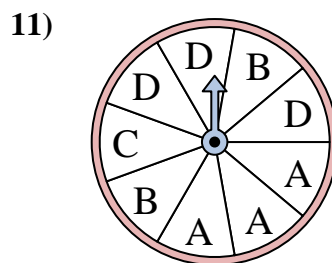
The spinner has a _____% chance of landing on a 1.



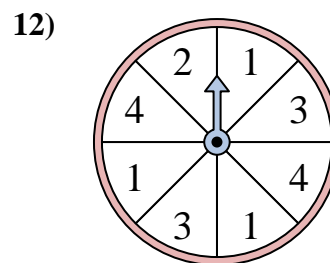
The spinner has a _____% chance of landing on a C.



The spinner has a _____% chance of landing on a D.



The spinner has a _____% chance of landing on a B.

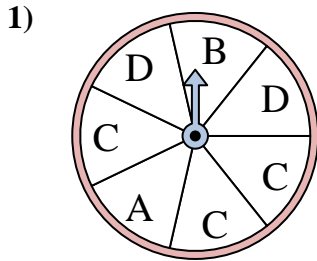


The spinner has a _____% chance of landing on a 4.

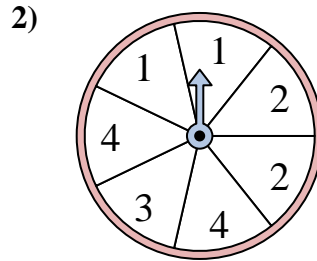
1. _____
2. _____
3. _____
4. _____
5. _____
6. _____
7. _____
8. _____
9. _____
10. _____
11. _____
12. _____



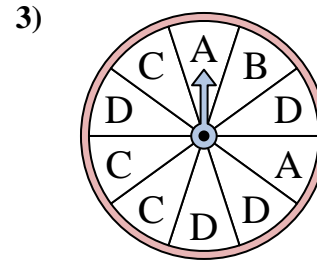
Solve each problem. Round your answer to the nearest tenth.



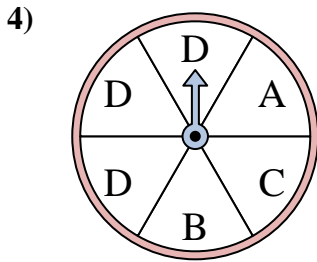
The spinner has a _____% chance of landing on a D.



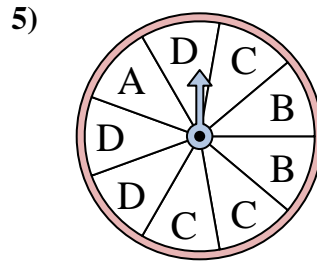
The spinner has a _____% chance of landing on a 3.



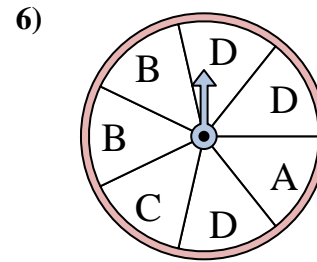
The spinner has a _____% chance of landing on a B.



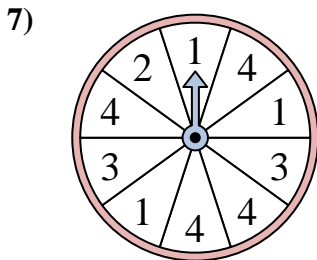
The spinner has a _____% chance of landing on a B.



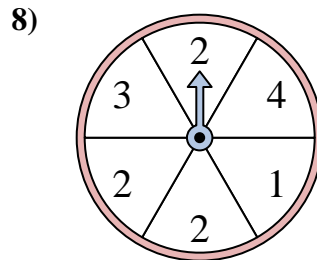
The spinner has a _____% chance of landing on a C.



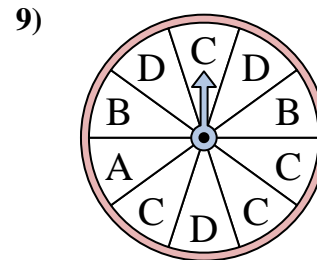
The spinner has a _____% chance of landing on a B.



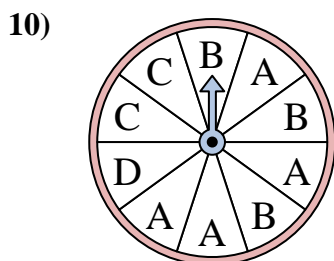
The spinner has a _____% chance of landing on a 4.



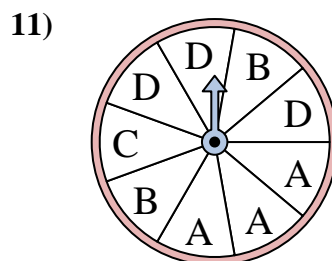
The spinner has a _____% chance of landing on a 1.



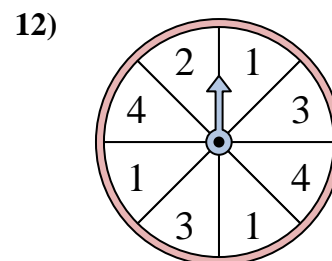
The spinner has a _____% chance of landing on a C.



The spinner has a _____% chance of landing on a D.



The spinner has a _____% chance of landing on a B.



The spinner has a _____% chance of landing on a 4.

Answers

1. 28.6
2. 14.3
3. 10
4. 16.7
5. 33.3
6. 28.6
7. 40
8. 16.7
9. 40
10. 10
11. 22.2
12. 25