





Solve each problem.

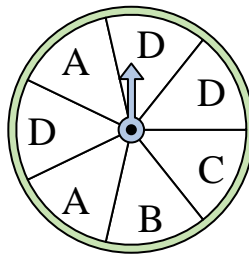
- 1) Which number is the spinner least likely to land on?



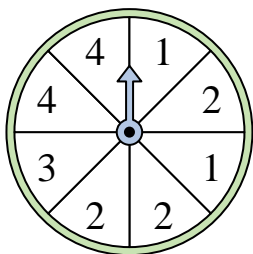
- 2) Which number is the spinner least likely to land on?



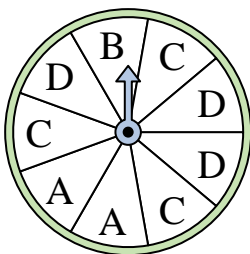
- 3) Which two letters is the spinner equally likely to land on?



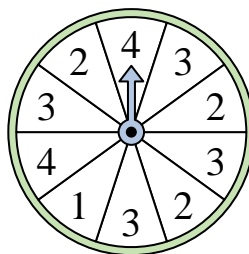
- 4) Which number is the spinner most likely to land on?




- 5) Which two letters is the spinner equally likely to land on?




- 6) Which number is the spinner least likely to land on?



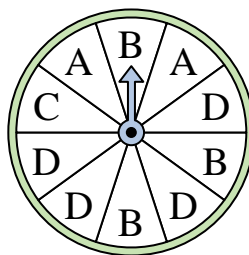
- 7) Which two numbers is the spinner equally likely to land on?



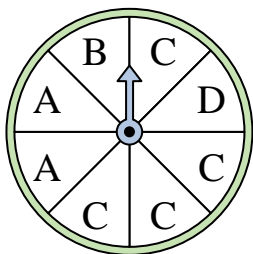
- 8) Which number is the spinner least likely to land on?



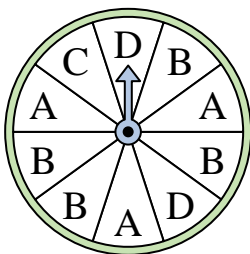
- 9) Which letter is the spinner most likely to land on?



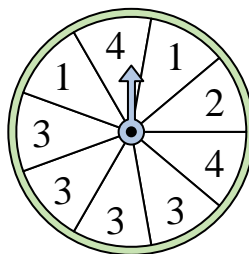
- 10) Which letter is the spinner most likely to land on?



- 11) Which letter is the spinner most likely to land on?



- 12) Which number is the spinner most likely to land on?


**Answers**

1. \_\_\_\_\_
2. \_\_\_\_\_
3. \_\_\_\_\_
4. \_\_\_\_\_
5. \_\_\_\_\_
6. \_\_\_\_\_
7. \_\_\_\_\_
8. \_\_\_\_\_
9. \_\_\_\_\_
10. \_\_\_\_\_
11. \_\_\_\_\_
12. \_\_\_\_\_

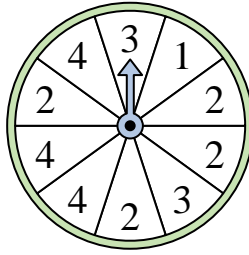


Solve each problem.

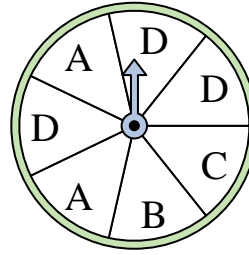
- 1) Which number is the spinner least likely to land on?



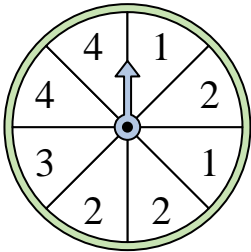
- 2) Which number is the spinner least likely to land on?



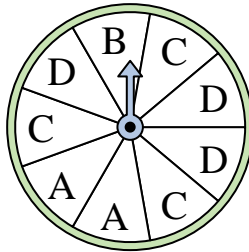
- 3) Which two letters is the spinner equally likely to land on?



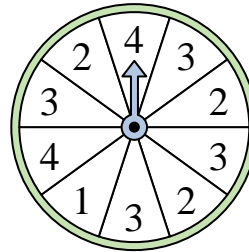
- 4) Which number is the spinner most likely to land on?




- 5) Which two letters is the spinner equally likely to land on?




- 6) Which number is the spinner least likely to land on?



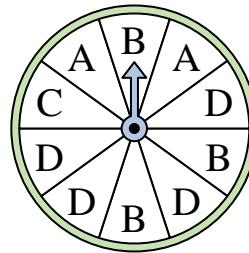
- 7) Which two numbers is the spinner equally likely to land on?



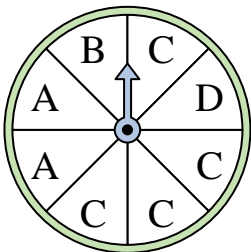
- 8) Which number is the spinner least likely to land on?



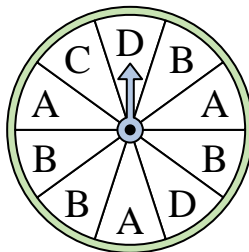
- 9) Which letter is the spinner most likely to land on?



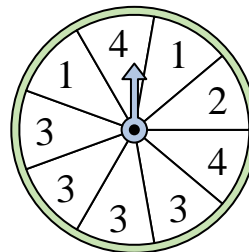
- 10) Which letter is the spinner most likely to land on?



- 11) Which letter is the spinner most likely to land on?



- 12) Which number is the spinner most likely to land on?

**Answers**

1. **1**  
2. **1**  
3. **B & C**  
4. **2**  
5. **C & D**  
6. **1**  
7. **1 & 2**  
8. **4**  
9. **D**  
10. **C**  
11. **B**  
12. **3**