




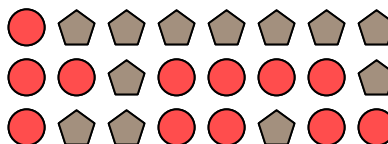
Solve each problem.

Answers

Ex) What is the ratio of circles to pentagons?



1) What is the ratio of pentagons to circles?

Ex. **8:4**


1. _____

2. _____

2) What is the ratio of hearts to stars?



3) What is the ratio of hearts to triangles?




3. _____


4. _____

5. _____

4) What is the ratio of hearts to triangles?



5) What is the ratio of squares to moons?



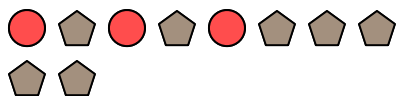
6. _____

7. _____

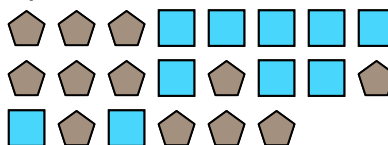
8. _____

9. _____

6) What is the ratio of pentagons to circles?



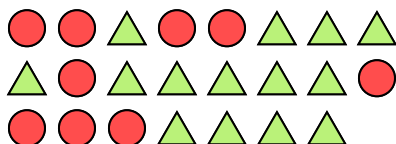
7) What is the ratio of pentagons to squares?




10. _____

11. _____

8) What is the ratio of circles to triangles?



9) What is the ratio of pentagons to moons?



10) What is the ratio of circles to triangles?




11) What is the ratio of pentagons to circles?





Solve each problem.


- Ex) What is the ratio of circles to pentagons?




- 2) What is the ratio of hearts to stars?



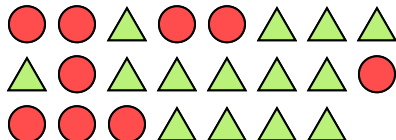
- 4) What is the ratio of hearts to triangles?



- 6) What is the ratio of pentagons to circles?



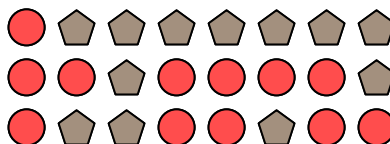
- 8) What is the ratio of circles to triangles?




- 10) What is the ratio of circles to triangles?




- 1) What is the ratio of pentagons to circles?



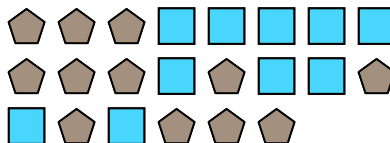
- 3) What is the ratio of hearts to triangles?




- 5) What is the ratio of squares to moons?



- 7) What is the ratio of pentagons to squares?



- 9) What is the ratio of pentagons to moons?



- 11) What is the ratio of pentagons to circles?

**Answers**Ex. **8:4**1. **12:12**2. **7:13**3. **14:11**4. **15:9**5. **15:15**6. **7:3**7. **12:10**8. **9:14**9. **15:4**10. **6:8**11. **2:4**